
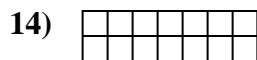
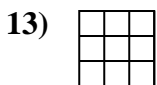
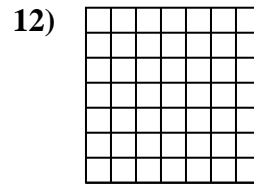
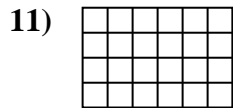
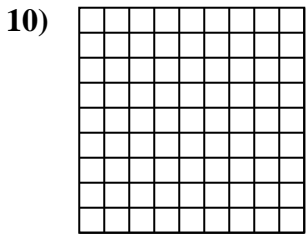

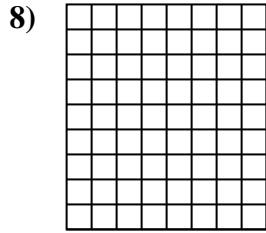
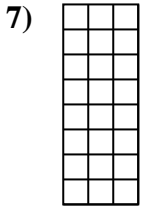
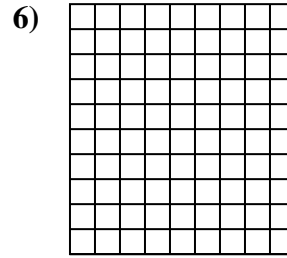
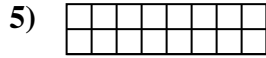
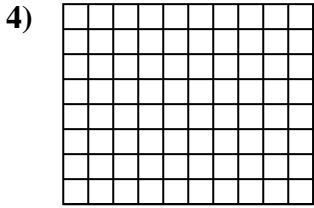
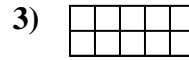
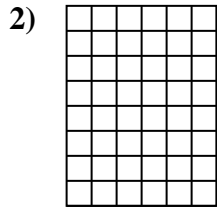
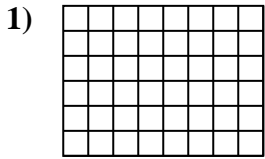




Determina el área. Cada SVGREPLACE = 1 unidad (u²)

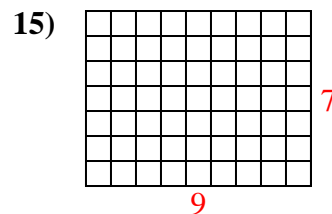
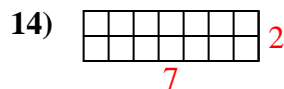
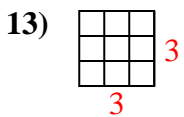
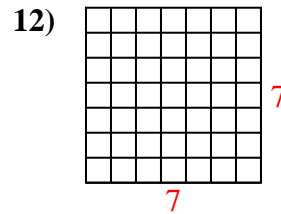
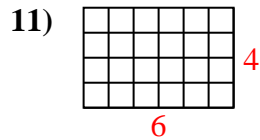
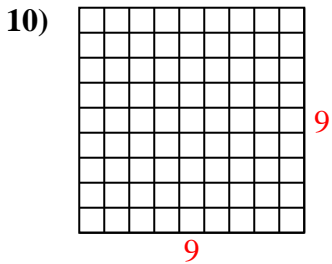
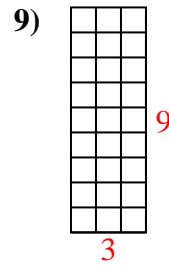
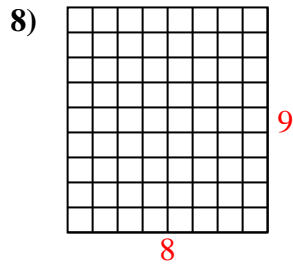
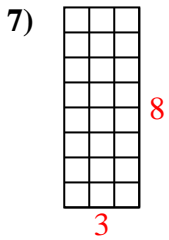
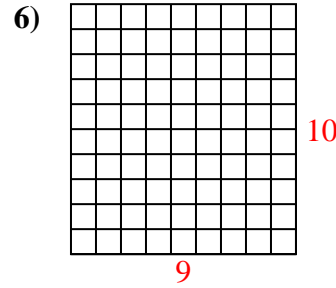
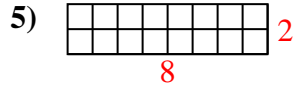
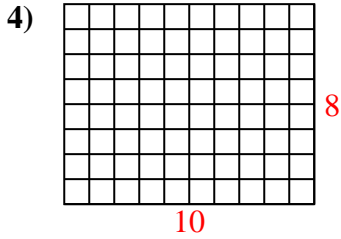
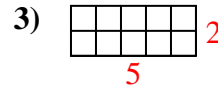
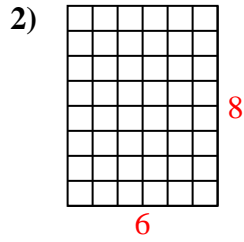
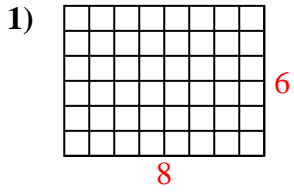


Respuestas

1. _____
2. _____
3. _____
4. _____
5. _____
6. _____
7. _____
8. _____
9. _____
10. _____
11. _____
12. _____
13. _____
14. _____
15. _____



Determina el área. Cada SVGREPLACE = 1 unidad (u^2)



Respuestas

1. 48 u^2

2. 48 u^2

3. 10 u^2

4. 80 u^2

5. 16 u^2

6. 90 u^2

7. 24 u^2

8. 72 u^2

9. 27 u^2

10. 81 u^2

11. 24 u^2

12. 49 u^2

13. 9 u^2

14. 14 u^2

15. 63 u^2