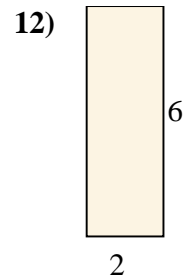
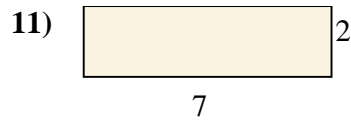
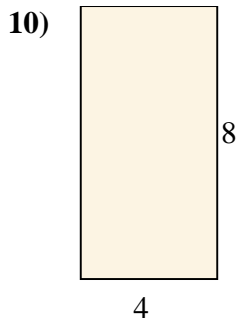


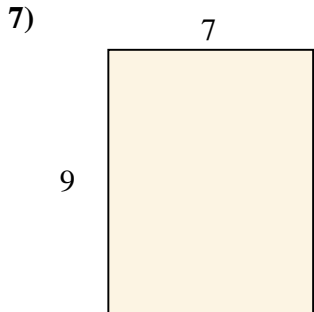
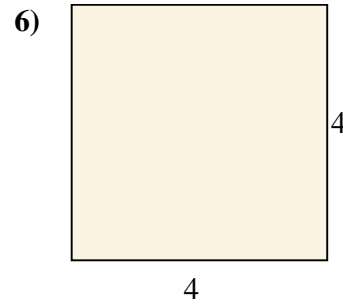
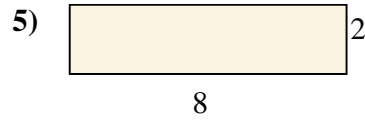
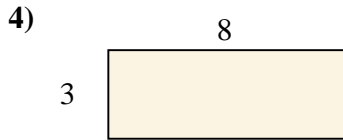
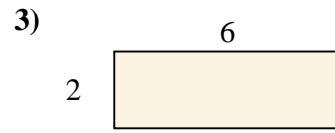
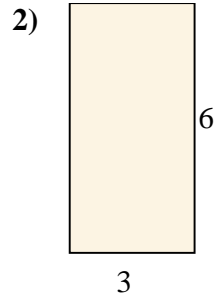
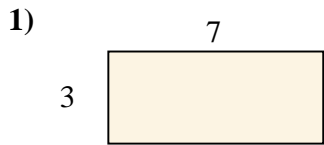




Encuentra el área (en cm) de los rectángulos mostrados.

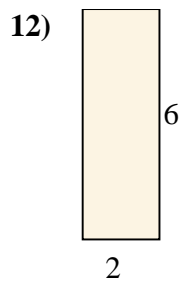
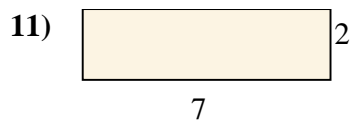
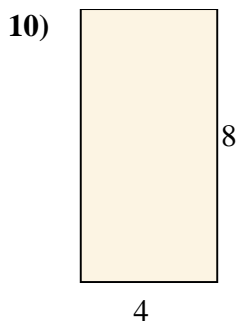
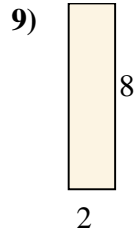
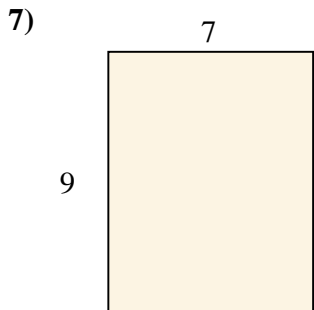
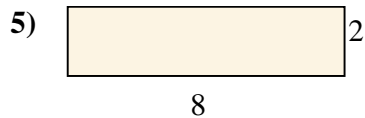
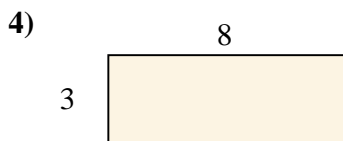
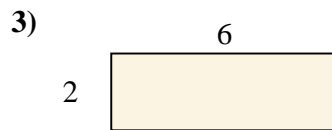
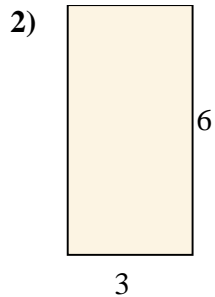
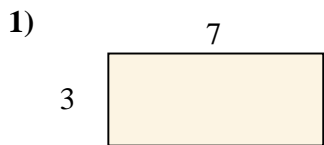


Respuestas

- 1. _____
- 2. _____
- 3. _____
- 4. _____
- 5. _____
- 6. _____
- 7. _____
- 8. _____
- 9. _____
- 10. _____
- 11. _____
- 12. _____



Encuentra el área (en cm) de los rectángulos mostrados.



Respuestas

1. 21

2. 18

3. 12

4. 24

5. 16

6. 16

7. 63

8. 27

9. 16

10. 32

11. 14

12. 12