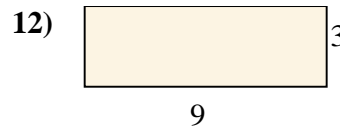
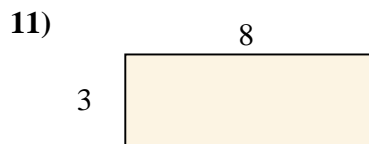
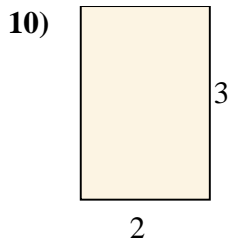
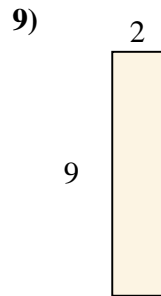
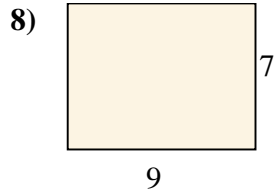
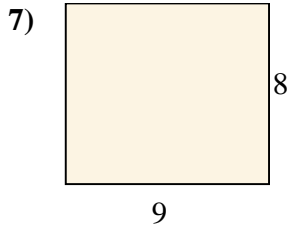
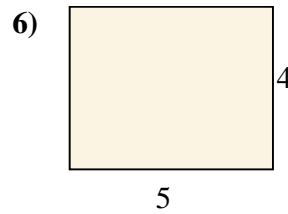
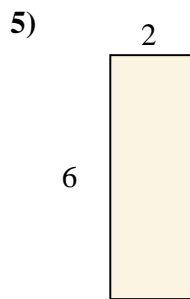
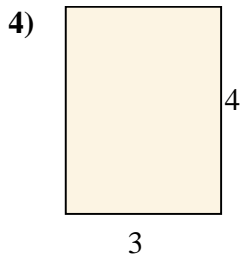
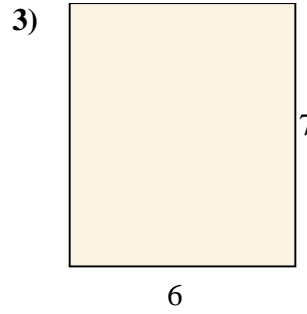
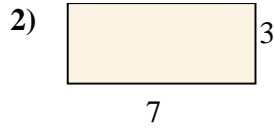
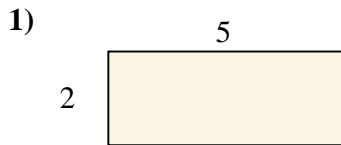




Encuentra el área (en cm) de los rectángulos mostrados.

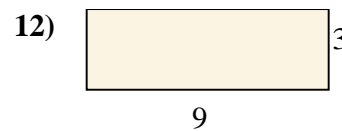
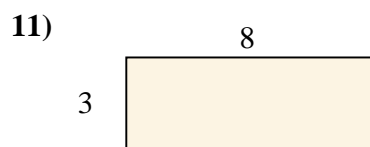
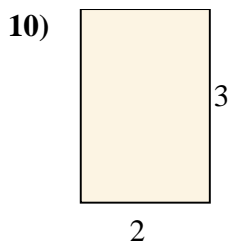
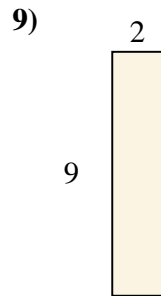
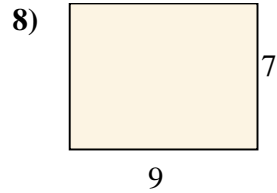
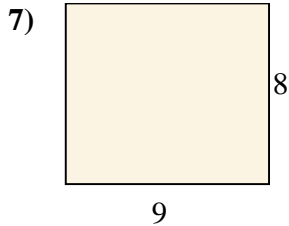
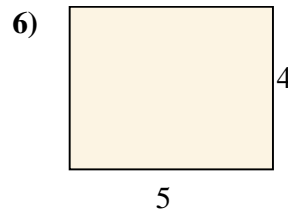
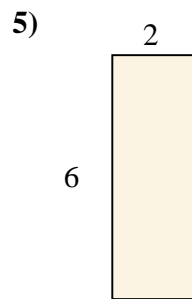
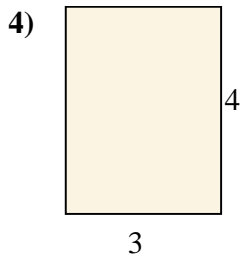
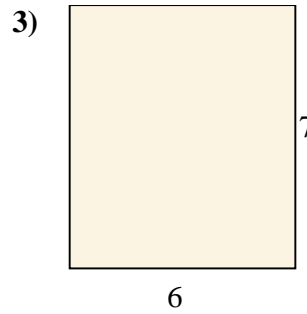
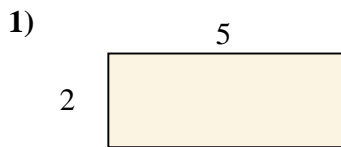


**Respuestas**

- 1. \_\_\_\_\_
- 2. \_\_\_\_\_
- 3. \_\_\_\_\_
- 4. \_\_\_\_\_
- 5. \_\_\_\_\_
- 6. \_\_\_\_\_
- 7. \_\_\_\_\_
- 8. \_\_\_\_\_
- 9. \_\_\_\_\_
- 10. \_\_\_\_\_
- 11. \_\_\_\_\_
- 12. \_\_\_\_\_



Encuentra el área (en cm) de los rectángulos mostrados.



**Respuestas**

1. 10

2. 21

3. 42

4. 12

5. 12

6. 20

7. 72

8. 63

9. 18

10. 6

11. 24

12. 27