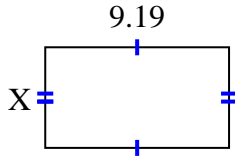


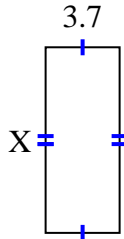


Encuentra el valor de X para cada figura. Cada figura está en centímetros (cm). No a escala.

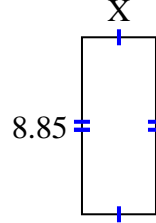
1) area = 46.2257 cm^2



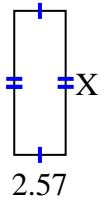
2) area = 34.336 cm^2



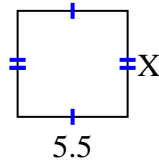
3) area = 32.745 cm^2



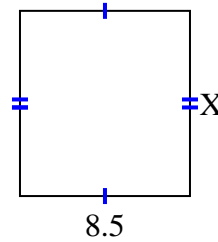
4) area = 18.504 cm^2



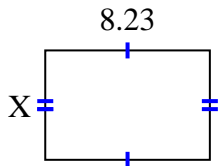
5) area = 29.15 cm^2



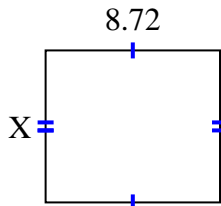
6) area = 78.71 cm^2



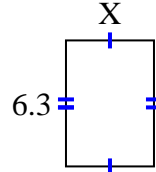
7) area = 45.0181 cm^2



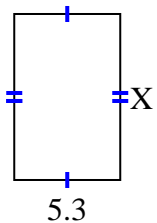
8) area = 66.272 cm^2



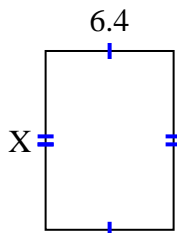
9) area = 27.72 cm^2



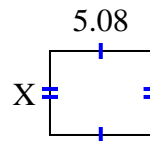
10) area = 43.99 cm^2



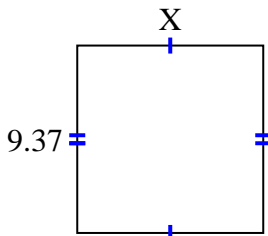
11) area = 57.216 cm^2



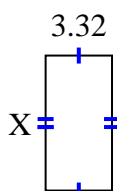
12) area = 21.336 cm^2



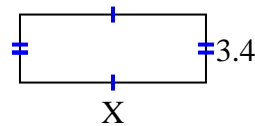
13) area = 87.141 cm^2



14) area = 22.41 cm^2



15) area = 31.62 cm^2



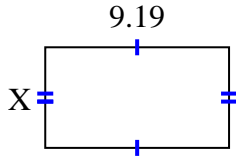
Respuestas

1. _____
2. _____
3. _____
4. _____
5. _____
6. _____
7. _____
8. _____
9. _____
10. _____
11. _____
12. _____
13. _____
14. _____
15. _____

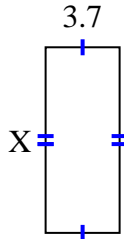


Encuentra el valor de X para cada figura. Cada figura está en centímetros (cm). No a escala.

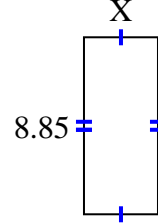
1) area = 46.2257 cm^2



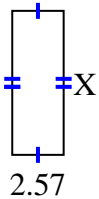
2) area = 34.336 cm^2



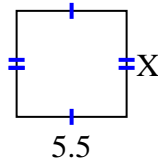
3) area = 32.745 cm^2



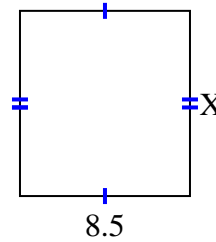
4) area = 18.504 cm^2



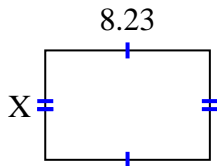
5) area = 29.15 cm^2



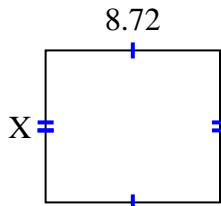
6) area = 78.71 cm^2



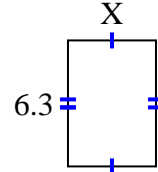
7) area = 45.0181 cm^2



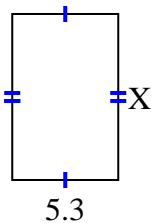
8) area = 66.272 cm^2



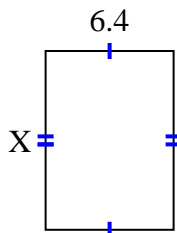
9) area = 27.72 cm^2



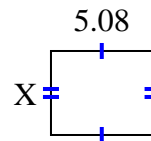
10) area = 43.99 cm^2



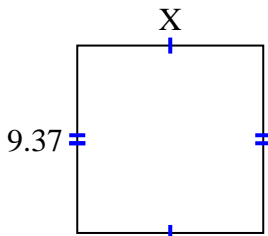
11) area = 57.216 cm^2



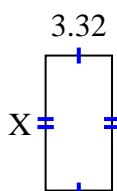
12) area = 21.336 cm^2



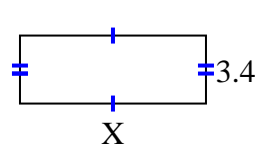
13) area = 87.141 cm^2



14) area = 22.41 cm^2



15) area = 31.62 cm^2

**Respuestas**1. **5.03**2. **9.28**3. **3.7**4. **7.2**5. **5.3**6. **9.26**7. **5.47**8. **7.6**9. **4.4**10. **8.3**11. **8.94**12. **4.2**13. **9.3**14. **6.75**15. **9.3**