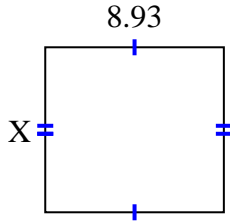


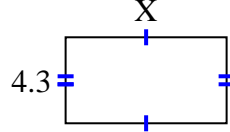


Encuentra el valor de X para cada figura. Cada figura está en centímetros (cm). No a escala.

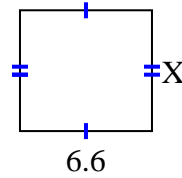
1) area = 73.6725 cm^2



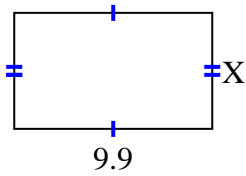
2) area = 34.615 cm^2



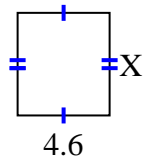
3) area = 39.864 cm^2



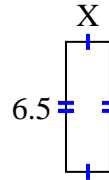
4) area = 57.42 cm^2



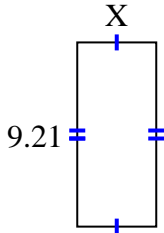
5) area = 23.598 cm^2



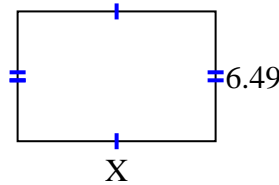
6) area = 14.3 cm^2



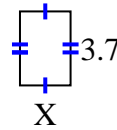
7) area = 36.3795 cm^2



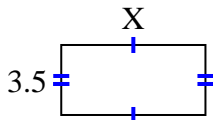
8) area = 64.251 cm^2



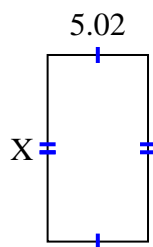
9) area = 9.361 cm^2



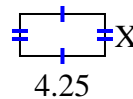
10) area = 25.235 cm^2



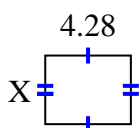
11) area = 46.8366 cm^2



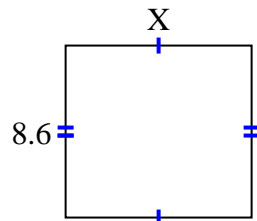
12) area = 8.925 cm^2



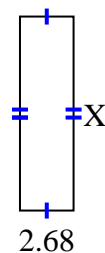
13) area = 14.6804 cm^2



14) area = 79.98 cm^2



15) area = 25.996 cm^2



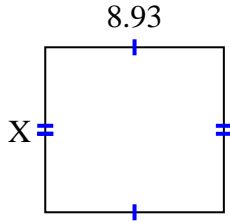
Respuestas

1. _____
2. _____
3. _____
4. _____
5. _____
6. _____
7. _____
8. _____
9. _____
10. _____
11. _____
12. _____
13. _____
14. _____
15. _____

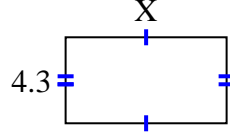


Encuentra el valor de X para cada figura. Cada figura está en centímetros (cm). No a escala.

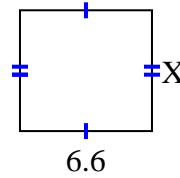
1) area = 73.6725 cm^2



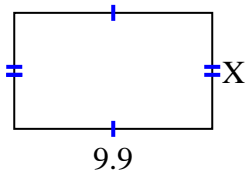
2) area = 34.615 cm^2



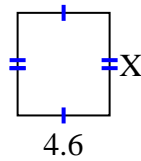
3) area = 39.864 cm^2



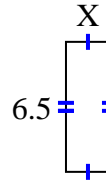
4) area = 57.42 cm^2



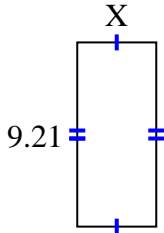
5) area = 23.598 cm^2



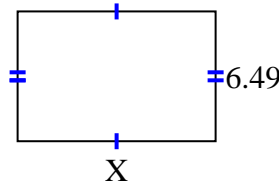
6) area = 14.3 cm^2



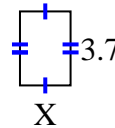
7) area = 36.3795 cm^2



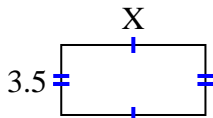
8) area = 64.251 cm^2



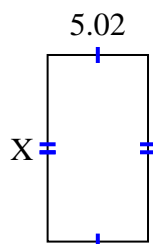
9) area = 9.361 cm^2



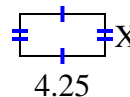
10) area = 25.235 cm^2



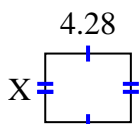
11) area = 46.8366 cm^2



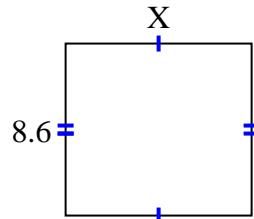
12) area = 8.925 cm^2



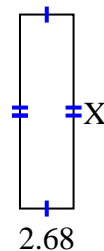
13) area = 14.6804 cm^2



14) area = 79.98 cm^2



15) area = 25.996 cm^2

**Respuestas**1. **8.25**2. **8.05**3. **6.04**4. **5.8**5. **5.13**6. **2.2**7. **3.95**8. **9.9**9. **2.53**10. **7.21**11. **9.33**12. **2.1**13. **3.43**14. **9.3**15. **9.7**