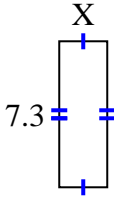


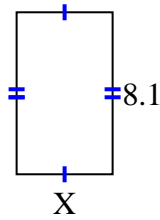


Encuentra el valor de X para cada figura. Cada figura está en centímetros (cm). No a escala.

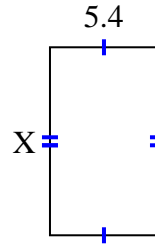
1) area = 17.52 cm^2



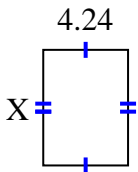
2) area = 38.88 cm^2



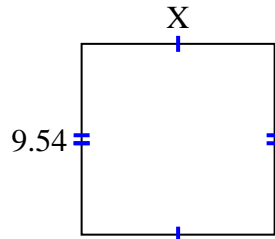
3) area = 50.76 cm^2



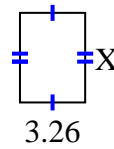
4) area = 24.5072 cm^2



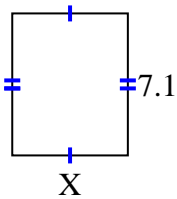
5) area = 92.061 cm^2



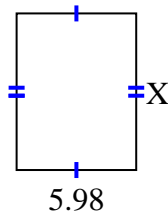
6) area = 14.6048 cm^2



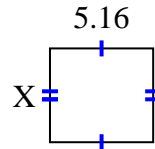
7) area = 41.038 cm^2



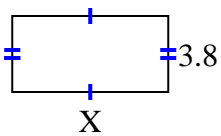
8) area = 46.8234 cm^2



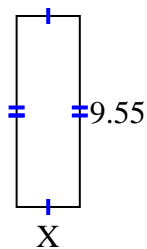
9) area = 24.2004 cm^2



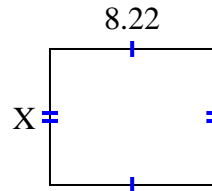
10) area = 29.64 cm^2



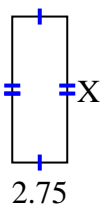
11) area = 30.178 cm^2



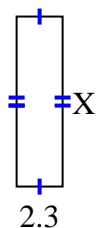
12) area = 55.896 cm^2



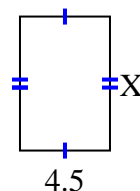
13) area = 20.075 cm^2



14) area = 19.55 cm^2



15) area = 30.15 cm^2



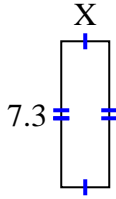
Respuestas

1. _____
2. _____
3. _____
4. _____
5. _____
6. _____
7. _____
8. _____
9. _____
10. _____
11. _____
12. _____
13. _____
14. _____
15. _____

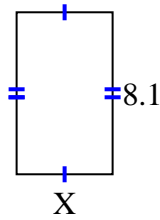


Encuentra el valor de X para cada figura. Cada figura está en centímetros (cm). No a escala.

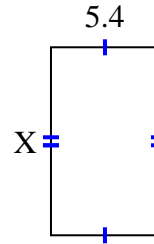
1) area = 17.52 cm^2



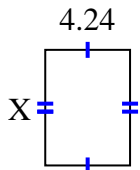
2) area = 38.88 cm^2



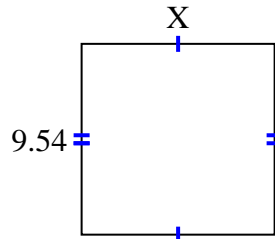
3) area = 50.76 cm^2



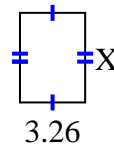
4) area = 24.5072 cm^2



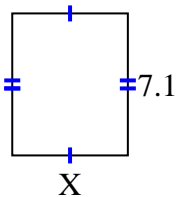
5) area = 92.061 cm^2



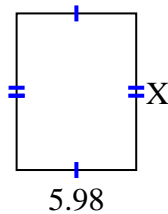
6) area = 14.6048 cm^2



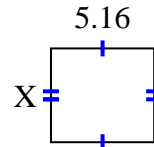
7) area = 41.038 cm^2



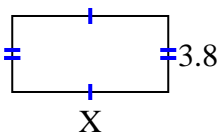
8) area = 46.8234 cm^2



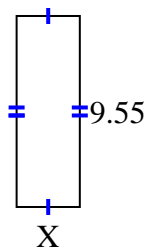
9) area = 24.2004 cm^2



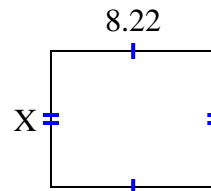
10) area = 29.64 cm^2



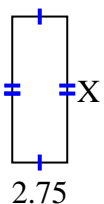
11) area = 30.178 cm^2



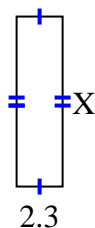
12) area = 55.896 cm^2



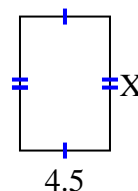
13) area = 20.075 cm^2



14) area = 19.55 cm^2



15) area = 30.15 cm^2

**Respuestas**1. 2.42. 4.83. 9.44. 5.785. 9.656. 4.487. 5.788. 7.839. 4.6910. 7.811. 3.1612. 6.813. 7.314. 8.515. 6.7