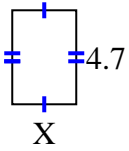


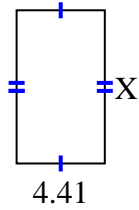


Encuentra el valor de X para cada figura. Cada figura está en centímetros (cm). No a escala.

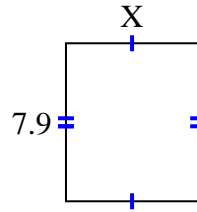
1) area = 15.04 cm^2



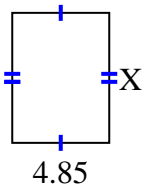
2) area = 33.7806 cm^2



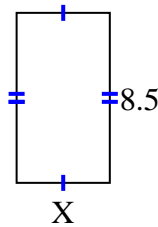
3) area = 52.219 cm^2



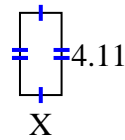
4) area = 31.525 cm^2



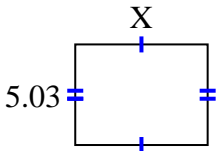
5) area = 39.61 cm^2



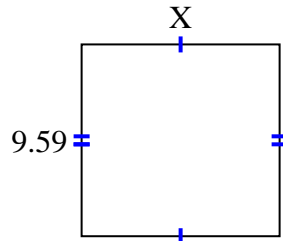
6) area = 8.5488 cm^2



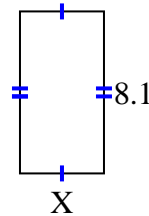
7) area = 33.2986 cm^2



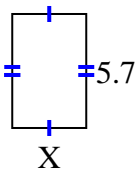
8) area = 94.941 cm^2



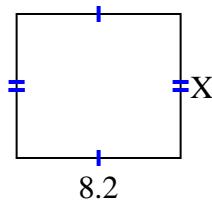
9) area = 34.02 cm^2



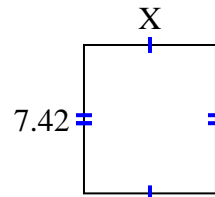
10) area = 21.09 cm^2



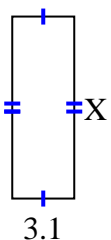
11) area = 59.04 cm^2



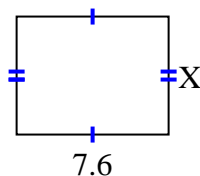
12) area = 48.972 cm^2



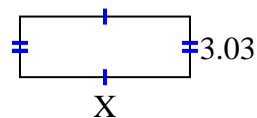
13) area = 28.21 cm^2



14) area = 44.84 cm^2



15) area = 25.755 cm^2



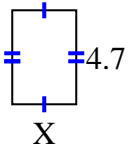
Respuestas

1. _____
2. _____
3. _____
4. _____
5. _____
6. _____
7. _____
8. _____
9. _____
10. _____
11. _____
12. _____
13. _____
14. _____
15. _____

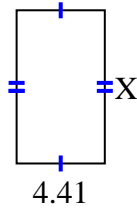


Encuentra el valor de X para cada figura. Cada figura está en centímetros (cm). No a escala.

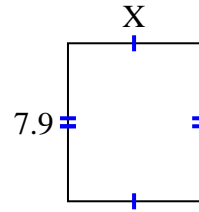
1) area = 15.04 cm^2



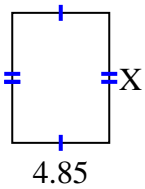
2) area = 33.7806 cm^2



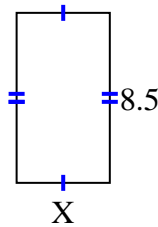
3) area = 52.219 cm^2



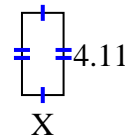
4) area = 31.525 cm^2



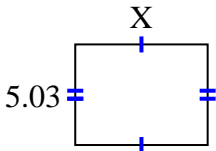
5) area = 39.61 cm^2



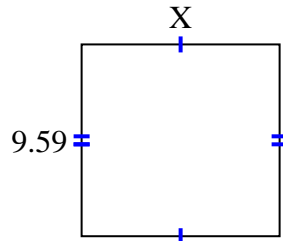
6) area = 8.5488 cm^2



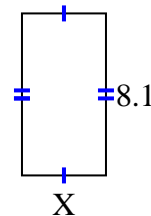
7) area = 33.2986 cm^2



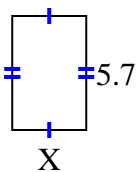
8) area = 94.941 cm^2



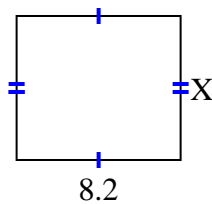
9) area = 34.02 cm^2



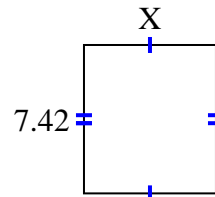
10) area = 21.09 cm^2



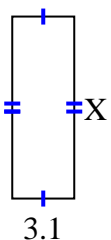
11) area = 59.04 cm^2



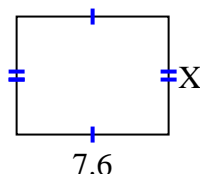
12) area = 48.972 cm^2



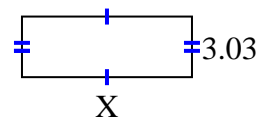
13) area = 28.21 cm^2



14) area = 44.84 cm^2



15) area = 25.755 cm^2



Respuestas

1. 3.2

2. 7.66

3. 6.61

4. 6.5

5. 4.66

6. 2.08

7. 6.62

8. 9.9

9. 4.2

10. 3.7

11. 7.2

12. 6.6

13. 9.1

14. 5.9

15. 8.5