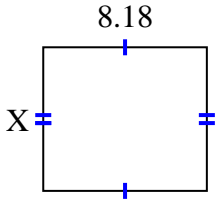


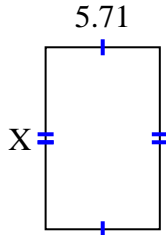


**Encuentra el valor de X para cada figura. Cada figura está en centímetros (cm). No a escala.**

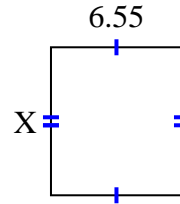
1) area =  $58.7324 \text{ cm}^2$



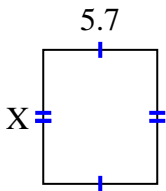
2) area =  $51.961 \text{ cm}^2$



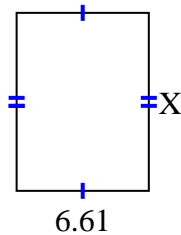
3) area =  $48.47 \text{ cm}^2$



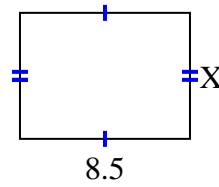
4) area =  $38.19 \text{ cm}^2$



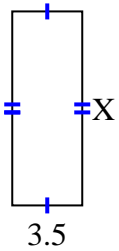
5) area =  $58.829 \text{ cm}^2$



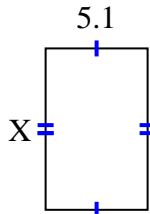
6) area =  $53.55 \text{ cm}^2$



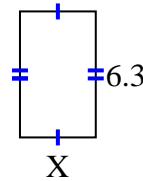
7) area =  $33.95 \text{ cm}^2$



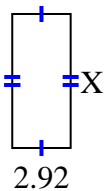
8) area =  $41.157 \text{ cm}^2$



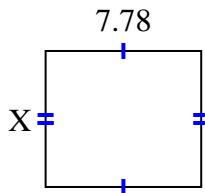
9) area =  $23.877 \text{ cm}^2$



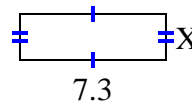
10) area =  $19.564 \text{ cm}^2$



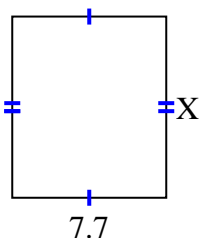
11) area =  $52.904 \text{ cm}^2$



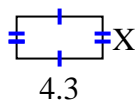
12) area =  $16.79 \text{ cm}^2$



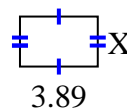
13) area =  $69.762 \text{ cm}^2$



14) area =  $9.03 \text{ cm}^2$



15) area =  $9.725 \text{ cm}^2$



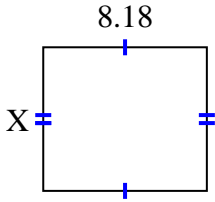
**Respuestas**

1. \_\_\_\_\_
2. \_\_\_\_\_
3. \_\_\_\_\_
4. \_\_\_\_\_
5. \_\_\_\_\_
6. \_\_\_\_\_
7. \_\_\_\_\_
8. \_\_\_\_\_
9. \_\_\_\_\_
10. \_\_\_\_\_
11. \_\_\_\_\_
12. \_\_\_\_\_
13. \_\_\_\_\_
14. \_\_\_\_\_
15. \_\_\_\_\_

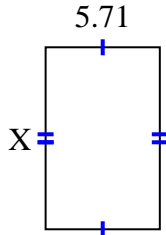


Encuentra el valor de X para cada figura. Cada figura está en centímetros (cm). No a escala.

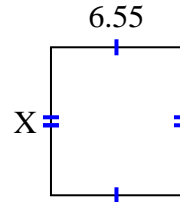
1) area =  $58.7324 \text{ cm}^2$



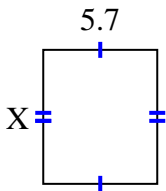
2) area =  $51.961 \text{ cm}^2$



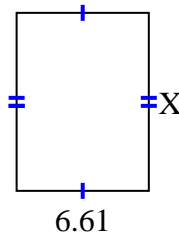
3) area =  $48.47 \text{ cm}^2$



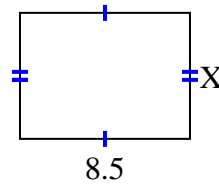
4) area =  $38.19 \text{ cm}^2$



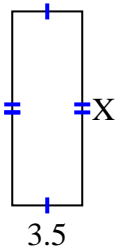
5) area =  $58.829 \text{ cm}^2$



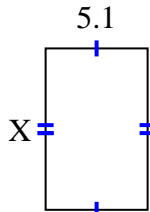
6) area =  $53.55 \text{ cm}^2$



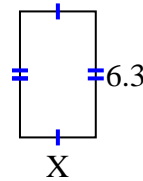
7) area =  $33.95 \text{ cm}^2$



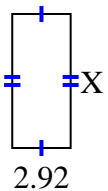
8) area =  $41.157 \text{ cm}^2$



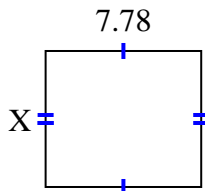
9) area =  $23.877 \text{ cm}^2$



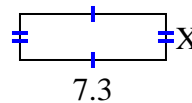
10) area =  $19.564 \text{ cm}^2$



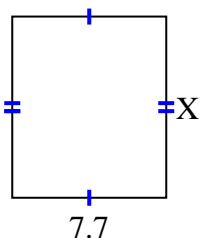
11) area =  $52.904 \text{ cm}^2$



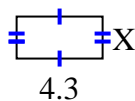
12) area =  $16.79 \text{ cm}^2$



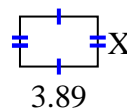
13) area =  $69.762 \text{ cm}^2$



14) area =  $9.03 \text{ cm}^2$



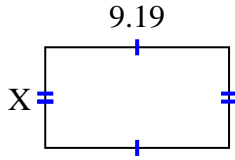
15) area =  $9.725 \text{ cm}^2$

**Respuestas**1. 7.182. 9.13. 7.44. 6.75. 8.96. 6.37. 9.78. 8.079. 3.7910. 6.711. 6.812. 2.313. 9.0614. 2.115. 2.5

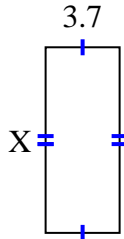


Encuentra el valor de X para cada figura. Cada figura está en centímetros (cm). No a escala.

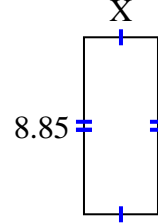
1) area =  $46.2257 \text{ cm}^2$



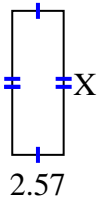
2) area =  $34.336 \text{ cm}^2$



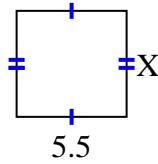
3) area =  $32.745 \text{ cm}^2$



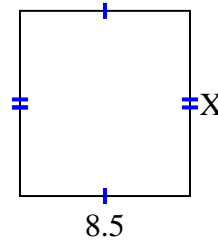
4) area =  $18.504 \text{ cm}^2$



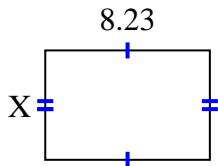
5) area =  $29.15 \text{ cm}^2$



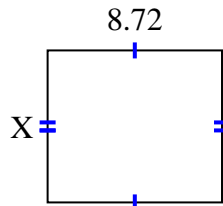
6) area =  $78.71 \text{ cm}^2$



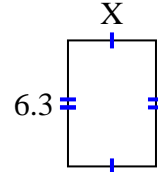
7) area =  $45.0181 \text{ cm}^2$



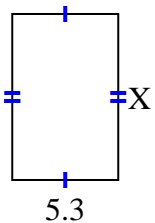
8) area =  $66.272 \text{ cm}^2$



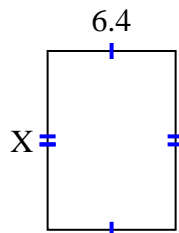
9) area =  $27.72 \text{ cm}^2$



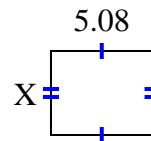
10) area =  $43.99 \text{ cm}^2$



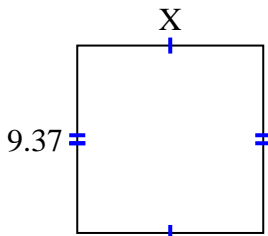
11) area =  $57.216 \text{ cm}^2$



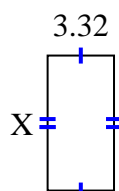
12) area =  $21.336 \text{ cm}^2$



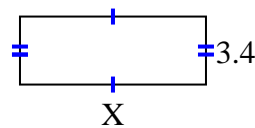
13) area =  $87.141 \text{ cm}^2$



14) area =  $22.41 \text{ cm}^2$



15) area =  $31.62 \text{ cm}^2$

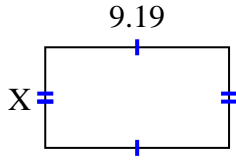
**Respuestas**

1. \_\_\_\_\_
2. \_\_\_\_\_
3. \_\_\_\_\_
4. \_\_\_\_\_
5. \_\_\_\_\_
6. \_\_\_\_\_
7. \_\_\_\_\_
8. \_\_\_\_\_
9. \_\_\_\_\_
10. \_\_\_\_\_
11. \_\_\_\_\_
12. \_\_\_\_\_
13. \_\_\_\_\_
14. \_\_\_\_\_
15. \_\_\_\_\_

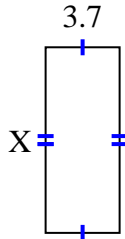


Encuentra el valor de X para cada figura. Cada figura está en centímetros (cm). No a escala.

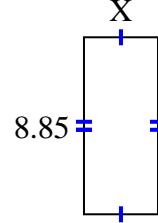
1) area =  $46.2257 \text{ cm}^2$



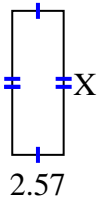
2) area =  $34.336 \text{ cm}^2$



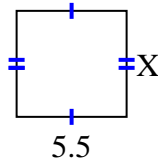
3) area =  $32.745 \text{ cm}^2$



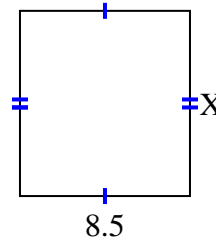
4) area =  $18.504 \text{ cm}^2$



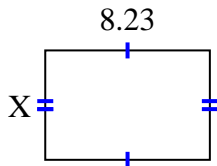
5) area =  $29.15 \text{ cm}^2$



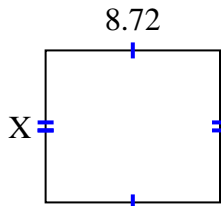
6) area =  $78.71 \text{ cm}^2$



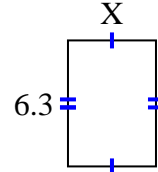
7) area =  $45.0181 \text{ cm}^2$



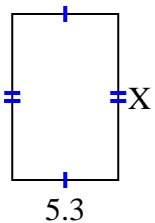
8) area =  $66.272 \text{ cm}^2$



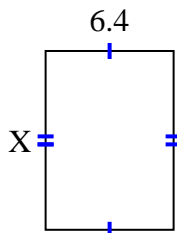
9) area =  $27.72 \text{ cm}^2$



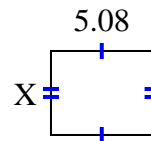
10) area =  $43.99 \text{ cm}^2$



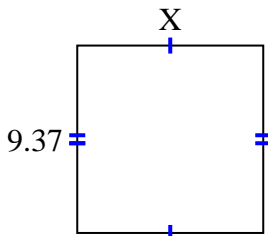
11) area =  $57.216 \text{ cm}^2$



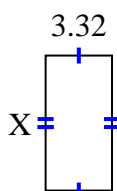
12) area =  $21.336 \text{ cm}^2$



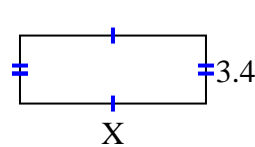
13) area =  $87.141 \text{ cm}^2$



14) area =  $22.41 \text{ cm}^2$



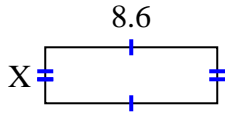
15) area =  $31.62 \text{ cm}^2$

**Respuestas**1. **5.03**2. **9.28**3. **3.7**4. **7.2**5. **5.3**6. **9.26**7. **5.47**8. **7.6**9. **4.4**10. **8.3**11. **8.94**12. **4.2**13. **9.3**14. **6.75**15. **9.3**

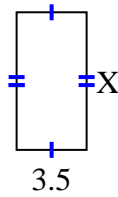


**Encuentra el valor de X para cada figura. Cada figura está en centímetros (cm). No a escala.**

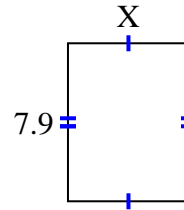
1) area =  $24.08 \text{ cm}^2$



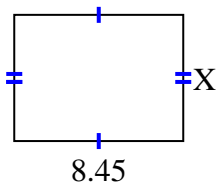
2) area =  $24.08 \text{ cm}^2$



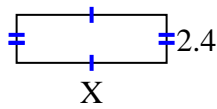
3) area =  $47.795 \text{ cm}^2$



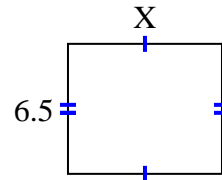
4) area =  $53.3195 \text{ cm}^2$



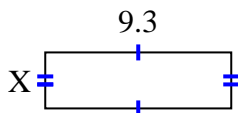
5) area =  $18 \text{ cm}^2$



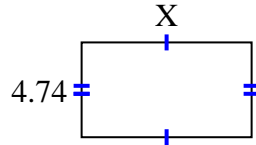
6) area =  $50.05 \text{ cm}^2$



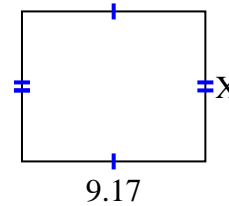
7) area =  $26.04 \text{ cm}^2$



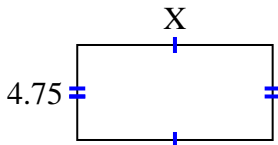
8) area =  $40.29 \text{ cm}^2$



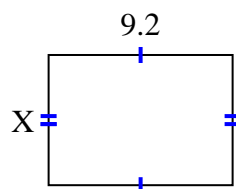
9) area =  $68.775 \text{ cm}^2$



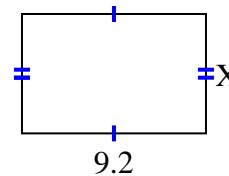
10) area =  $46.4075 \text{ cm}^2$



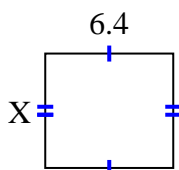
11) area =  $59.892 \text{ cm}^2$



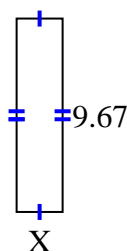
12) area =  $54.924 \text{ cm}^2$



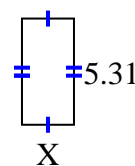
13) area =  $36.608 \text{ cm}^2$



14) area =  $22.241 \text{ cm}^2$



15) area =  $13.806 \text{ cm}^2$



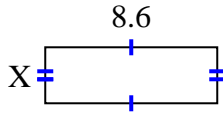
**Respuestas**

1. \_\_\_\_\_
2. \_\_\_\_\_
3. \_\_\_\_\_
4. \_\_\_\_\_
5. \_\_\_\_\_
6. \_\_\_\_\_
7. \_\_\_\_\_
8. \_\_\_\_\_
9. \_\_\_\_\_
10. \_\_\_\_\_
11. \_\_\_\_\_
12. \_\_\_\_\_
13. \_\_\_\_\_
14. \_\_\_\_\_
15. \_\_\_\_\_

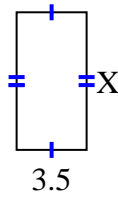


Encuentra el valor de X para cada figura. Cada figura está en centímetros (cm). No a escala.

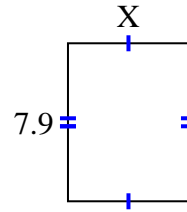
1) area =  $24.08 \text{ cm}^2$



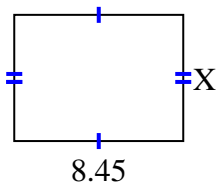
2) area =  $24.08 \text{ cm}^2$



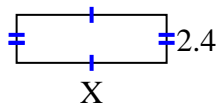
3) area =  $47.795 \text{ cm}^2$



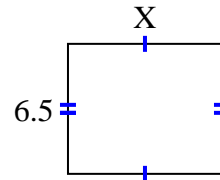
4) area =  $53.3195 \text{ cm}^2$



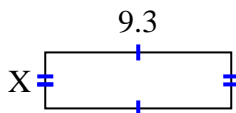
5) area =  $18 \text{ cm}^2$



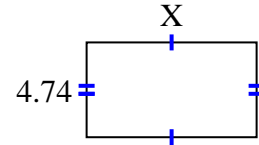
6) area =  $50.05 \text{ cm}^2$



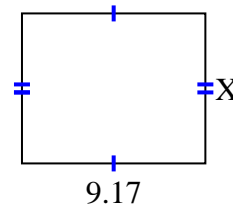
7) area =  $26.04 \text{ cm}^2$



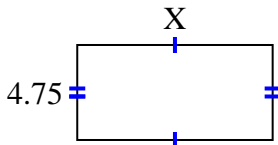
8) area =  $40.29 \text{ cm}^2$



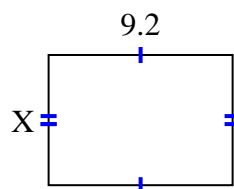
9) area =  $68.775 \text{ cm}^2$



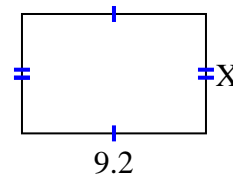
10) area =  $46.4075 \text{ cm}^2$



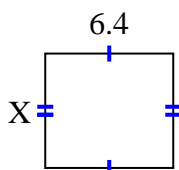
11) area =  $59.892 \text{ cm}^2$



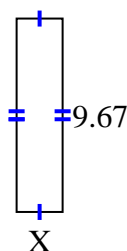
12) area =  $54.924 \text{ cm}^2$



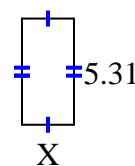
13) area =  $36.608 \text{ cm}^2$



14) area =  $22.241 \text{ cm}^2$



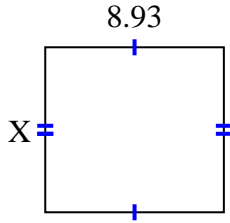
15) area =  $13.806 \text{ cm}^2$

**Respuestas**1. 2.82. 6.883. 6.054. 6.315. 7.56. 7.77. 2.88. 8.59. 7.510. 9.7711. 6.5112. 5.9713. 5.7214. 2.315. 2.6

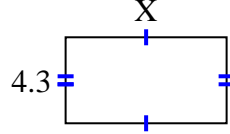


**Encuentra el valor de X para cada figura. Cada figura está en centímetros (cm). No a escala.**

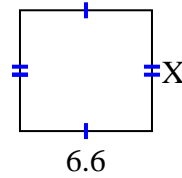
1) area =  $73.6725 \text{ cm}^2$



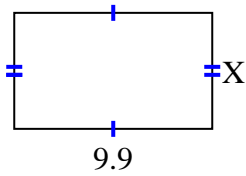
2) area =  $34.615 \text{ cm}^2$



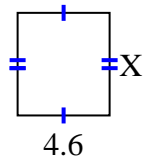
3) area =  $39.864 \text{ cm}^2$



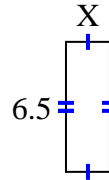
4) area =  $57.42 \text{ cm}^2$



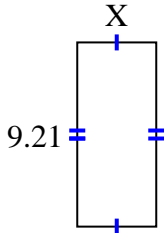
5) area =  $23.598 \text{ cm}^2$



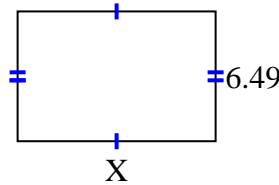
6) area =  $14.3 \text{ cm}^2$



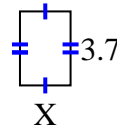
7) area =  $36.3795 \text{ cm}^2$



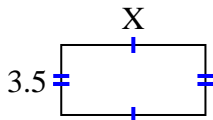
8) area =  $64.251 \text{ cm}^2$



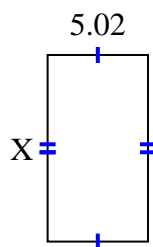
9) area =  $9.361 \text{ cm}^2$



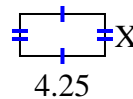
10) area =  $25.235 \text{ cm}^2$



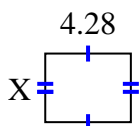
11) area =  $46.8366 \text{ cm}^2$



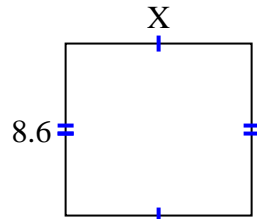
12) area =  $8.925 \text{ cm}^2$



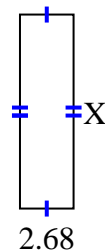
13) area =  $14.6804 \text{ cm}^2$



14) area =  $79.98 \text{ cm}^2$



15) area =  $25.996 \text{ cm}^2$



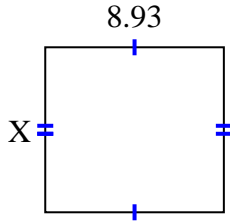
**Respuestas**

1. \_\_\_\_\_
2. \_\_\_\_\_
3. \_\_\_\_\_
4. \_\_\_\_\_
5. \_\_\_\_\_
6. \_\_\_\_\_
7. \_\_\_\_\_
8. \_\_\_\_\_
9. \_\_\_\_\_
10. \_\_\_\_\_
11. \_\_\_\_\_
12. \_\_\_\_\_
13. \_\_\_\_\_
14. \_\_\_\_\_
15. \_\_\_\_\_

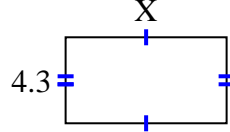


Encuentra el valor de X para cada figura. Cada figura está en centímetros (cm). No a escala.

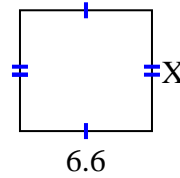
1) area =  $73.6725 \text{ cm}^2$



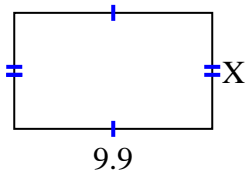
2) area =  $34.615 \text{ cm}^2$



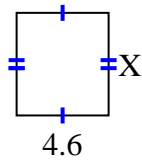
3) area =  $39.864 \text{ cm}^2$



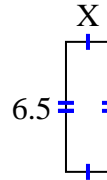
4) area =  $57.42 \text{ cm}^2$



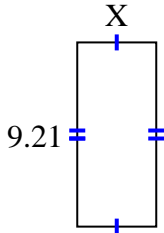
5) area =  $23.598 \text{ cm}^2$



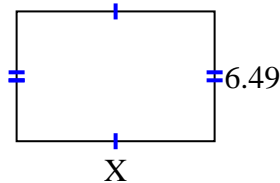
6) area =  $14.3 \text{ cm}^2$



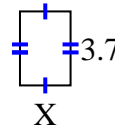
7) area =  $36.3795 \text{ cm}^2$



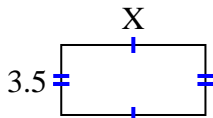
8) area =  $64.251 \text{ cm}^2$



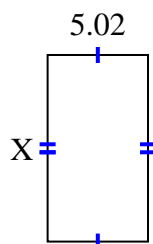
9) area =  $9.361 \text{ cm}^2$



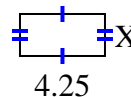
10) area =  $25.235 \text{ cm}^2$



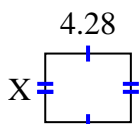
11) area =  $46.8366 \text{ cm}^2$



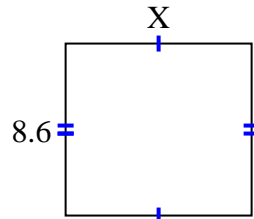
12) area =  $8.925 \text{ cm}^2$



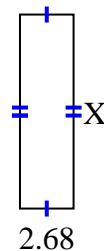
13) area =  $14.6804 \text{ cm}^2$



14) area =  $79.98 \text{ cm}^2$



15) area =  $25.996 \text{ cm}^2$

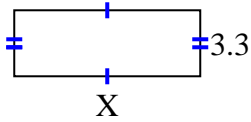
**Respuestas**1. **8.25**2. **8.05**3. **6.04**4. **5.8**5. **5.13**6. **2.2**7. **3.95**8. **9.9**9. **2.53**10. **7.21**11. **9.33**12. **2.1**13. **3.43**14. **9.3**15. **9.7**



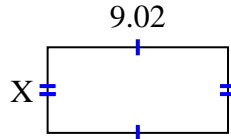


**Encuentra el valor de X para cada figura. Cada figura está en centímetros (cm). No a escala.**

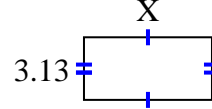
1) area =  $30.69 \text{ cm}^2$



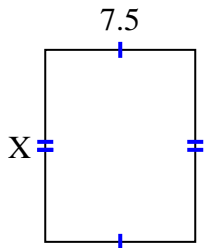
2) area =  $38.6056 \text{ cm}^2$



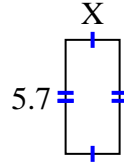
3) area =  $20.032 \text{ cm}^2$



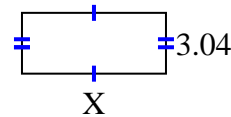
4) area =  $72 \text{ cm}^2$



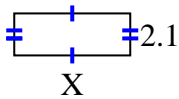
5) area =  $15.39 \text{ cm}^2$



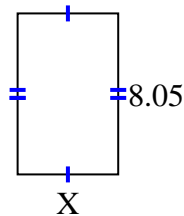
6) area =  $21.888 \text{ cm}^2$



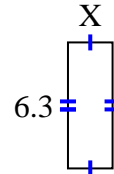
7) area =  $12.18 \text{ cm}^2$



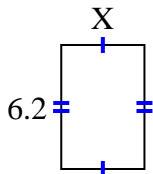
8) area =  $40.4915 \text{ cm}^2$



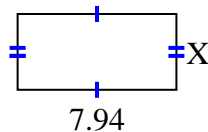
9) area =  $14.049 \text{ cm}^2$



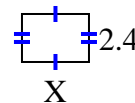
10) area =  $25.792 \text{ cm}^2$



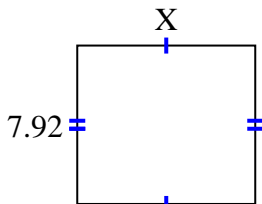
11) area =  $30.0926 \text{ cm}^2$



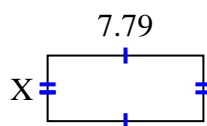
12) area =  $8.04 \text{ cm}^2$



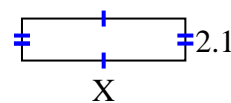
13) area =  $70.488 \text{ cm}^2$



14) area =  $25.5512 \text{ cm}^2$



15) area =  $17.157 \text{ cm}^2$



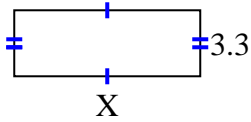
**Respuestas**

1. \_\_\_\_\_
2. \_\_\_\_\_
3. \_\_\_\_\_
4. \_\_\_\_\_
5. \_\_\_\_\_
6. \_\_\_\_\_
7. \_\_\_\_\_
8. \_\_\_\_\_
9. \_\_\_\_\_
10. \_\_\_\_\_
11. \_\_\_\_\_
12. \_\_\_\_\_
13. \_\_\_\_\_
14. \_\_\_\_\_
15. \_\_\_\_\_

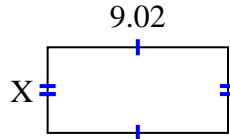


Encuentra el valor de X para cada figura. Cada figura está en centímetros (cm). No a escala.

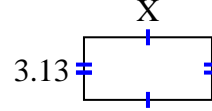
1) area =  $30.69 \text{ cm}^2$



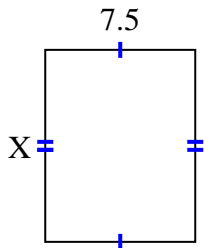
2) area =  $38.6056 \text{ cm}^2$



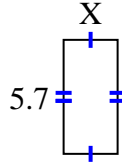
3) area =  $20.032 \text{ cm}^2$



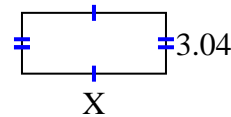
4) area =  $72 \text{ cm}^2$



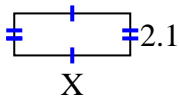
5) area =  $15.39 \text{ cm}^2$



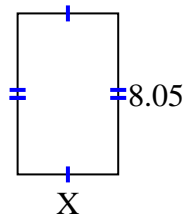
6) area =  $21.888 \text{ cm}^2$



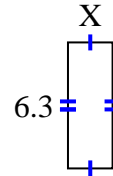
7) area =  $12.18 \text{ cm}^2$



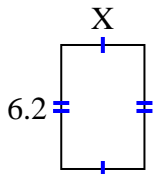
8) area =  $40.4915 \text{ cm}^2$



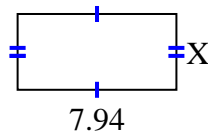
9) area =  $14.049 \text{ cm}^2$



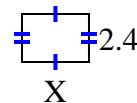
10) area =  $25.792 \text{ cm}^2$



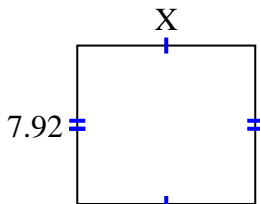
11) area =  $30.0926 \text{ cm}^2$



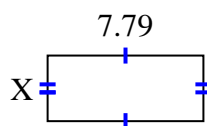
12) area =  $8.04 \text{ cm}^2$



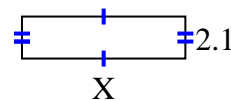
13) area =  $70.488 \text{ cm}^2$



14) area =  $25.5512 \text{ cm}^2$



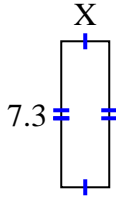
15) area =  $17.157 \text{ cm}^2$

**Respuestas**1. 9.32. 4.283. 6.44. 9.65. 2.76. 7.27. 5.88. 5.039. 2.2310. 4.1611. 3.7912. 3.3513. 8.914. 3.2815. 8.17

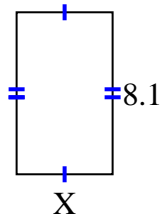


**Encuentra el valor de X para cada figura. Cada figura está en centímetros (cm). No a escala.**

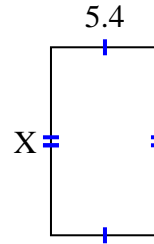
1) area =  $17.52 \text{ cm}^2$



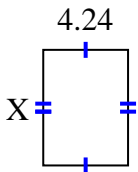
2) area =  $38.88 \text{ cm}^2$



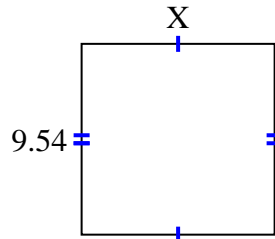
3) area =  $50.76 \text{ cm}^2$



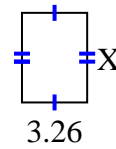
4) area =  $24.5072 \text{ cm}^2$



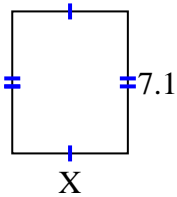
5) area =  $92.061 \text{ cm}^2$



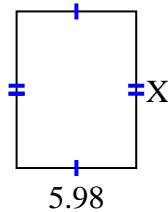
6) area =  $14.6048 \text{ cm}^2$



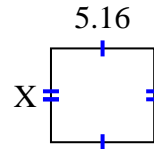
7) area =  $41.038 \text{ cm}^2$



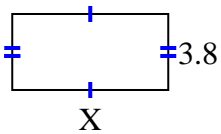
8) area =  $46.8234 \text{ cm}^2$



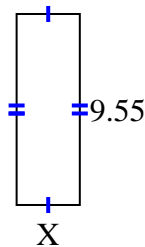
9) area =  $24.2004 \text{ cm}^2$



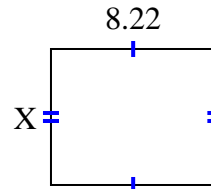
10) area =  $29.64 \text{ cm}^2$



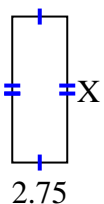
11) area =  $30.178 \text{ cm}^2$



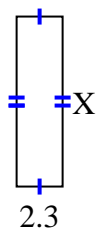
12) area =  $55.896 \text{ cm}^2$



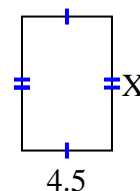
13) area =  $20.075 \text{ cm}^2$



14) area =  $19.55 \text{ cm}^2$



15) area =  $30.15 \text{ cm}^2$



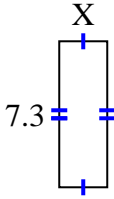
**Respuestas**

1. \_\_\_\_\_
2. \_\_\_\_\_
3. \_\_\_\_\_
4. \_\_\_\_\_
5. \_\_\_\_\_
6. \_\_\_\_\_
7. \_\_\_\_\_
8. \_\_\_\_\_
9. \_\_\_\_\_
10. \_\_\_\_\_
11. \_\_\_\_\_
12. \_\_\_\_\_
13. \_\_\_\_\_
14. \_\_\_\_\_
15. \_\_\_\_\_

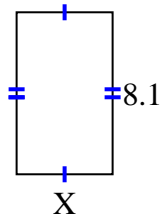


Encuentra el valor de X para cada figura. Cada figura está en centímetros (cm). No a escala.

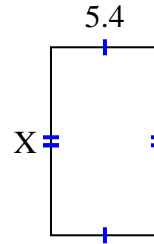
1) area =  $17.52 \text{ cm}^2$



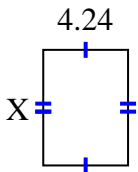
2) area =  $38.88 \text{ cm}^2$



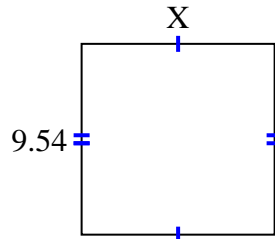
3) area =  $50.76 \text{ cm}^2$



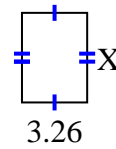
4) area =  $24.5072 \text{ cm}^2$



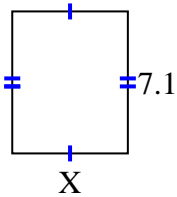
5) area =  $92.061 \text{ cm}^2$



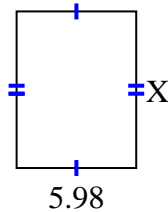
6) area =  $14.6048 \text{ cm}^2$



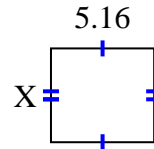
7) area =  $41.038 \text{ cm}^2$



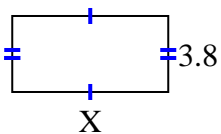
8) area =  $46.8234 \text{ cm}^2$



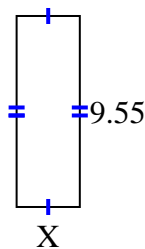
9) area =  $24.2004 \text{ cm}^2$



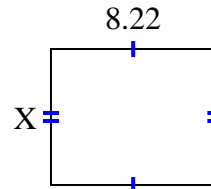
10) area =  $29.64 \text{ cm}^2$



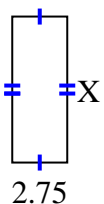
11) area =  $30.178 \text{ cm}^2$



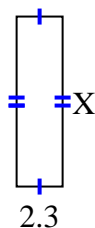
12) area =  $55.896 \text{ cm}^2$



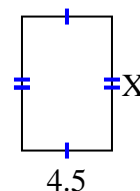
13) area =  $20.075 \text{ cm}^2$



14) area =  $19.55 \text{ cm}^2$



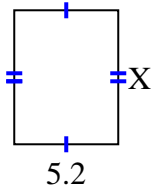
15) area =  $30.15 \text{ cm}^2$

**Respuestas**1. 2.42. 4.83. 9.44. 5.785. 9.656. 4.487. 5.788. 7.839. 4.6910. 7.811. 3.1612. 6.813. 7.314. 8.515. 6.7

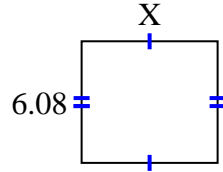


**Encuentra el valor de X para cada figura. Cada figura está en centímetros (cm). No a escala.**

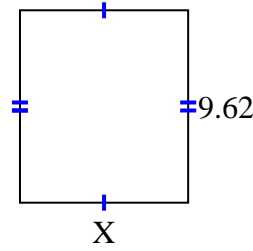
1) area =  $34.84 \text{ cm}^2$



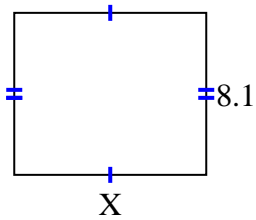
2) area =  $41.344 \text{ cm}^2$



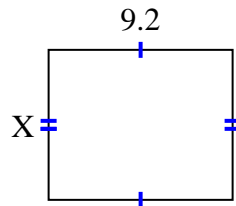
3) area =  $80.9042 \text{ cm}^2$



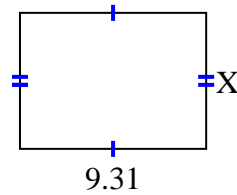
4) area =  $77.76 \text{ cm}^2$



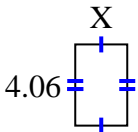
5) area =  $69 \text{ cm}^2$



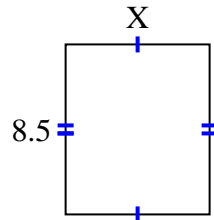
6) area =  $63.308 \text{ cm}^2$



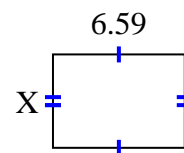
7) area =  $10.556 \text{ cm}^2$



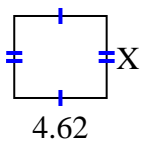
8) area =  $61.2 \text{ cm}^2$



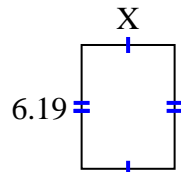
9) area =  $30.7753 \text{ cm}^2$



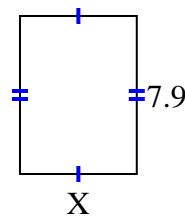
10) area =  $18.942 \text{ cm}^2$



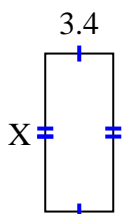
11) area =  $28.7835 \text{ cm}^2$



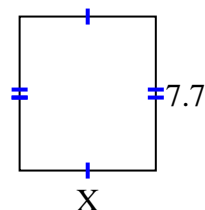
12) area =  $46.136 \text{ cm}^2$



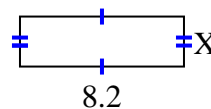
13) area =  $26.86 \text{ cm}^2$



14) area =  $52.437 \text{ cm}^2$



15) area =  $20.5 \text{ cm}^2$



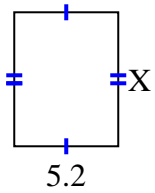
**Respuestas**

1. \_\_\_\_\_
2. \_\_\_\_\_
3. \_\_\_\_\_
4. \_\_\_\_\_
5. \_\_\_\_\_
6. \_\_\_\_\_
7. \_\_\_\_\_
8. \_\_\_\_\_
9. \_\_\_\_\_
10. \_\_\_\_\_
11. \_\_\_\_\_
12. \_\_\_\_\_
13. \_\_\_\_\_
14. \_\_\_\_\_
15. \_\_\_\_\_

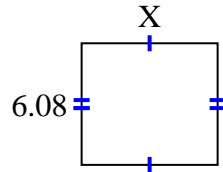


Encuentra el valor de X para cada figura. Cada figura está en centímetros (cm). No a escala.

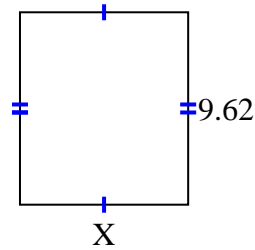
1) area =  $34.84 \text{ cm}^2$



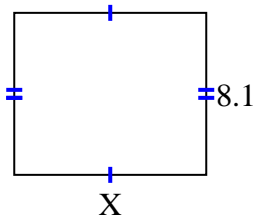
2) area =  $41.344 \text{ cm}^2$



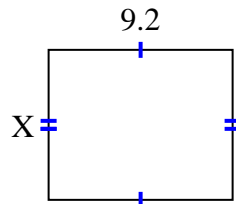
3) area =  $80.9042 \text{ cm}^2$



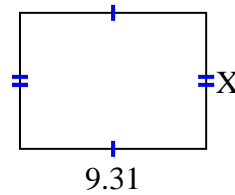
4) area =  $77.76 \text{ cm}^2$



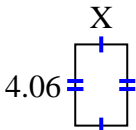
5) area =  $69 \text{ cm}^2$



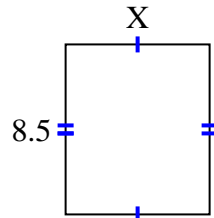
6) area =  $63.308 \text{ cm}^2$



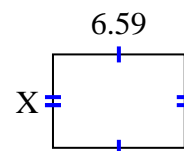
7) area =  $10.556 \text{ cm}^2$



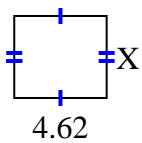
8) area =  $61.2 \text{ cm}^2$



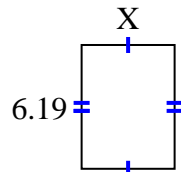
9) area =  $30.7753 \text{ cm}^2$



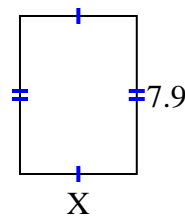
10) area =  $18.942 \text{ cm}^2$



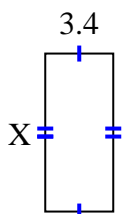
11) area =  $28.7835 \text{ cm}^2$



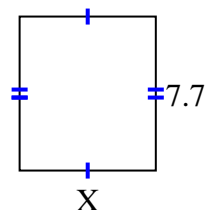
12) area =  $46.136 \text{ cm}^2$



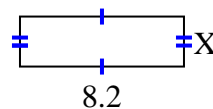
13) area =  $26.86 \text{ cm}^2$



14) area =  $52.437 \text{ cm}^2$



15) area =  $20.5 \text{ cm}^2$



**Respuestas**

1. 6.7

2. 6.8

3. 8.41

4. 9.6

5. 7.5

6. 6.8

7. 2.6

8. 7.2

9. 4.67

10. 4.1

11. 4.65

12. 5.84

13. 7.9

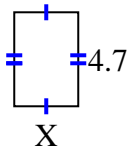
14. 6.81

15. 2.5

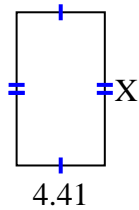


**Encuentra el valor de X para cada figura. Cada figura está en centímetros (cm). No a escala.**

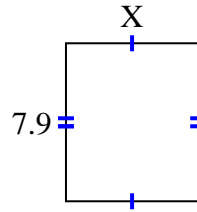
1) area =  $15.04 \text{ cm}^2$



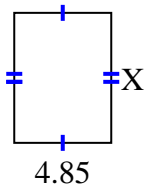
2) area =  $33.7806 \text{ cm}^2$



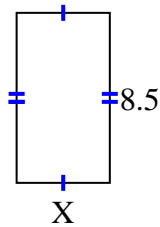
3) area =  $52.219 \text{ cm}^2$



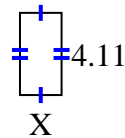
4) area =  $31.525 \text{ cm}^2$



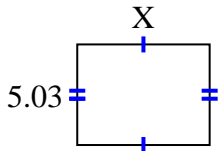
5) area =  $39.61 \text{ cm}^2$



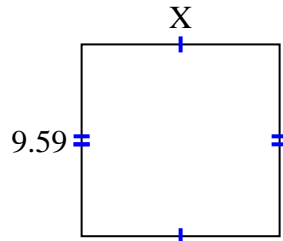
6) area =  $8.5488 \text{ cm}^2$



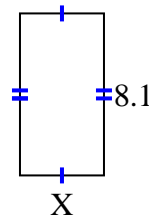
7) area =  $33.2986 \text{ cm}^2$



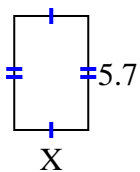
8) area =  $94.941 \text{ cm}^2$



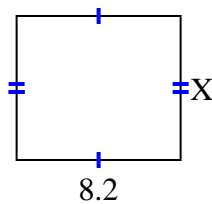
9) area =  $34.02 \text{ cm}^2$



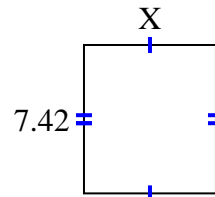
10) area =  $21.09 \text{ cm}^2$



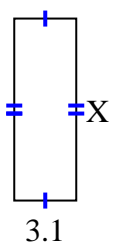
11) area =  $59.04 \text{ cm}^2$



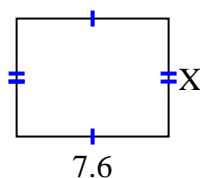
12) area =  $48.972 \text{ cm}^2$



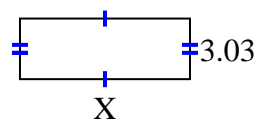
13) area =  $28.21 \text{ cm}^2$



14) area =  $44.84 \text{ cm}^2$



15) area =  $25.755 \text{ cm}^2$



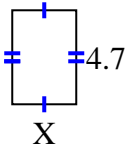
**Respuestas**

1. \_\_\_\_\_
2. \_\_\_\_\_
3. \_\_\_\_\_
4. \_\_\_\_\_
5. \_\_\_\_\_
6. \_\_\_\_\_
7. \_\_\_\_\_
8. \_\_\_\_\_
9. \_\_\_\_\_
10. \_\_\_\_\_
11. \_\_\_\_\_
12. \_\_\_\_\_
13. \_\_\_\_\_
14. \_\_\_\_\_
15. \_\_\_\_\_

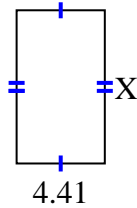


Encuentra el valor de X para cada figura. Cada figura está en centímetros (cm). No a escala.

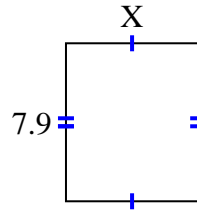
1) area =  $15.04 \text{ cm}^2$



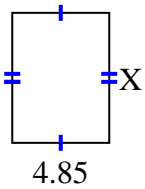
2) area =  $33.7806 \text{ cm}^2$



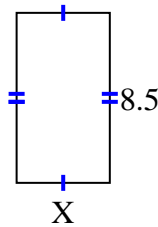
3) area =  $52.219 \text{ cm}^2$



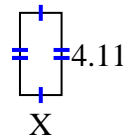
4) area =  $31.525 \text{ cm}^2$



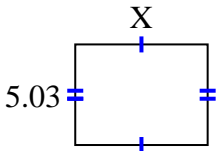
5) area =  $39.61 \text{ cm}^2$



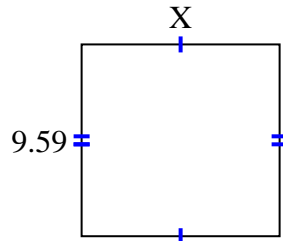
6) area =  $8.5488 \text{ cm}^2$



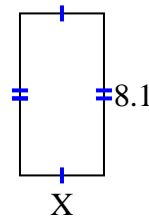
7) area =  $33.2986 \text{ cm}^2$



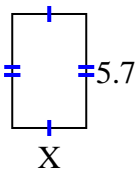
8) area =  $94.941 \text{ cm}^2$



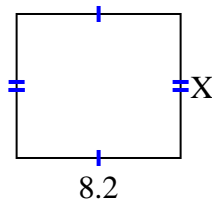
9) area =  $34.02 \text{ cm}^2$



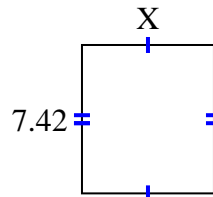
10) area =  $21.09 \text{ cm}^2$



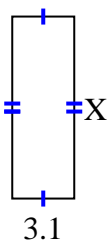
11) area =  $59.04 \text{ cm}^2$



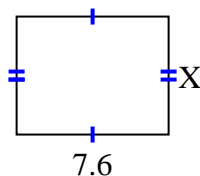
12) area =  $48.972 \text{ cm}^2$



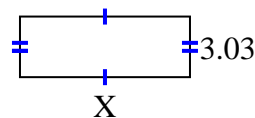
13) area =  $28.21 \text{ cm}^2$



14) area =  $44.84 \text{ cm}^2$



15) area =  $25.755 \text{ cm}^2$



## Respuestas

1. 3.2

2. 7.66

3. 6.61

4. 6.5

5. 4.66

6. 2.08

7. 6.62

8. 9.9

9. 4.2

10. 3.7

11. 7.2

12. 6.6

13. 9.1

14. 5.9

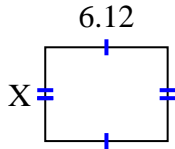
15. 8.5



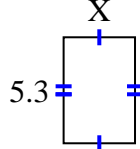


**Encuentra el valor de X para cada figura. Cada figura está en centímetros (cm). No a escala.**

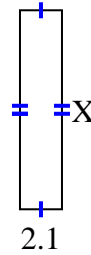
1) area =  $28.7028 \text{ cm}^2$



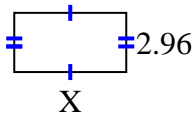
2) area =  $18.921 \text{ cm}^2$



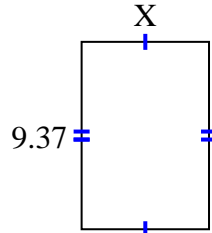
3) area =  $20.895 \text{ cm}^2$



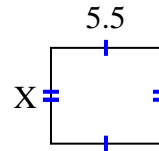
4) area =  $16.576 \text{ cm}^2$



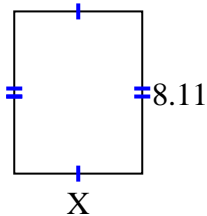
5) area =  $59.6869 \text{ cm}^2$



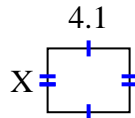
6) area =  $26.345 \text{ cm}^2$



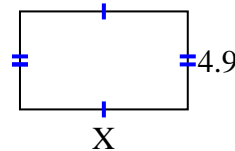
7) area =  $51.904 \text{ cm}^2$



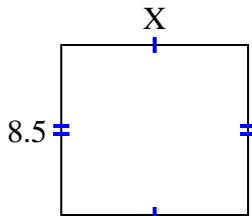
8) area =  $13.079 \text{ cm}^2$



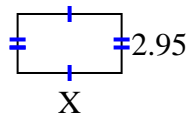
9) area =  $41.111 \text{ cm}^2$



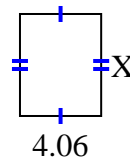
10) area =  $79.39 \text{ cm}^2$



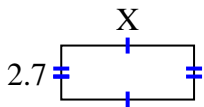
11) area =  $15.34 \text{ cm}^2$



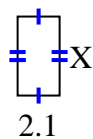
12) area =  $20.706 \text{ cm}^2$



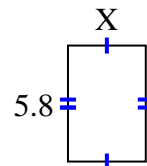
13) area =  $17.928 \text{ cm}^2$



14) area =  $8.295 \text{ cm}^2$



15) area =  $22.562 \text{ cm}^2$



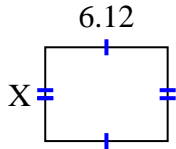
**Respuestas**

1. \_\_\_\_\_
2. \_\_\_\_\_
3. \_\_\_\_\_
4. \_\_\_\_\_
5. \_\_\_\_\_
6. \_\_\_\_\_
7. \_\_\_\_\_
8. \_\_\_\_\_
9. \_\_\_\_\_
10. \_\_\_\_\_
11. \_\_\_\_\_
12. \_\_\_\_\_
13. \_\_\_\_\_
14. \_\_\_\_\_
15. \_\_\_\_\_

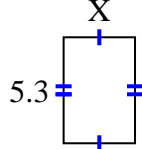


Encuentra el valor de X para cada figura. Cada figura está en centímetros (cm). No a escala.

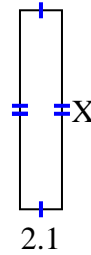
1) area =  $28.7028 \text{ cm}^2$



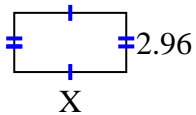
2) area =  $18.921 \text{ cm}^2$



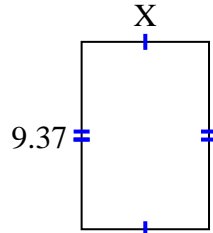
3) area =  $20.895 \text{ cm}^2$



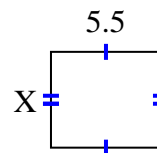
4) area =  $16.576 \text{ cm}^2$



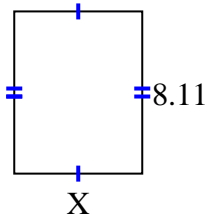
5) area =  $59.6869 \text{ cm}^2$



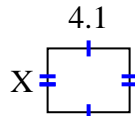
6) area =  $26.345 \text{ cm}^2$



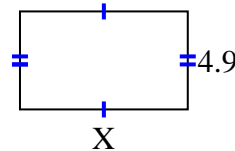
7) area =  $51.904 \text{ cm}^2$



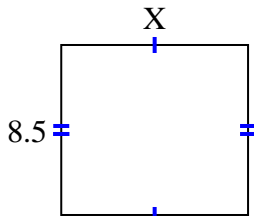
8) area =  $13.079 \text{ cm}^2$



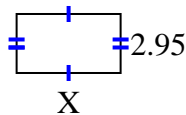
9) area =  $41.111 \text{ cm}^2$



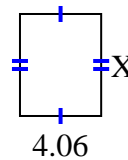
10) area =  $79.39 \text{ cm}^2$



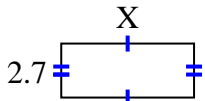
11) area =  $15.34 \text{ cm}^2$



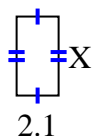
12) area =  $20.706 \text{ cm}^2$



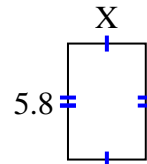
13) area =  $17.928 \text{ cm}^2$



14) area =  $8.295 \text{ cm}^2$



15) area =  $22.562 \text{ cm}^2$



**Respuestas**

1. 4.69

2. 3.57

3. 9.95

4. 5.6

5. 6.37

6. 4.79

7. 6.4

8. 3.19

9. 8.39

10. 9.34

11. 5.2

12. 5.1

13. 6.64

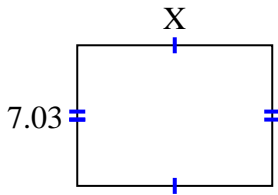
14. 3.95

15. 3.89

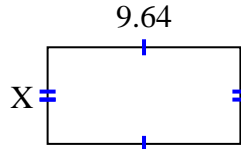


**Encuentra el valor de X para cada figura. Cada figura está en centímetros (cm). No a escala.**

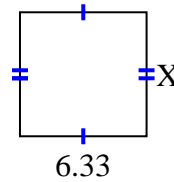
1) area =  $68.5425 \text{ cm}^2$



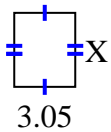
2) area =  $46.5612 \text{ cm}^2$




3) area =  $39.246 \text{ cm}^2$



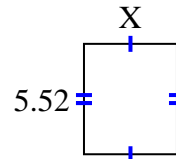
4) area =  $11.285 \text{ cm}^2$



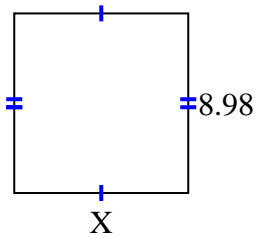
5) area =  $23.8425 \text{ cm}^2$



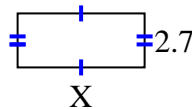
6) area =  $25.668 \text{ cm}^2$



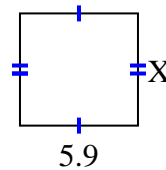
7) area =  $78.126 \text{ cm}^2$



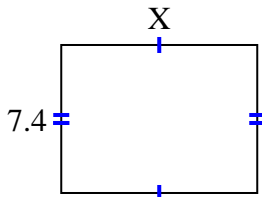
8) area =  $17.145 \text{ cm}^2$



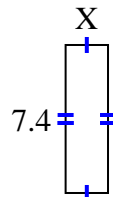
9) area =  $33.099 \text{ cm}^2$



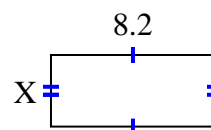
10) area =  $72.52 \text{ cm}^2$



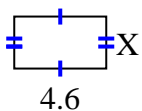
11) area =  $15.688 \text{ cm}^2$



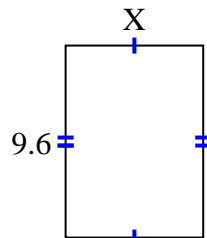
12) area =  $29.356 \text{ cm}^2$



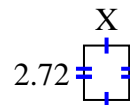
13) area =  $11.96 \text{ cm}^2$



14) area =  $66.048 \text{ cm}^2$



15) area =  $6.1472 \text{ cm}^2$



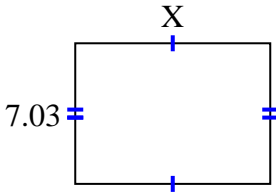
**Respuestas**

1. \_\_\_\_\_
2. \_\_\_\_\_
3. \_\_\_\_\_
4. \_\_\_\_\_
5. \_\_\_\_\_
6. \_\_\_\_\_
7. \_\_\_\_\_
8. \_\_\_\_\_
9. \_\_\_\_\_
10. \_\_\_\_\_
11. \_\_\_\_\_
12. \_\_\_\_\_
13. \_\_\_\_\_
14. \_\_\_\_\_
15. \_\_\_\_\_

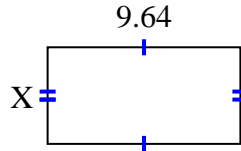


Encuentra el valor de X para cada figura. Cada figura está en centímetros (cm). No a escala.

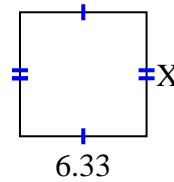
1) area =  $68.5425 \text{ cm}^2$



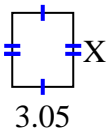
2) area =  $46.5612 \text{ cm}^2$




3) area =  $39.246 \text{ cm}^2$



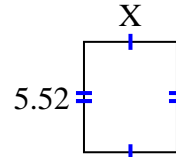
4) area =  $11.285 \text{ cm}^2$



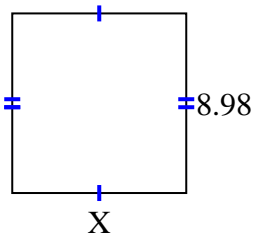
5) area =  $23.8425 \text{ cm}^2$



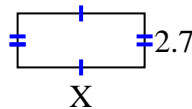
6) area =  $25.668 \text{ cm}^2$



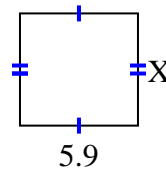
7) area =  $78.126 \text{ cm}^2$



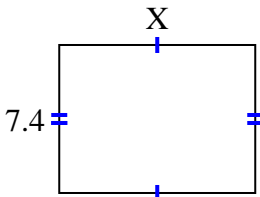
8) area =  $17.145 \text{ cm}^2$



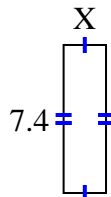
9) area =  $33.099 \text{ cm}^2$



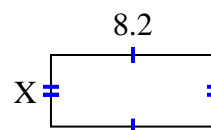
10) area =  $72.52 \text{ cm}^2$



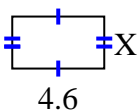
11) area =  $15.688 \text{ cm}^2$



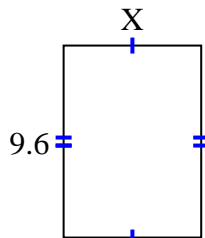
12) area =  $29.356 \text{ cm}^2$



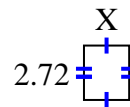
13) area =  $11.96 \text{ cm}^2$



14) area =  $66.048 \text{ cm}^2$



15) area =  $6.1472 \text{ cm}^2$

**Respuestas**1. 9.752. 4.833. 6.24. 3.75. 2.756. 4.657. 8.78. 6.359. 5.6110. 9.811. 2.1212. 3.5813. 2.614. 6.8815. 2.26