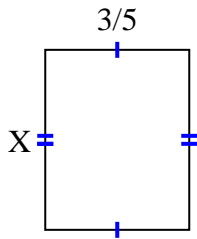
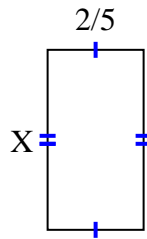


**Encuentra el valor de X de cada figura. Cada figura está en centímetros (cm). No a escala.****Respuestas**

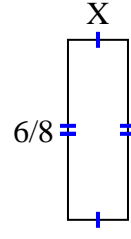
1) $\text{area} = \frac{18}{40} \text{ cm}^2$



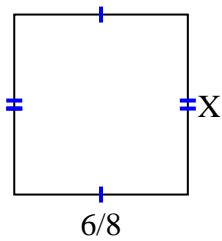
2) $\text{area} = \frac{6}{20} \text{ cm}^2$



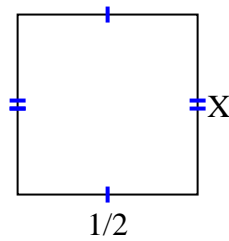
3) $\text{area} = \frac{6}{32} \text{ cm}^2$



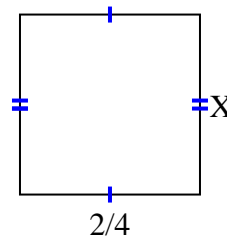
4) $\text{area} = \frac{42}{72} \text{ cm}^2$



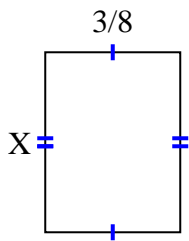
5) $\text{area} = \frac{5}{20} \text{ cm}^2$



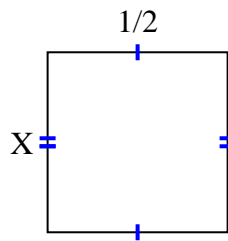
6) $\text{area} = \frac{6}{24} \text{ cm}^2$



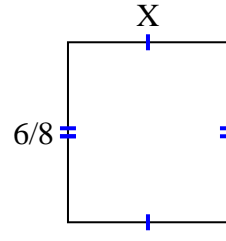
7) $\text{area} = \frac{3}{16} \text{ cm}^2$



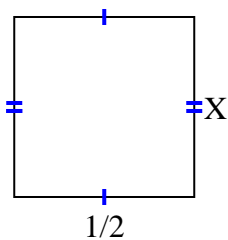
8) $\text{area} = \frac{2}{8} \text{ cm}^2$



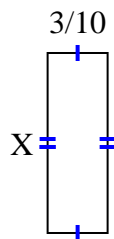
9) $\text{area} = \frac{12}{24} \text{ cm}^2$



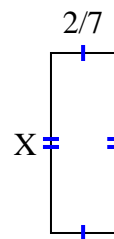
10) $\text{area} = \frac{1}{4} \text{ cm}^2$



11) $\text{area} = \frac{27}{100} \text{ cm}^2$



12) $\text{area} = \frac{16}{70} \text{ cm}^2$



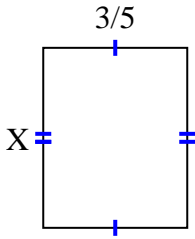
1. _____
2. _____
3. _____
4. _____
5. _____
6. _____
7. _____
8. _____
9. _____
10. _____
11. _____
12. _____



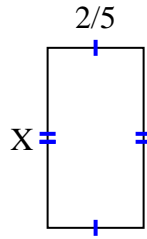
Encuentra el valor de X de cada figura. Cada figura está en centímetros (cm). No a escala.

Respuestas

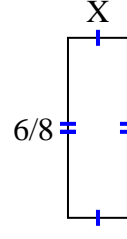
1) $\text{area} = \frac{18}{40} \text{ cm}^2$



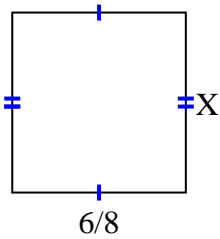
2) $\text{area} = \frac{6}{20} \text{ cm}^2$



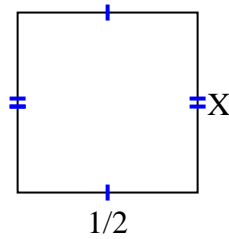
3) $\text{area} = \frac{6}{32} \text{ cm}^2$



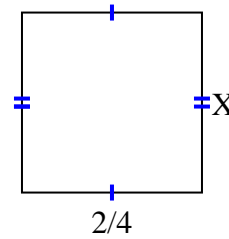
4) $\text{area} = \frac{42}{72} \text{ cm}^2$



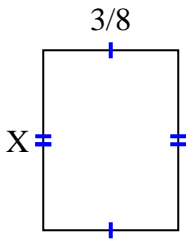
5) $\text{area} = \frac{5}{20} \text{ cm}^2$



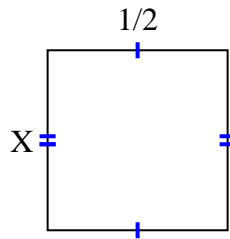
6) $\text{area} = \frac{6}{24} \text{ cm}^2$



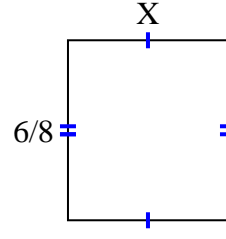
7) $\text{area} = \frac{3}{16} \text{ cm}^2$



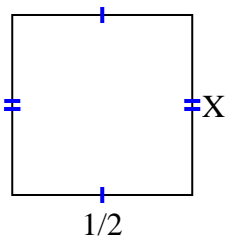
8) $\text{area} = \frac{2}{8} \text{ cm}^2$



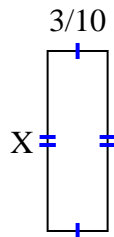
9) $\text{area} = \frac{12}{24} \text{ cm}^2$



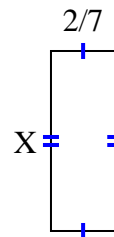
10) $\text{area} = \frac{1}{4} \text{ cm}^2$



11) $\text{area} = \frac{27}{100} \text{ cm}^2$



12) $\text{area} = \frac{16}{70} \text{ cm}^2$



1. $\frac{6}{8}$

2. $\frac{3}{4}$

3. $\frac{1}{4}$

4. $\frac{7}{9}$

5. $\frac{5}{10}$

6. $\frac{3}{6}$

7. $\frac{1}{2}$

8. $\frac{2}{4}$

9. $\frac{2}{3}$

10. $\frac{1}{2}$

11. $\frac{9}{10}$

12. $\frac{8}{10}$