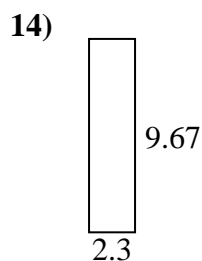
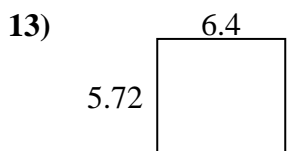
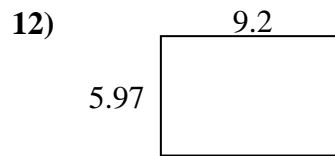
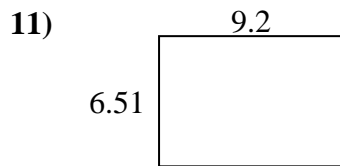
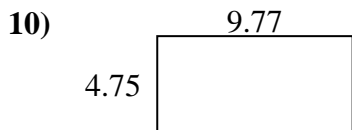
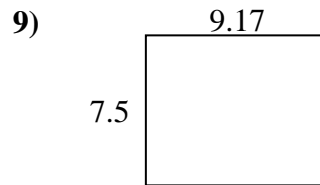
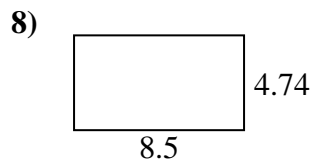
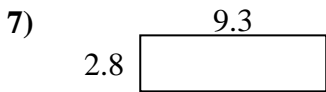
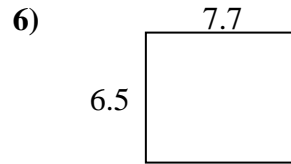

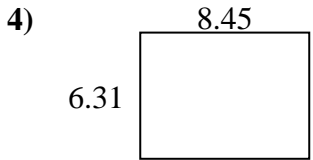
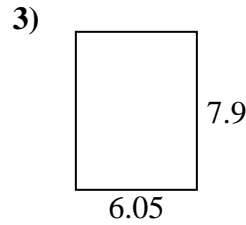
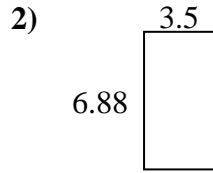
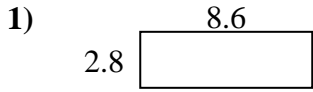




Encuentra el perímetro y el área de cada figura. Responde con la décima más cercana.

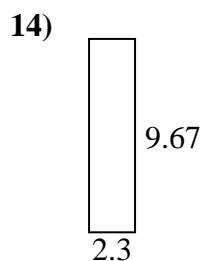
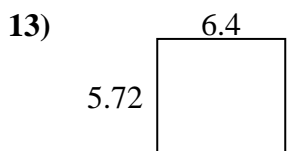
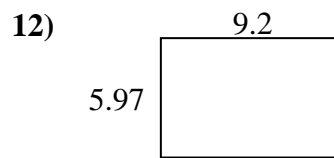
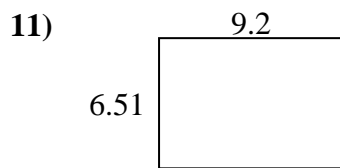
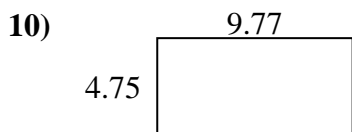
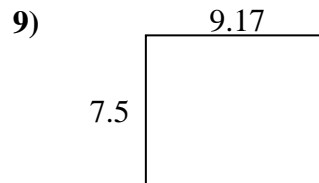
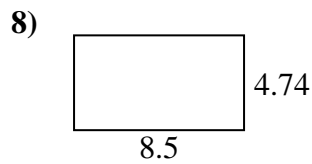
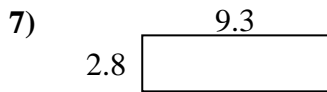
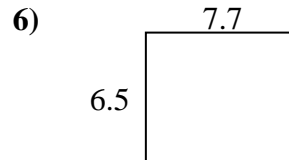

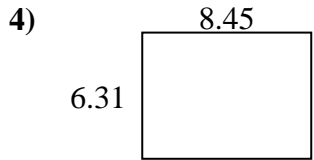
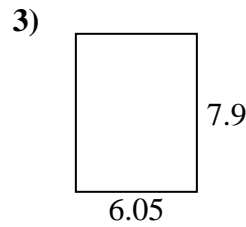
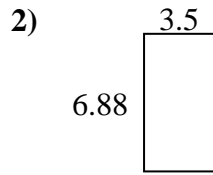
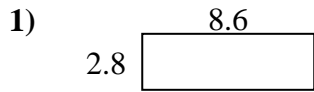
**Respuestas**



1. \_\_\_\_\_
2. \_\_\_\_\_
3. \_\_\_\_\_
4. \_\_\_\_\_
5. \_\_\_\_\_
6. \_\_\_\_\_
7. \_\_\_\_\_
8. \_\_\_\_\_
9. \_\_\_\_\_
10. \_\_\_\_\_
11. \_\_\_\_\_
12. \_\_\_\_\_
13. \_\_\_\_\_
14. \_\_\_\_\_
15. \_\_\_\_\_



Encuentra el perímetro y el área de cada figura. Responde con la décima más cercana.

**Respuestas**1. 24.1 22.82. 24.1 20.83. 47.8 27.94. 53.3 29.55. 18.0 19.86. 50.1 28.47. 26.0 24.28. 40.3 26.59. 68.8 33.310. 46.4 29.011. 59.9 31.412. 54.9 30.313. 36.6 24.214. 22.2 23.915. 13.8 15.8