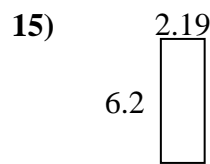
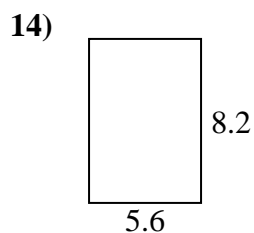
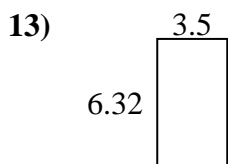
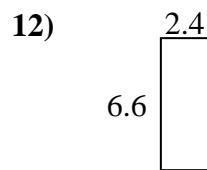
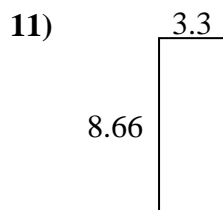
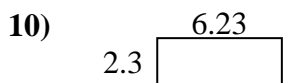
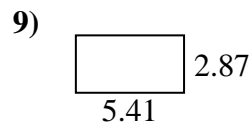
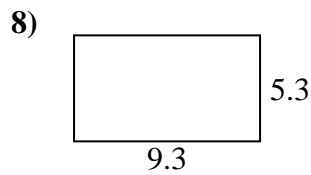
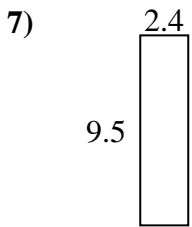
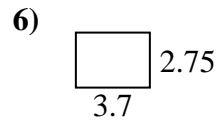
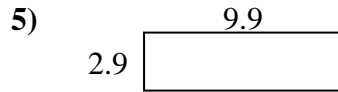
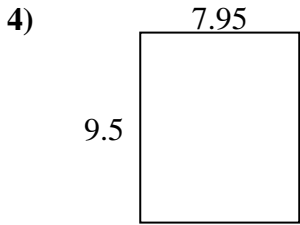
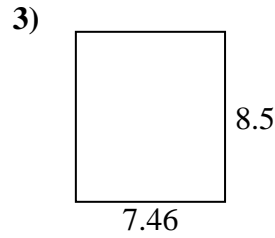
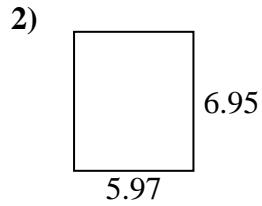
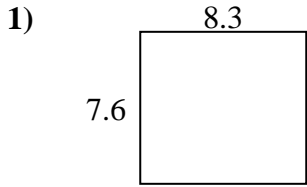




Encuentra el perímetro y el área de cada figura. Responde con la décima más cercana.

Respuestas

1. _____

2. _____

3. _____

4. _____

5. _____

6. _____

7. _____

8. _____

9. _____

10. _____

11. _____

12. _____

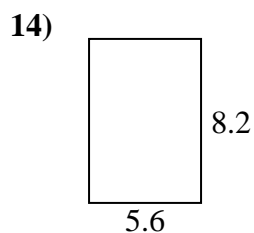
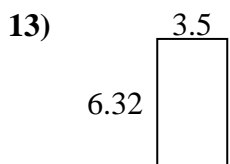
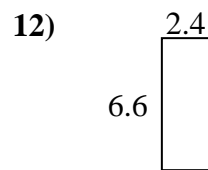
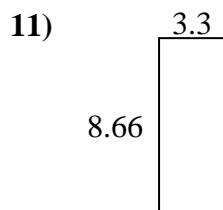
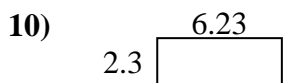
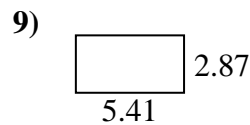
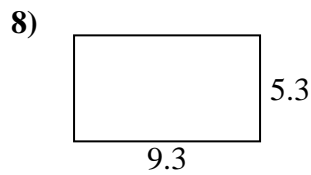
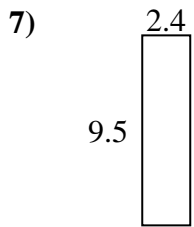
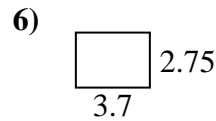
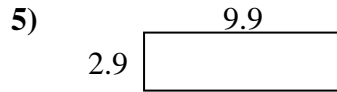
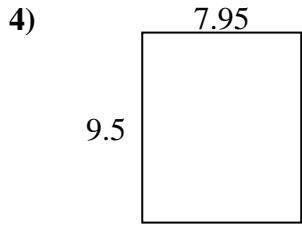
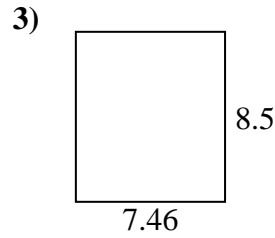
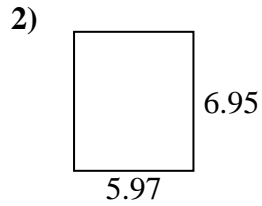
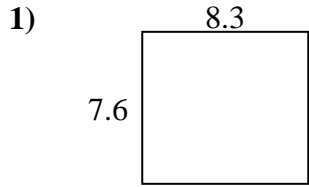
13. _____

14. _____

15. _____



Encuentra el perímetro y el área de cada figura. Responde con la décima más cercana.

Respuestas

1.	<u>63.1</u>	<u>31.8</u>
2.	<u>41.5</u>	<u>25.8</u>
3.	<u>63.4</u>	<u>31.9</u>
4.	<u>75.5</u>	<u>34.9</u>
5.	<u>28.7</u>	<u>25.6</u>
6.	<u>10.2</u>	<u>12.9</u>
7.	<u>22.8</u>	<u>23.8</u>
8.	<u>49.3</u>	<u>29.2</u>
9.	<u>15.5</u>	<u>16.6</u>
10.	<u>14.3</u>	<u>17.1</u>
11.	<u>28.6</u>	<u>23.9</u>
12.	<u>15.8</u>	<u>18.0</u>
13.	<u>22.1</u>	<u>19.6</u>
14.	<u>45.9</u>	<u>27.6</u>
15.	<u>13.6</u>	<u>16.8</u>