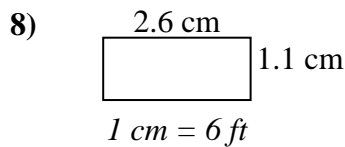
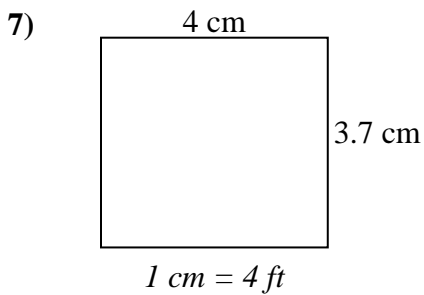
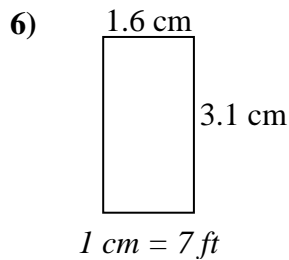
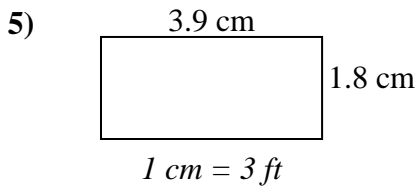
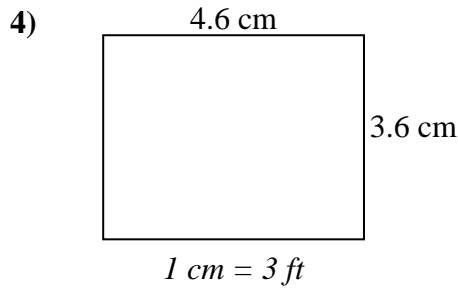
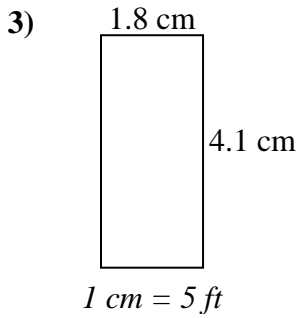
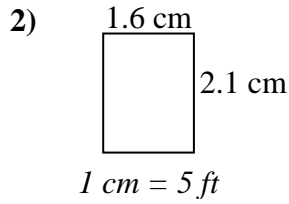
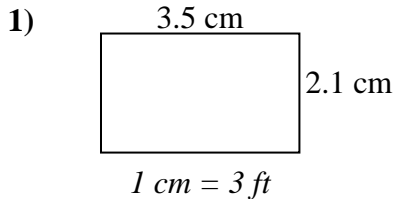




Determine el ancho, la altura y el área reales de cada rectángulo.

Redondea el área al número entero más cercano



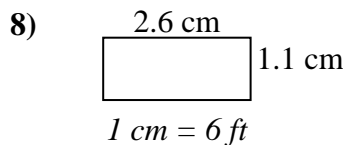
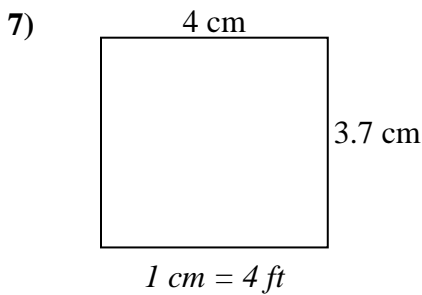
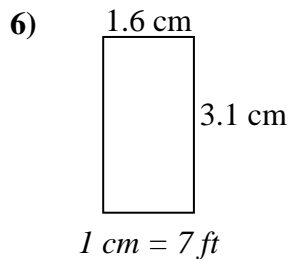
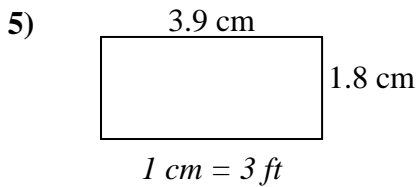
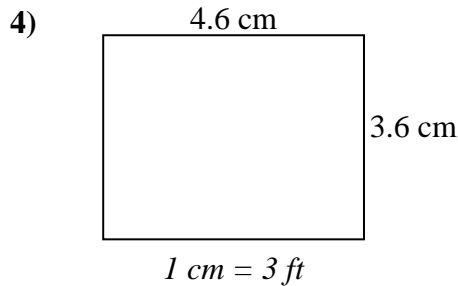
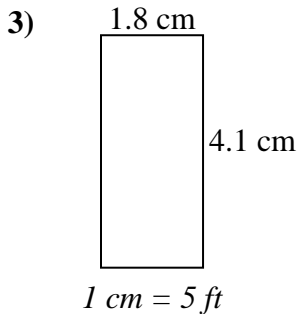
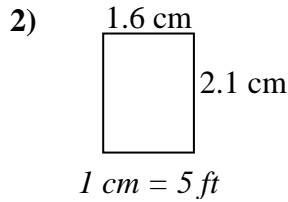
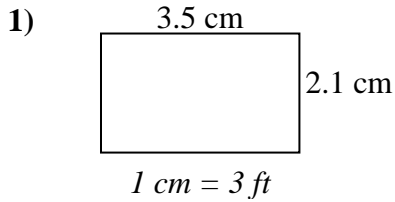
Respuestas

1. _____
2. _____
3. _____
4. _____
5. _____
6. _____
7. _____
8. _____



Determine el ancho, la altura y el área reales de cada rectángulo.

Redondea el área al número entero más cercano



Respuestas

- | | | | |
|----|-------------|-------------|------------|
| 1. | <u>10.5</u> | <u>6.3</u> | <u>66</u> |
| 2. | <u>8</u> | <u>10.5</u> | <u>84</u> |
| 3. | <u>9</u> | <u>20.5</u> | <u>185</u> |
| 4. | <u>13.8</u> | <u>10.8</u> | <u>149</u> |
| 5. | <u>11.7</u> | <u>5.4</u> | <u>63</u> |
| 6. | <u>11.2</u> | <u>21.7</u> | <u>243</u> |
| 7. | <u>16</u> | <u>14.8</u> | <u>237</u> |
| 8. | <u>15.6</u> | <u>6.6</u> | <u>103</u> |