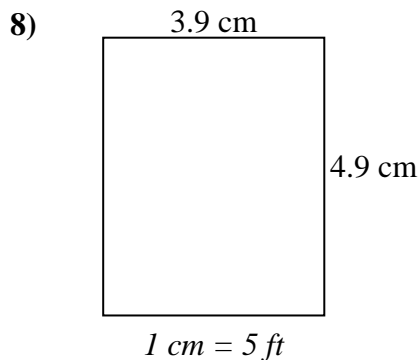
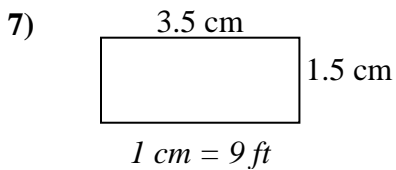
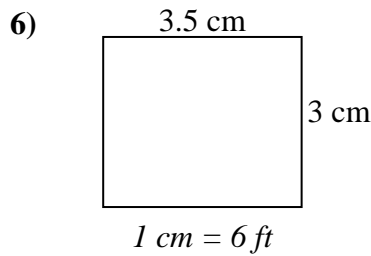
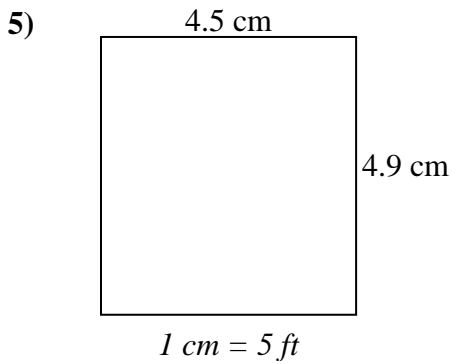
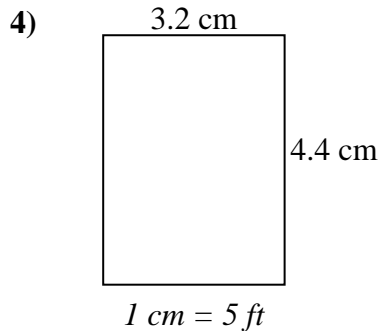
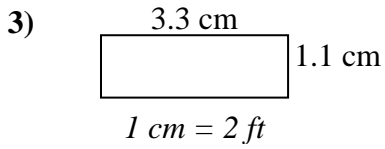
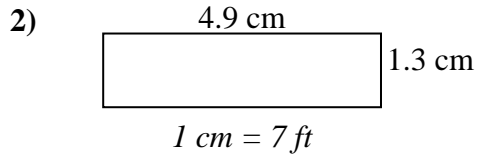
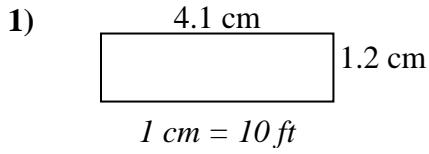




Encuentre el ancho, la altura y el área de los rectángulos. Nombre: \_\_\_\_\_

Determine el ancho, la altura y el área reales de cada rectángulo.

Redondea el área al número entero más cercano



## Respuestas

1. \_\_\_\_\_

2. \_\_\_\_\_

3. \_\_\_\_\_

4. \_\_\_\_\_

5. \_\_\_\_\_

6. \_\_\_\_\_

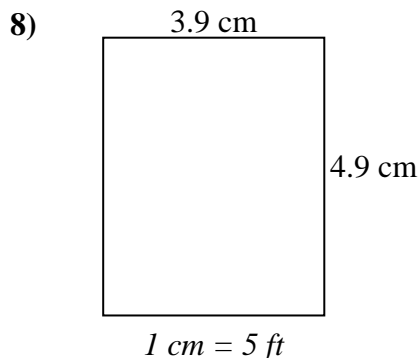
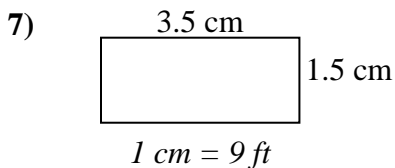
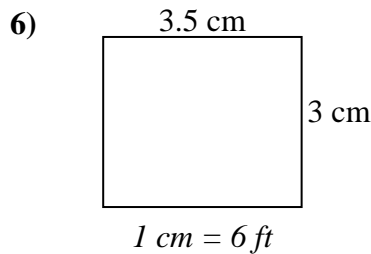
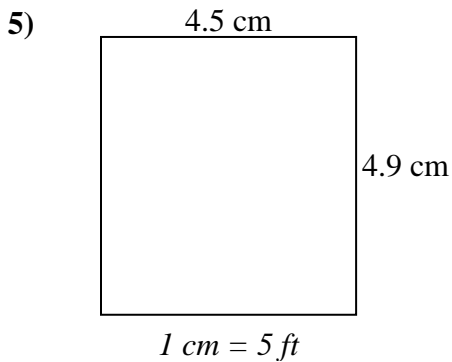
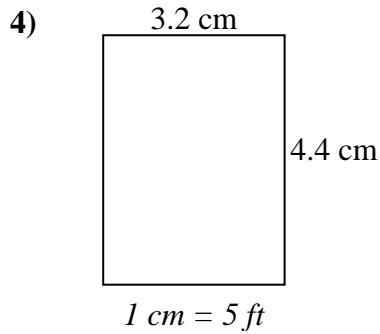
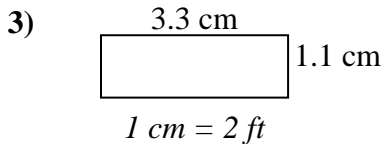
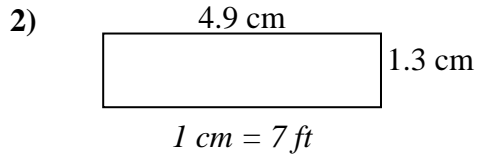
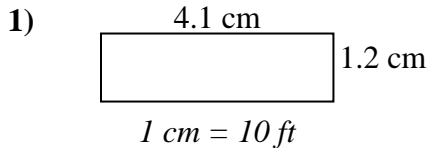
7. \_\_\_\_\_

8. \_\_\_\_\_



Determine el ancho, la altura y el área reales de cada rectángulo.

Redondea el área al número entero más cercano



### Respuestas

1.	<u>41</u>	<u>12</u>	<u>492</u>
2.	<u>34.3</u>	<u>9.1</u>	<u>312</u>
3.	<u>6.6</u>	<u>2.2</u>	<u>15</u>
4.	<u>16</u>	<u>22</u>	<u>352</u>
5.	<u>22.5</u>	<u>24.5</u>	<u>551</u>
6.	<u>21</u>	<u>18</u>	<u>378</u>
7.	<u>31.5</u>	<u>13.5</u>	<u>425</u>
8.	<u>19.5</u>	<u>24.5</u>	<u>478</u>