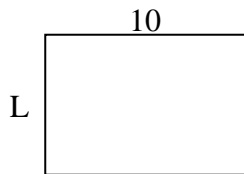


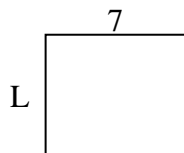


Determina el valor de 'P'.

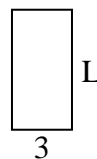
1) Área =  $70u^2$



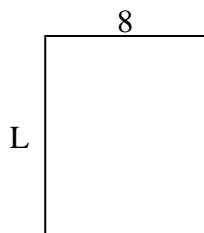
2) Área =  $42u^2$



3) Área =  $18u^2$



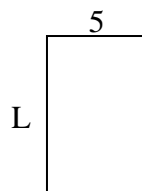
4) Área =  $80u^2$



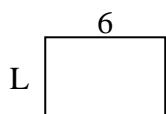
5) Área =  $18u^2$




6) Área =  $40u^2$



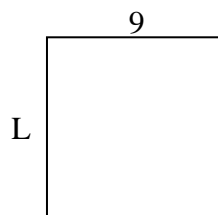
7) Área =  $24u^2$



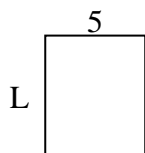
8) Área =  $60u^2$



9) Área =  $81u^2$



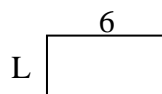
10) Área =  $30u^2$



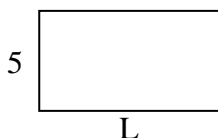
11) Área =  $9u^2$




12) Área =  $18u^2$



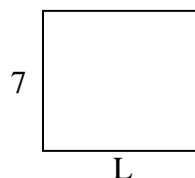
13) Área =  $45u^2$



14) Área =  $32u^2$



15) Área =  $56u^2$



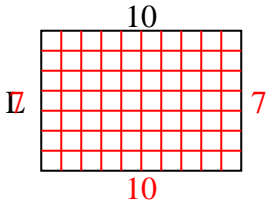
**Respuestas**

1. \_\_\_\_\_
2. \_\_\_\_\_
3. \_\_\_\_\_
4. \_\_\_\_\_
5. \_\_\_\_\_
6. \_\_\_\_\_
7. \_\_\_\_\_
8. \_\_\_\_\_
9. \_\_\_\_\_
10. \_\_\_\_\_
11. \_\_\_\_\_
12. \_\_\_\_\_
13. \_\_\_\_\_
14. \_\_\_\_\_
15. \_\_\_\_\_

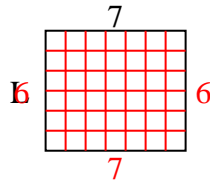


Determina el valor de 'P'.

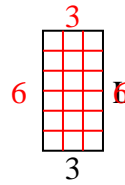
1) Área =  $70u^2$



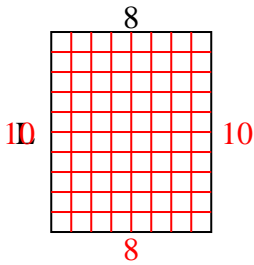
2) Área =  $42u^2$



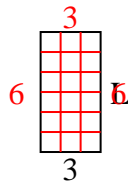
3) Área =  $18u^2$



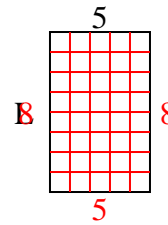
4) Área =  $80u^2$



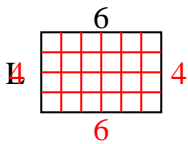
5) Área =  $18u^2$



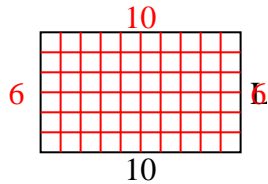
6) Área =  $40u^2$



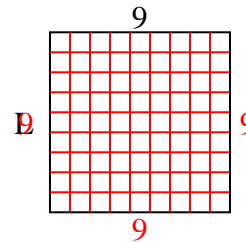
7) Área =  $24u^2$



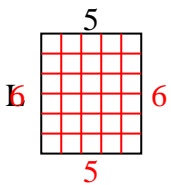
8) Área =  $60u^2$



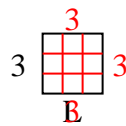
9) Área =  $81u^2$



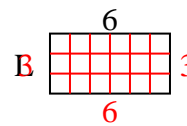
10) Área =  $30u^2$



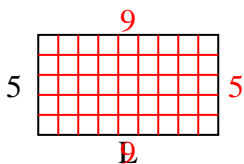
11) Área =  $9u^2$



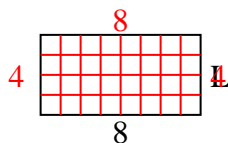
12) Área =  $18u^2$



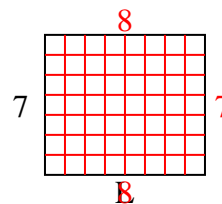
13) Área =  $45u^2$



14) Área =  $32u^2$



15) Área =  $56u^2$



**Respuestas**

1. 7

2. 6

3. 6

4. 10

5. 6

6. 8

7. 4

8. 6

9. 9

10. 6

11. 3

12. 3

13. 9

14. 4

15. 8