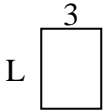


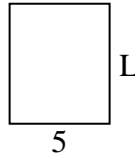


Determina el valor de 'P'.

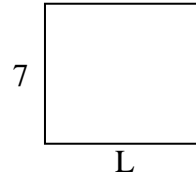
1) Área = $12u^2$



2) Área = $30u^2$



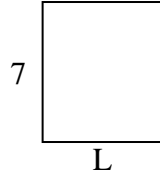
3) Área = $56u^2$



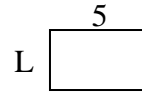
4) Área = $20u^2$



5) Área = $42u^2$



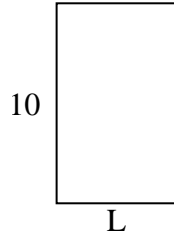
6) Área = $15u^2$



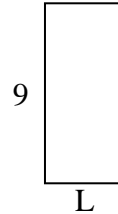
7) Área = $12u^2$



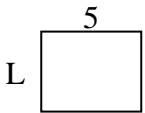
8) Área = $60u^2$



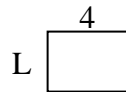
9) Área = $36u^2$



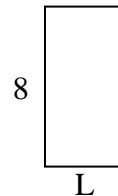
10) Área = $20u^2$



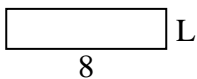
11) Área = $12u^2$



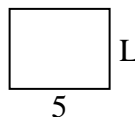
12) Área = $32u^2$



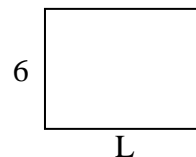
13) Área = $16u^2$



14) Área = $20u^2$



15) Área = $48u^2$



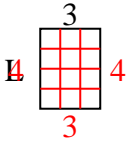
Respuestas

1. _____
2. _____
3. _____
4. _____
5. _____
6. _____
7. _____
8. _____
9. _____
10. _____
11. _____
12. _____
13. _____
14. _____
15. _____

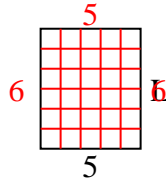


Determina el valor de 'P'.

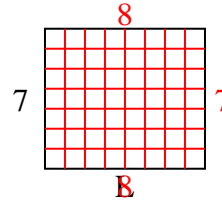
1) Área = $12u^2$



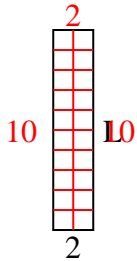
2) Área = $30u^2$



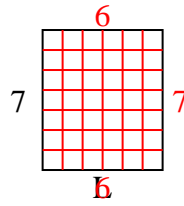
3) Área = $56u^2$



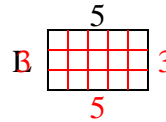
4) Área = $20u^2$



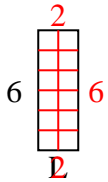
5) Área = $42u^2$



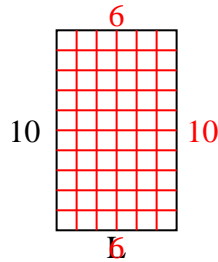
6) Área = $15u^2$



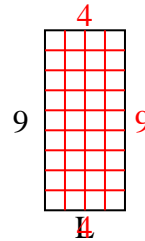
7) Área = $12u^2$



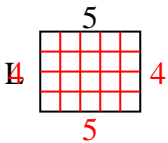
8) Área = $60u^2$



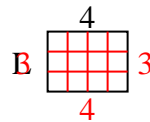
9) Área = $36u^2$



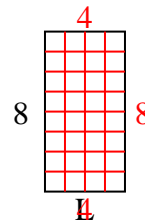
10) Área = $20u^2$



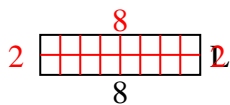
11) Área = $12u^2$



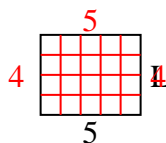
12) Área = $32u^2$



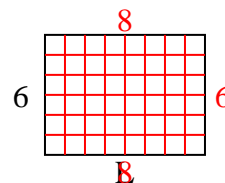
13) Área = $16u^2$



14) Área = $20u^2$



15) Área = $48u^2$



Respuestas

1. 4
2. 6
3. 8
4. 10
5. 6
6. 3
7. 2
8. 6
9. 4
10. 4
11. 3
12. 4
13. 2
14. 4
15. 8