

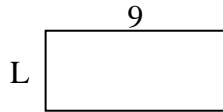


Determina el valor de 'P'.

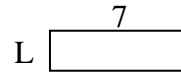
1) Área = $8u^2$



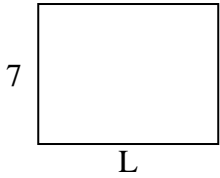
2) Área = $36u^2$



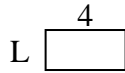
3) Área = $14u^2$



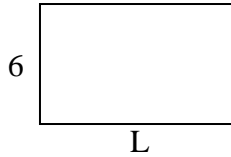
4) Área = $63u^2$



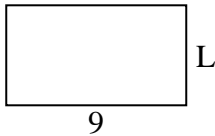
5) Área = $8u^2$



6) Área = $60u^2$



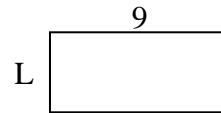
7) Área = $45u^2$



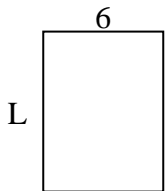
8) Área = $20u^2$



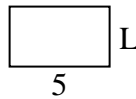
9) Área = $36u^2$



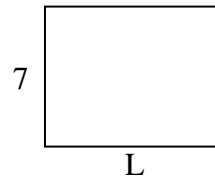
10) Área = $48u^2$



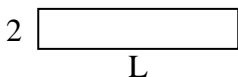
11) Área = $15u^2$



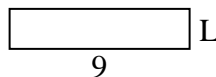
12) Área = $63u^2$



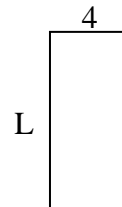
13) Área = $20u^2$



14) Área = $18u^2$



15) Área = $36u^2$



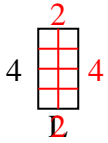
Respuestas

1. _____
2. _____
3. _____
4. _____
5. _____
6. _____
7. _____
8. _____
9. _____
10. _____
11. _____
12. _____
13. _____
14. _____
15. _____

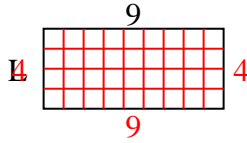


Determina el valor de 'P'.

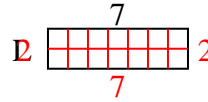
1) Área = $8u^2$



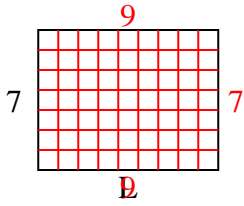
2) Área = $36u^2$



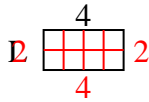
3) Área = $14u^2$



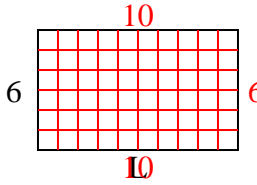
4) Área = $63u^2$



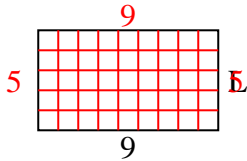
5) Área = $8u^2$



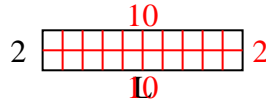
6) Área = $60u^2$



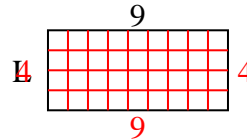
7) Área = $45u^2$



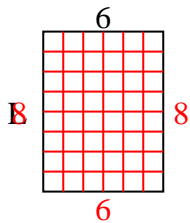
8) Área = $20u^2$



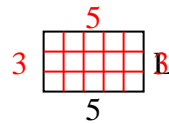
9) Área = $36u^2$



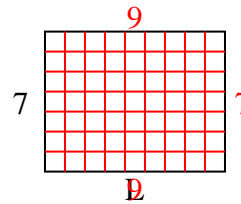
10) Área = $48u^2$



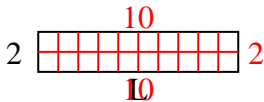
11) Área = $15u^2$



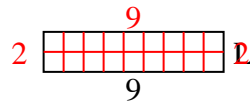
12) Área = $63u^2$



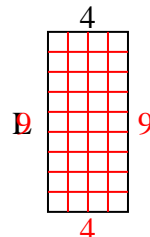
13) Área = $20u^2$



14) Área = $18u^2$



15) Área = $36u^2$



Respuestas

1. 2

2. 4

3. 2

4. 9

5. 2

6. 10

7. 5

8. 10

9. 4

10. 8

11. 3

12. 9

13. 10

14. 2

15. 9