


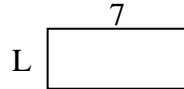


Determina el valor de 'P'.

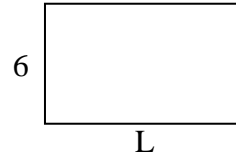
1) Área = $40u^2$



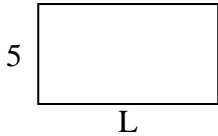
2) Área = $21u^2$



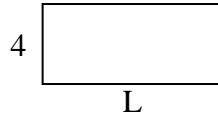
3) Área = $60u^2$



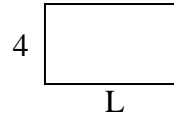
4) Área = $45u^2$



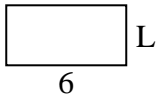
5) Área = $36u^2$



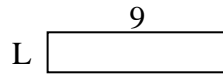
6) Área = $28u^2$



7) Área = $18u^2$



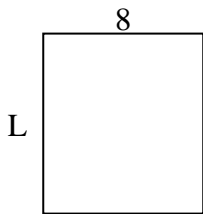
8) Área = $18u^2$



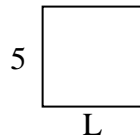
9) Área = $6u^2$



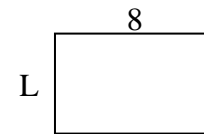
10) Área = $72u^2$



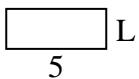
11) Área = $25u^2$



12) Área = $40u^2$



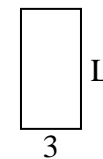
13) Área = $10u^2$



14) Área = $45u^2$



15) Área = $18u^2$



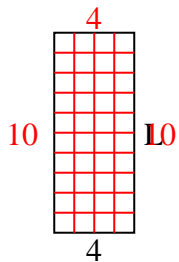
Respuestas

1. _____
2. _____
3. _____
4. _____
5. _____
6. _____
7. _____
8. _____
9. _____
10. _____
11. _____
12. _____
13. _____
14. _____
15. _____

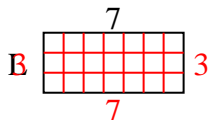


Determina el valor de 'P'.

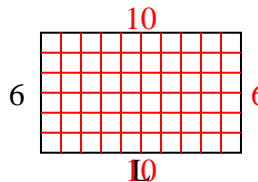
1) Área = $40u^2$



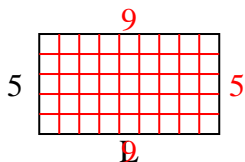
2) Área = $21u^2$



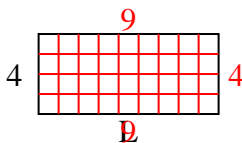
3) Área = $60u^2$



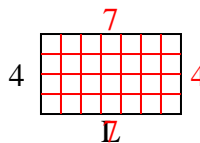
4) Área = $45u^2$



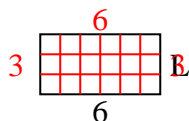
5) Área = $36u^2$



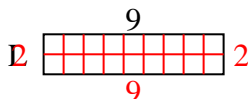
6) Área = $28u^2$



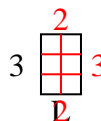
7) Área = $18u^2$



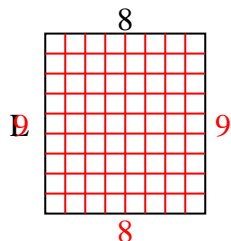
8) Área = $18u^2$



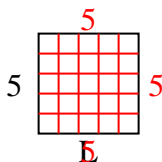
9) Área = $6u^2$



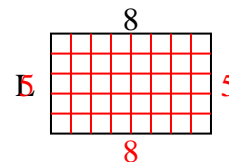
10) Área = $72u^2$



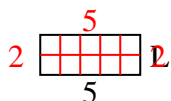
11) Área = $25u^2$



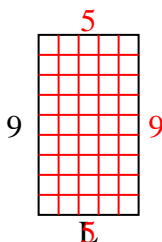
12) Área = $40u^2$



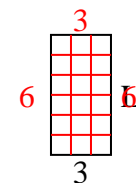
13) Área = $10u^2$



14) Área = $45u^2$



15) Área = $18u^2$



Respuestas

1. 10

2. 3

3. 10

4. 9

5. 9

6. 7

7. 3

8. 2

9. 2

10. 9

11. 5

12. 5

13. 2

14. 5

15. 6