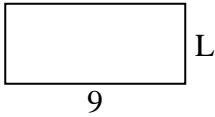




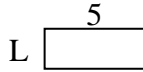
Determina el valor de 'L'. Las longitudes están en cm (no a escala).

**Respuestas**

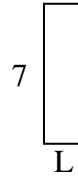
1) perímetro = 26



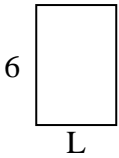
2) perímetro = 14



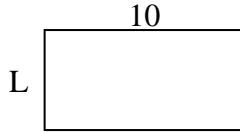
3) perímetro = 18



4) perímetro = 20



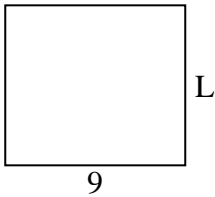
5) perímetro = 30



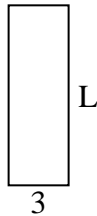
6) perímetro = 10



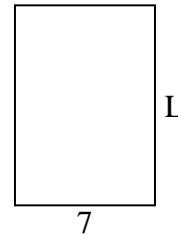
7) perímetro = 34



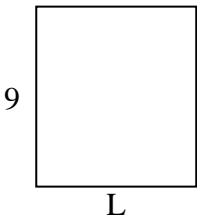
8) perímetro = 24



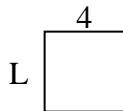
9) perímetro = 34



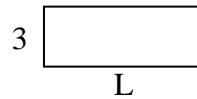
10) perímetro = 34




11) perímetro = 16



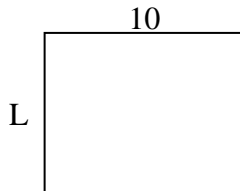
12) perímetro = 22




13) perímetro = 18



14) perímetro = 36



15) perímetro = 24



1. \_\_\_\_\_

2. \_\_\_\_\_

3. \_\_\_\_\_

4. \_\_\_\_\_

5. \_\_\_\_\_

6. \_\_\_\_\_

7. \_\_\_\_\_

8. \_\_\_\_\_

9. \_\_\_\_\_

10. \_\_\_\_\_

11. \_\_\_\_\_

12. \_\_\_\_\_

13. \_\_\_\_\_

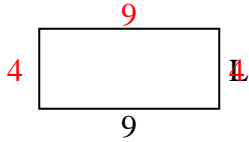
14. \_\_\_\_\_

15. \_\_\_\_\_

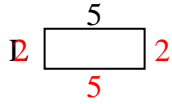


Determina el valor de 'L'. Las longitudes están en cm (no a escala).

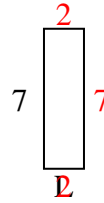
1) perímetro = 26



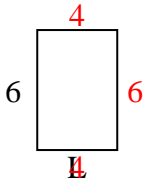
2) perímetro = 14



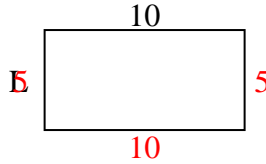
3) perímetro = 18



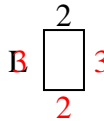
4) perímetro = 20



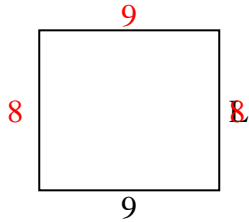
5) perímetro = 30



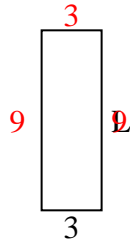
6) perímetro = 10



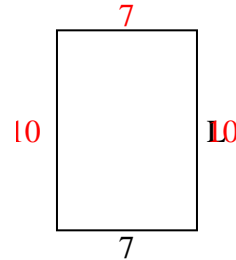
7) perímetro = 34



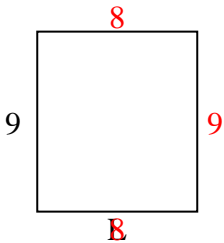
8) perímetro = 24



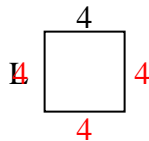
9) perímetro = 34



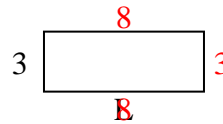
10) perímetro = 34



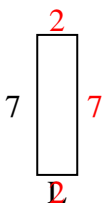
11) perímetro = 16



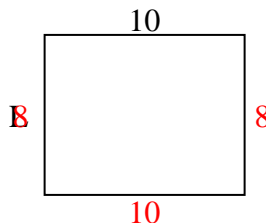
12) perímetro = 22



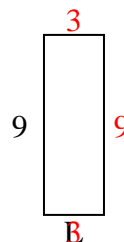
13) perímetro = 18



14) perímetro = 36



15) perímetro = 24

**Respuestas**1. **4 cm**2. **2 cm**3. **2 cm**4. **4 cm**5. **5 cm**6. **3 cm**7. **8 cm**8. **9 cm**9. **10 cm**10. **8 cm**11. **4 cm**12. **8 cm**13. **2 cm**14. **8 cm**15. **3 cm**