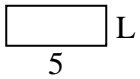




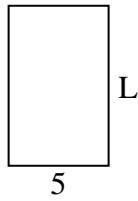
Determina el valor de 'L'. Las longitudes están en cm (no a escala).

Respuestas

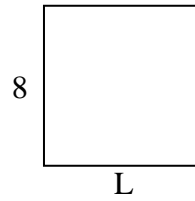
1) perímetro = 14



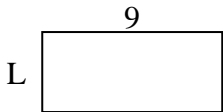
2) perímetro = 26



3) perímetro = 32



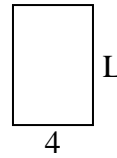
4) perímetro = 26



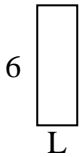
5) perímetro = 16




6) perímetro = 20



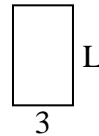
7) perímetro = 16



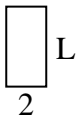
8) perímetro = 24



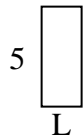
9) perímetro = 16



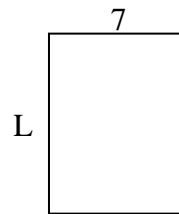
10) perímetro = 12



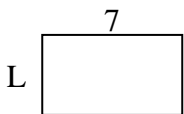
11) perímetro = 14



12) perímetro = 32



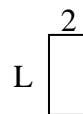
13) perímetro = 22



14) perímetro = 16



15) perímetro = 12



1. _____

2. _____

3. _____

4. _____

5. _____

6. _____

7. _____

8. _____

9. _____

10. _____

11. _____

12. _____

13. _____

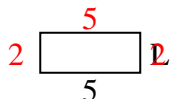
14. _____

15. _____

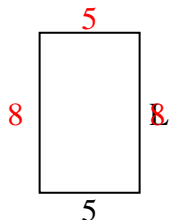


Determina el valor de 'L'. Las longitudes están en cm (no a escala).

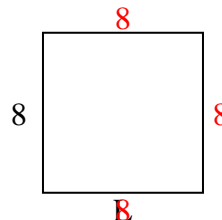
1) perímetro = 14



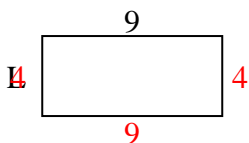
2) perímetro = 26



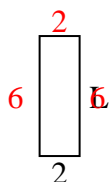
3) perímetro = 32



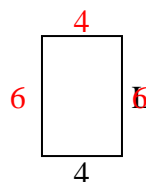
4) perímetro = 26



5) perímetro = 16



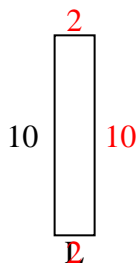
6) perímetro = 20



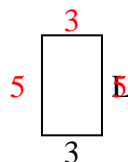
7) perímetro = 16



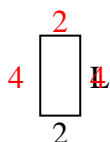
8) perímetro = 24



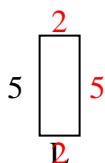
9) perímetro = 16



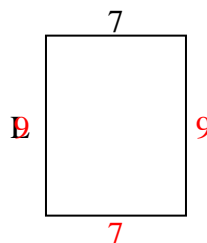
10) perímetro = 12



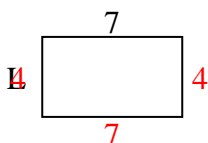
11) perímetro = 14



12) perímetro = 32



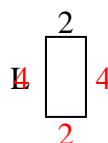
13) perímetro = 22



14) perímetro = 16



15) perímetro = 12

**Respuestas**1. **2 cm**2. **8 cm**3. **8 cm**4. **4 cm**5. **6 cm**6. **6 cm**7. **2 cm**8. **2 cm**9. **5 cm**10. **4 cm**11. **2 cm**12. **9 cm**13. **4 cm**14. **2 cm**15. **4 cm**