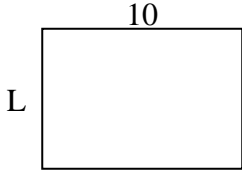




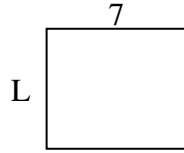
Determina el valor de 'L'. Las longitudes están en cm (no a escala).

Respuestas

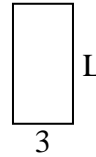
1) perímetro = 34



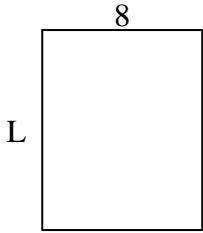
2) perímetro = 26



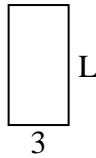
3) perímetro = 18



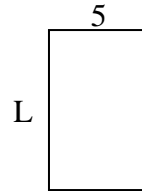
4) perímetro = 36



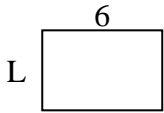
5) perímetro = 18



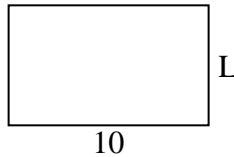
6) perímetro = 26



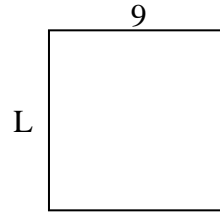
7) perímetro = 20



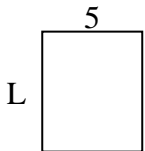
8) perímetro = 32



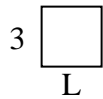
9) perímetro = 36



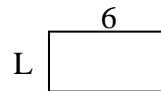
10) perímetro = 22



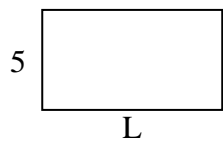
11) perímetro = 12




12) perímetro = 18



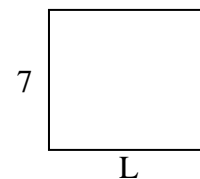
13) perímetro = 28



14) perímetro = 24



15) perímetro = 30



1. _____

2. _____

3. _____

4. _____

5. _____

6. _____

7. _____

8. _____

9. _____

10. _____

11. _____

12. _____

13. _____

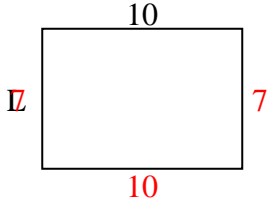
14. _____

15. _____

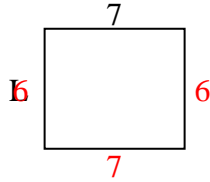


Determina el valor de 'L'. Las longitudes están en cm (no a escala).

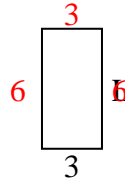
1) perímetro = 34



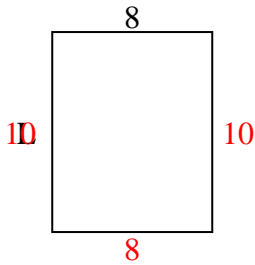
2) perímetro = 26



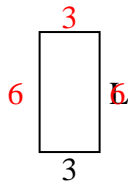
3) perímetro = 18



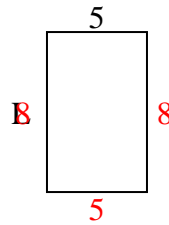
4) perímetro = 36



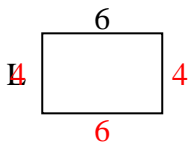
5) perímetro = 18



6) perímetro = 26



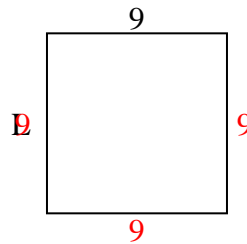
7) perímetro = 20



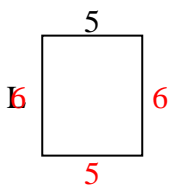
8) perímetro = 32



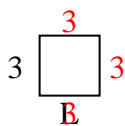
9) perímetro = 36



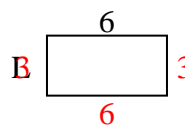
10) perímetro = 22



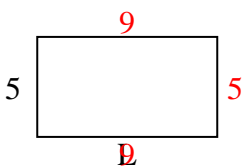
11) perímetro = 12



12) perímetro = 18



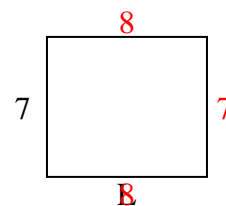
13) perímetro = 28



14) perímetro = 24



15) perímetro = 30



Respuestas

1. 7 cm

2. 6 cm

3. 6 cm

4. 10 cm

5. 6 cm

6. 8 cm

7. 4 cm

8. 6 cm

9. 9 cm

10. 6 cm

11. 3 cm

12. 3 cm

13. 9 cm

14. 4 cm

15. 8 cm