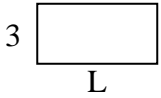




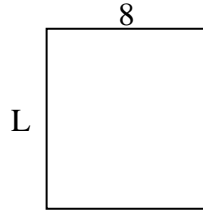
Determina el valor de 'L'. Las longitudes están en cm (no a escala).

Respuestas

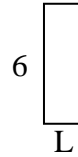
1) perímetro = 18



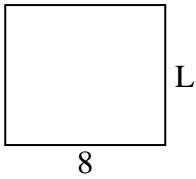
2) perímetro = 34



3) perímetro = 16



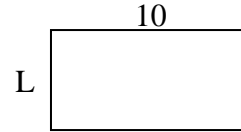
4) perímetro = 30



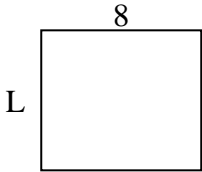
5) perímetro = 10



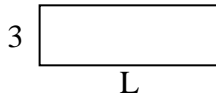
6) perímetro = 30



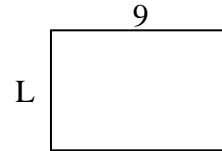
7) perímetro = 30



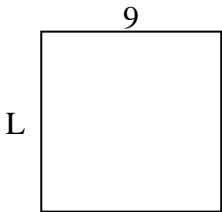
8) perímetro = 24



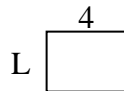
9) perímetro = 30



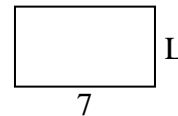
10) perímetro = 36



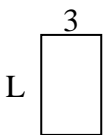
11) perímetro = 14



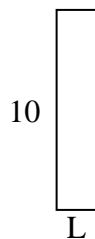
12) perímetro = 22



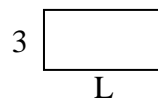
13) perímetro = 16



14) perímetro = 24



15) perímetro = 18

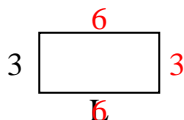


1. _____
2. _____
3. _____
4. _____
5. _____
6. _____
7. _____
8. _____
9. _____
10. _____
11. _____
12. _____
13. _____
14. _____
15. _____

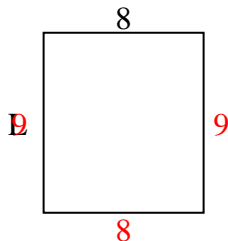


Determina el valor de 'L'. Las longitudes están en cm (no a escala).

1) perímetro = 18



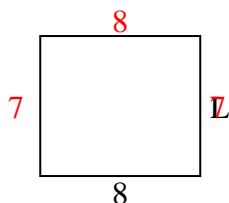
2) perímetro = 34



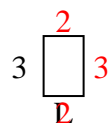
3) perímetro = 16



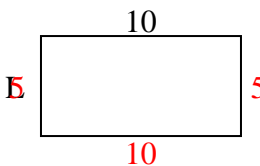
4) perímetro = 30



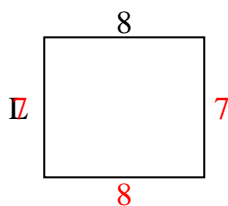
5) perímetro = 10



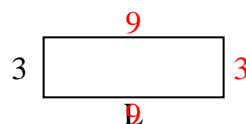
6) perímetro = 30



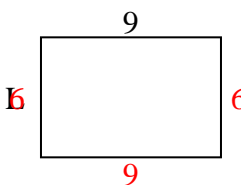
7) perímetro = 30



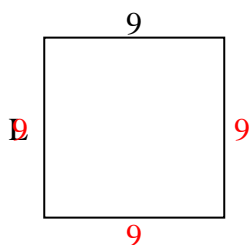
8) perímetro = 24



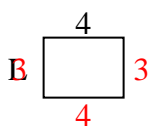
9) perímetro = 30



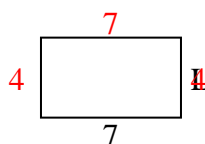
10) perímetro = 36



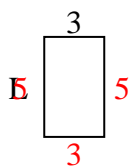
11) perímetro = 14




12) perímetro = 22



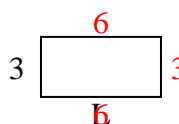
13) perímetro = 16



14) perímetro = 24



15) perímetro = 18

**Respuestas**1. **6 cm**2. **9 cm**3. **2 cm**4. **7 cm**5. **2 cm**6. **5 cm**7. **7 cm**8. **9 cm**9. **6 cm**10. **9 cm**11. **3 cm**12. **4 cm**13. **5 cm**14. **2 cm**15. **6 cm**