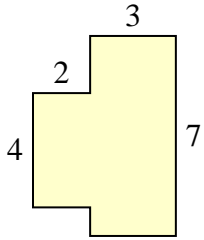




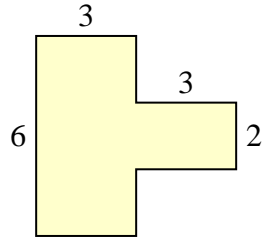
Encuentra el área total de cada figura. La medida está en milímetros (mm). No a escala.

Respuestas

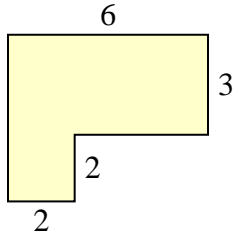
1)



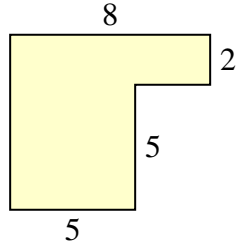
2)



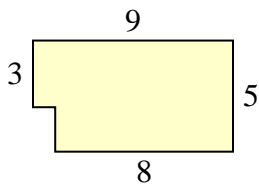
3)



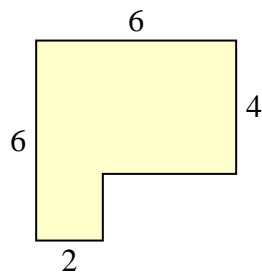
4)



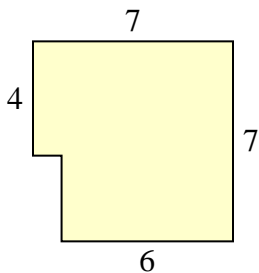
5)



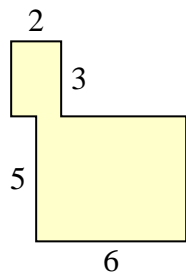
6)



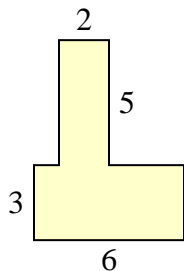
7)



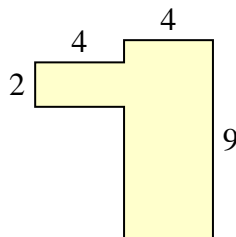
8)



9)



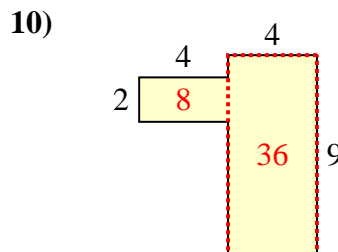
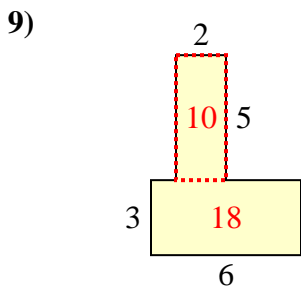
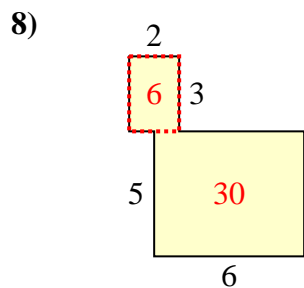
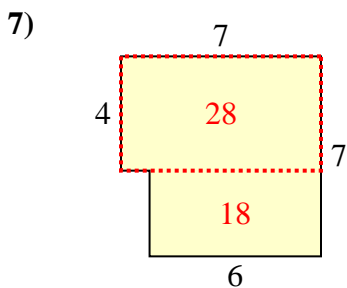
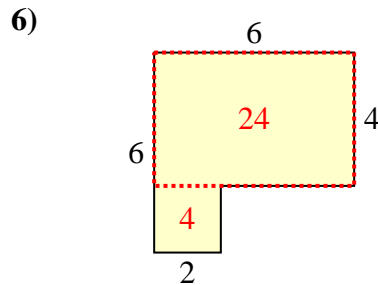
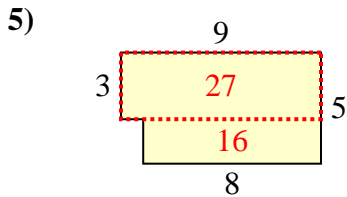
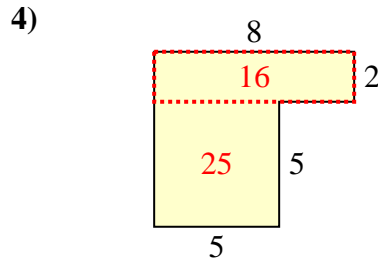
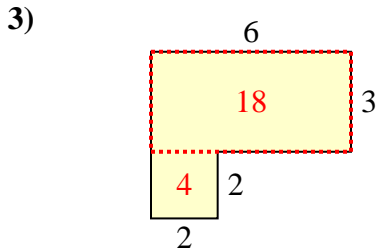
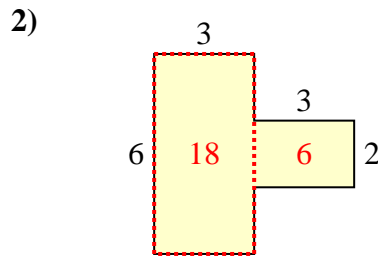
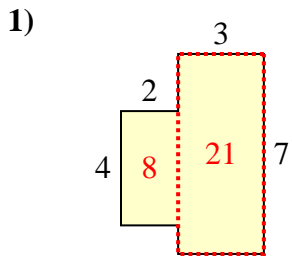
10)



1. _____
2. _____
3. _____
4. _____
5. _____
6. _____
7. _____
8. _____
9. _____
10. _____



Encuentra el área total de cada figura. La medida está en milímetros (mm). No a escala.



Respuestas

1. 29 mm²
2. 24 mm²
3. 22 mm²
4. 41 mm²
5. 43 mm²
6. 28 mm²
7. 46 mm²
8. 36 mm²
9. 28 mm²
10. 44 mm²