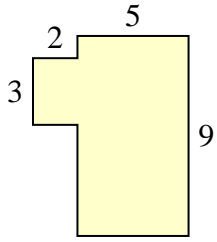




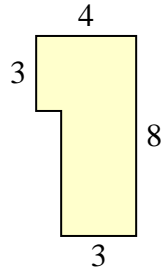
Encuentra el área total de cada figura. La medida está en milímetros (mm). No a escala.

Respuestas

1)



2)



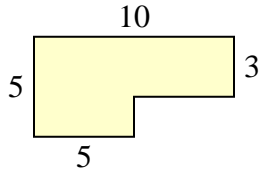
1. _____

2. _____

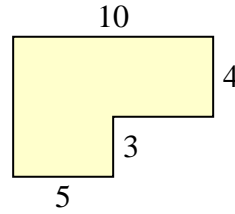
3. _____

4. _____

3)



4)



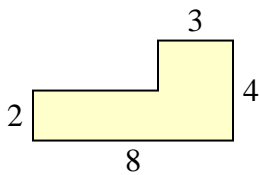
5. _____

6. _____

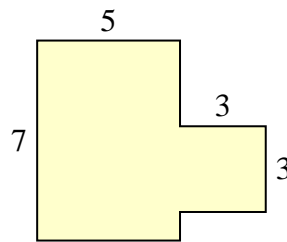
7. _____

8. _____

5)



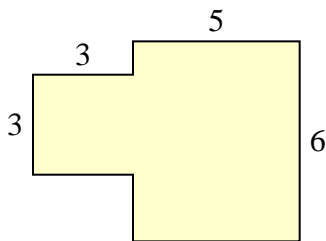
6)



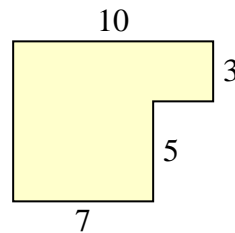
9. _____

10. _____

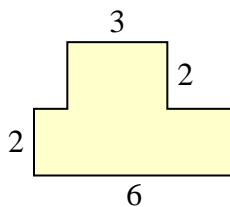
7)



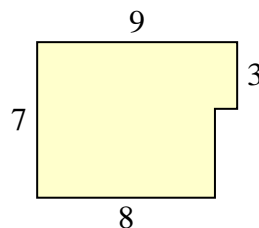
8)



9)

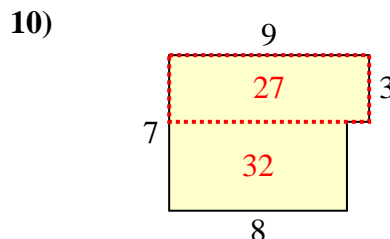
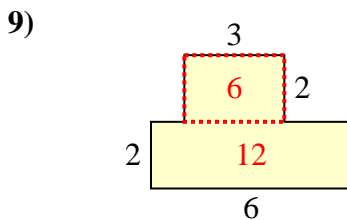
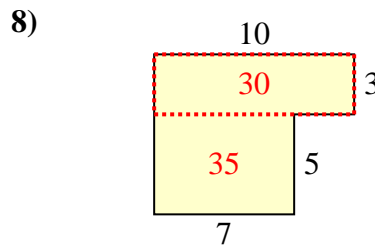
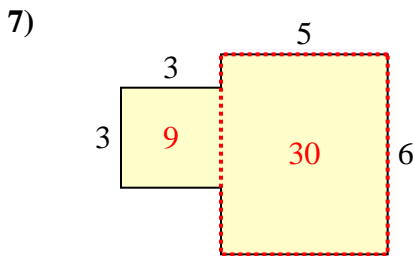
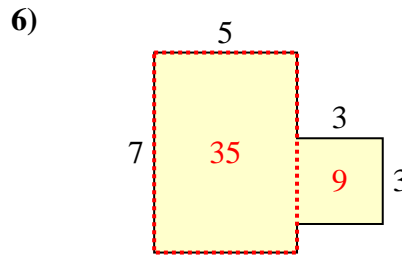
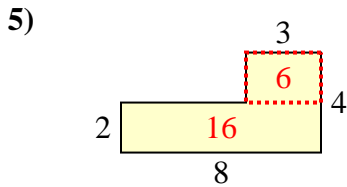
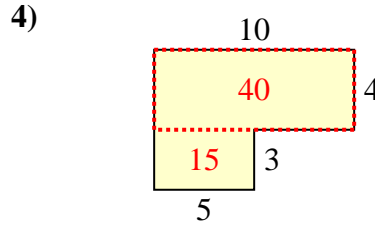
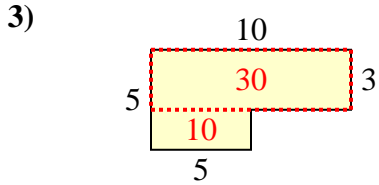
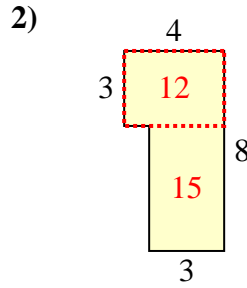
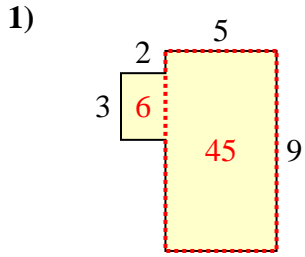


10)





Encuentra el área total de cada figura. La medida está en milímetros (mm). No a escala.



Respuestas

1. 51 mm²
2. 27 mm²
3. 40 mm²
4. 55 mm²
5. 22 mm²
6. 44 mm²
7. 39 mm²
8. 65 mm²
9. 18 mm²
10. 59 mm²