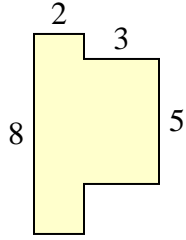




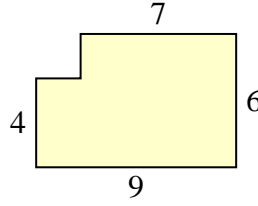
Encuentra el área total de cada figura. La medida está en milímetros (mm). No a escala.

**Respuestas**

1)



2)



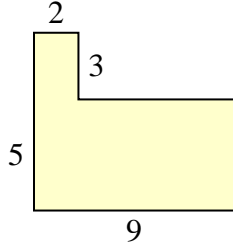
1. \_\_\_\_\_

2. \_\_\_\_\_

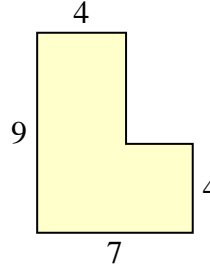
3. \_\_\_\_\_

4. \_\_\_\_\_

3)



4)



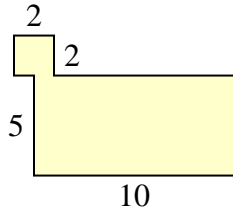
5. \_\_\_\_\_

6. \_\_\_\_\_

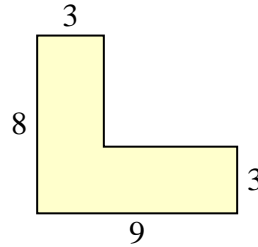
7. \_\_\_\_\_

8. \_\_\_\_\_

5)



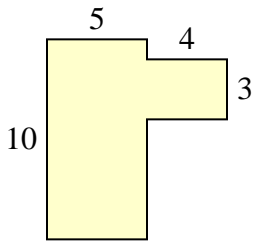
6)



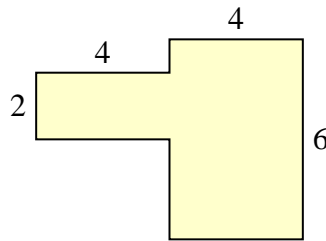
9. \_\_\_\_\_

10. \_\_\_\_\_

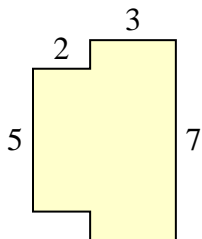
7)



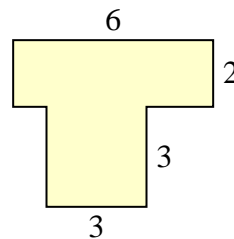
8)



9)

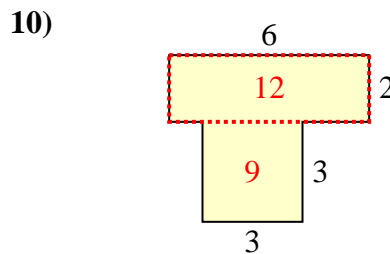
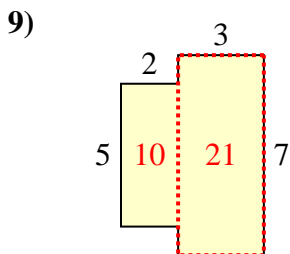
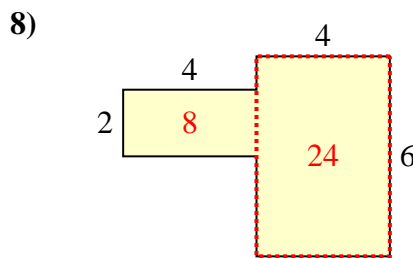
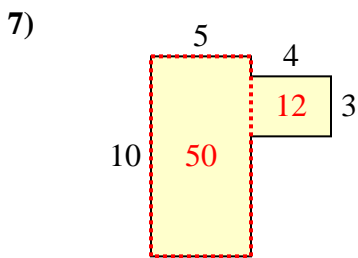
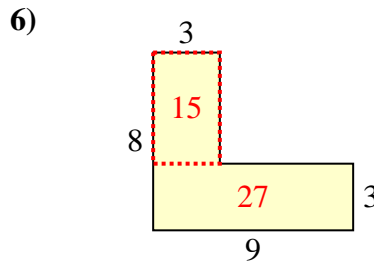
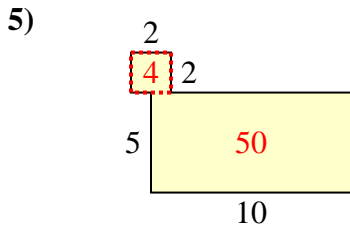
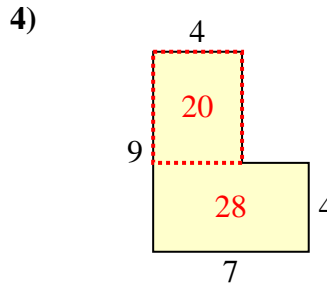
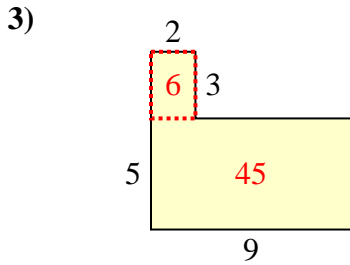
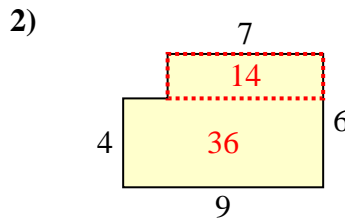
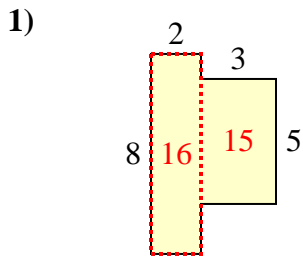


10)





Encuentra el área total de cada figura. La medida está en milímetros (mm). No a escala.



**Respuestas**

1. 31 mm<sup>2</sup>
2. 50 mm<sup>2</sup>
3. 51 mm<sup>2</sup>
4. 48 mm<sup>2</sup>
5. 54 mm<sup>2</sup>
6. 42 mm<sup>2</sup>
7. 62 mm<sup>2</sup>
8. 32 mm<sup>2</sup>
9. 31 mm<sup>2</sup>
10. 21 mm<sup>2</sup>