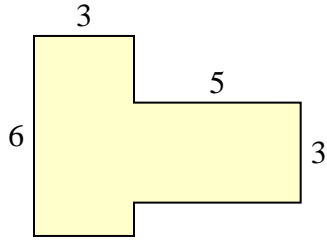


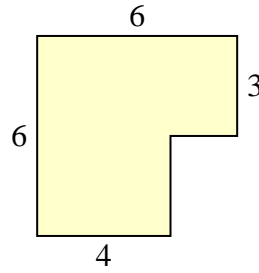


Encuentra el área total de cada figura. La medida está en milímetros (mm). No a escala.

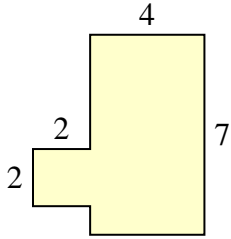
1)



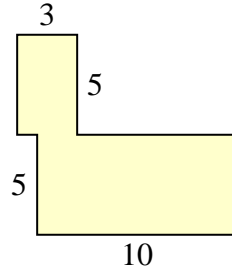
2)



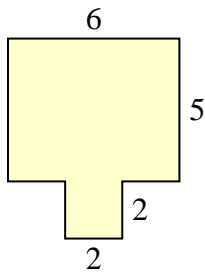
3)



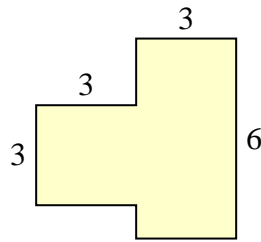
4)



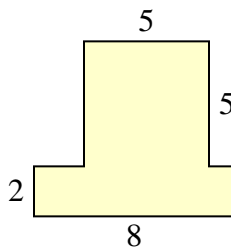
5)



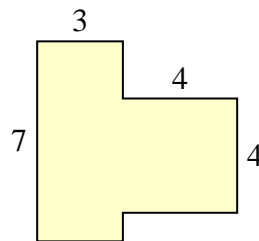
6)



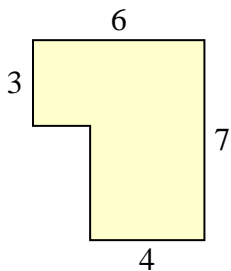
7)



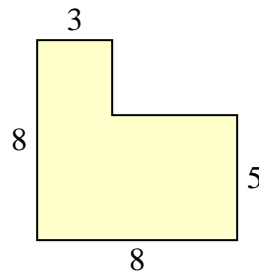
8)



9)



10)



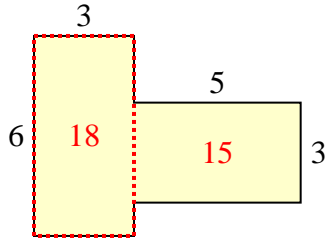
Respuestas

1. _____
2. _____
3. _____
4. _____
5. _____
6. _____
7. _____
8. _____
9. _____
10. _____

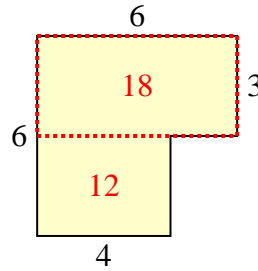


Encuentra el área total de cada figura. La medida está en milímetros (mm). No a escala.

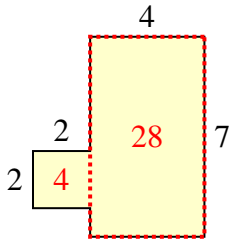
1)



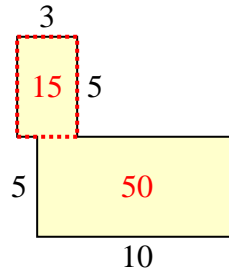
2)



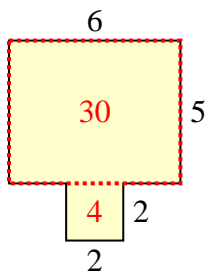
3)



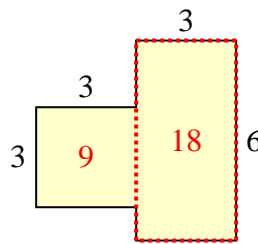
4)



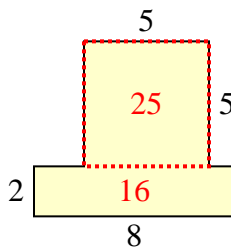
5)



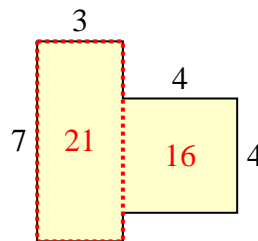
6)



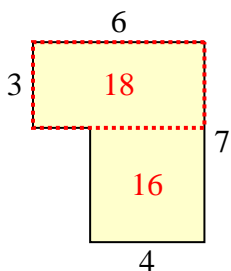
7)



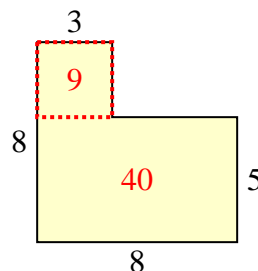
8)



9)



10)



Respuestas

1. 33 mm²
2. 30 mm²
3. 32 mm²
4. 65 mm²
5. 34 mm²
6. 27 mm²
7. 41 mm²
8. 37 mm²
9. 34 mm²
10. 49 mm²