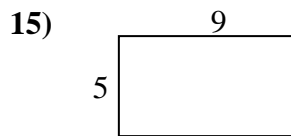
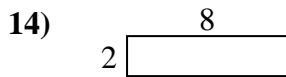
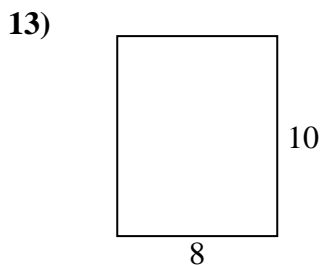
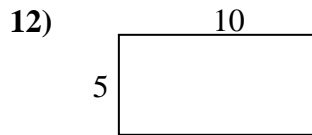
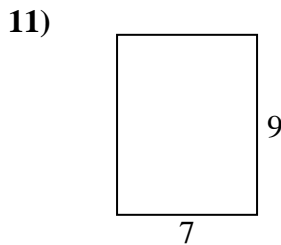
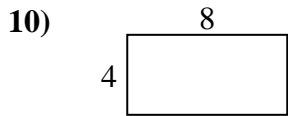
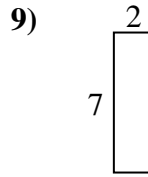
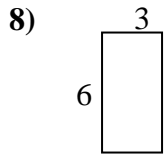
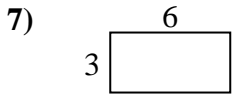
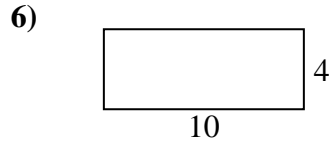
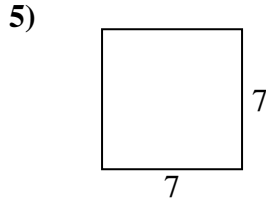
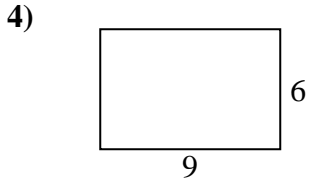
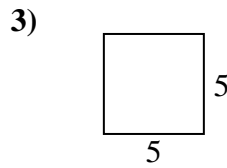
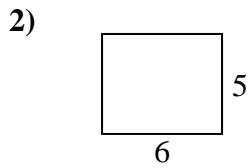
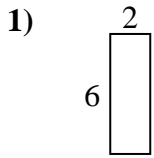




Encuentra el perímetro de cada figura. Cada figura está en pulgadas. No a escala.

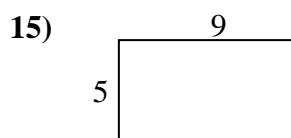
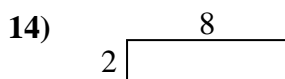
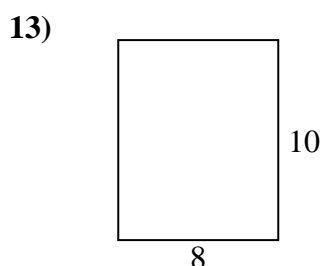
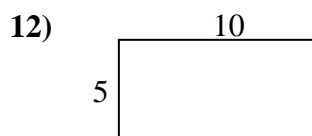
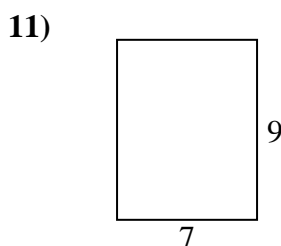
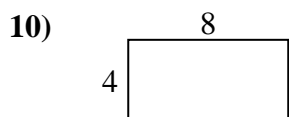
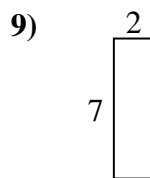
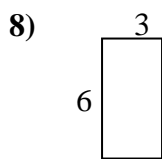
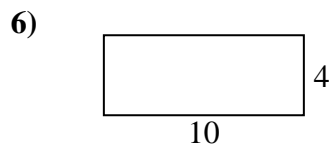
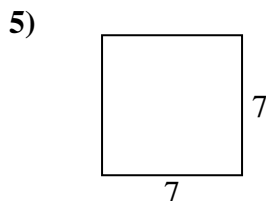
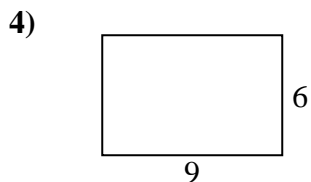
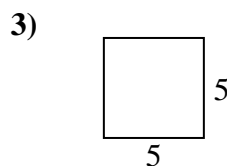
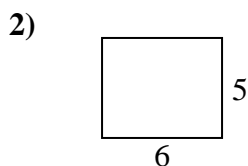
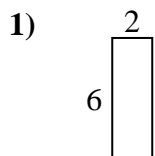


**Respuestas**

1. \_\_\_\_\_
2. \_\_\_\_\_
3. \_\_\_\_\_
4. \_\_\_\_\_
5. \_\_\_\_\_
6. \_\_\_\_\_
7. \_\_\_\_\_
8. \_\_\_\_\_
9. \_\_\_\_\_
10. \_\_\_\_\_
11. \_\_\_\_\_
12. \_\_\_\_\_
13. \_\_\_\_\_
14. \_\_\_\_\_
15. \_\_\_\_\_



Encuentra el perímetro de cada figura. Cada figura está en pulgadas. No a escala.



**Respuestas**

1.	<u>16</u>	<u>12</u>
2.	<u>22</u>	<u>30</u>
3.	<u>20</u>	<u>25</u>
4.	<u>30</u>	<u>54</u>
5.	<u>28</u>	<u>49</u>
6.	<u>28</u>	<u>40</u>
7.	<u>18</u>	<u>18</u>
8.	<u>18</u>	<u>18</u>
9.	<u>18</u>	<u>14</u>
10.	<u>24</u>	<u>32</u>
11.	<u>32</u>	<u>63</u>
12.	<u>30</u>	<u>50</u>
13.	<u>36</u>	<u>80</u>
14.	<u>20</u>	<u>16</u>
15.	<u>28</u>	<u>45</u>