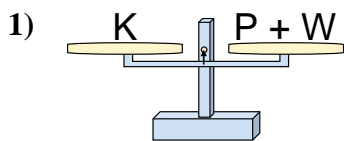


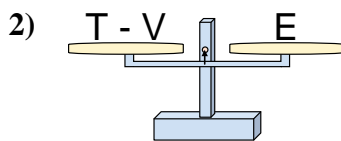


Las escalas mostradas están balanceadas. Determine que enunciado es correcto.

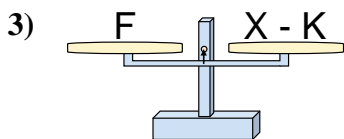
Respuestas



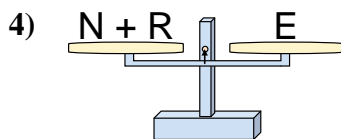
- A. $P = W + K$
- B. $P = K - W$
- C. $P = K + W$
- D. $P = W - K$



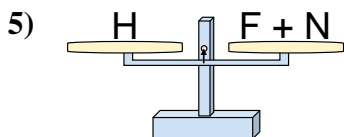
- A. $T = E + E$
- B. $T = V - E$
- C. $T = E - V$
- D. $T = V + E$



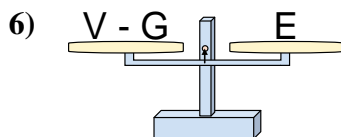
- A. $X = K + F$
- B. $X = F + F$
- C. $X = F - K$
- D. $X = K - F$



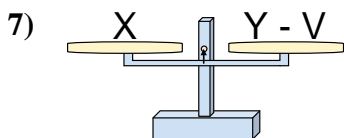
- A. $N = E - R$
- B. $N = R + E$
- C. $N = E + R$
- D. $N = R - E$



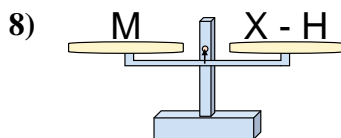
- A. $F = N + H$
- B. $F = N - H$
- C. $F = H + N$
- D. $F = H - N$



- A. $V = G - E$
- B. $V = E + E$
- C. $V = G + E$
- D. $V = E - G$



- A. $Y = V - X$
- B. $Y = X - V$
- C. $Y = X + X$
- D. $Y = V + X$



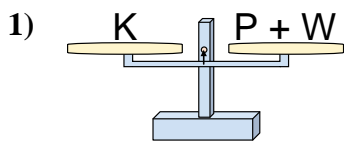
- A. $X = M - H$
- B. $X = M + M$
- C. $X = H - M$
- D. $X = H + M$

- 1. _____
- 2. _____
- 3. _____
- 4. _____
- 5. _____
- 6. _____
- 7. _____
- 8. _____

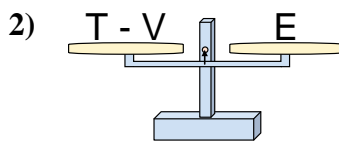


Las escalas mostradas están balanceadas. Determine que enunciado es correcto.

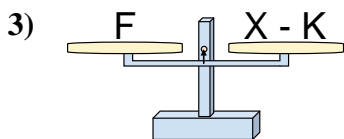
Respuestas



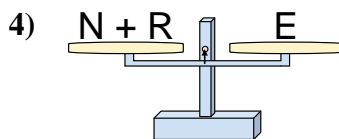
- A. $P = W + K$
- B. $P = K - W$
- C. $P = K + W$
- D. $P = W - K$



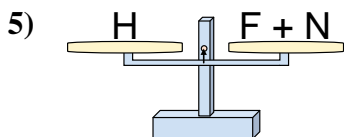
- A. $T = E + E$
- B. $T = V - E$
- C. $T = E - V$
- D. $T = V + E$



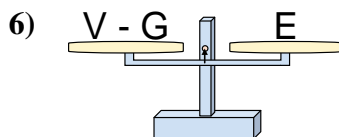
- A. $X = K + F$
- B. $X = F + F$
- C. $X = F - K$
- D. $X = K - F$



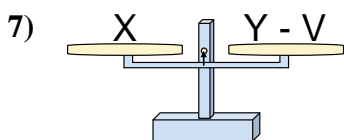
- A. $N = E - R$
- B. $N = R + E$
- C. $N = E + R$
- D. $N = R - E$



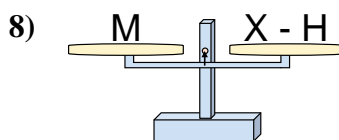
- A. $F = N + H$
- B. $F = N - H$
- C. $F = H + N$
- D. $F = H - N$



- A. $V = G - E$
- B. $V = E + E$
- C. $V = G + E$
- D. $V = E - G$



- A. $Y = V - X$
- B. $Y = X - V$
- C. $Y = X + X$
- D. $Y = V + X$



- A. $X = M - H$
- B. $X = M + M$
- C. $X = H - M$
- D. $X = H + M$

- 1. **B**
- 2. **D**
- 3. **A**
- 4. **A**
- 5. **D**
- 6. **C**
- 7. **D**
- 8. **D**