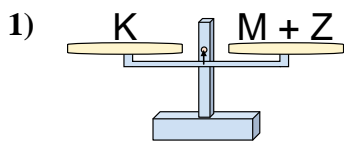


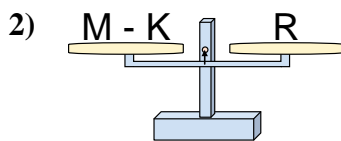


Las escalas mostradas están balanceadas. Determine que enunciado es correcto.

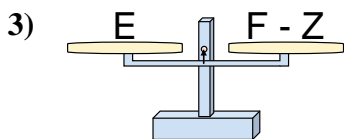
**Respuestas**



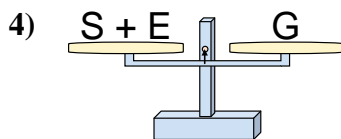
- A.  $M = Z + K$
- B.  $M = Z - K$
- C.  $M = K + Z$
- D.  $M = K - Z$



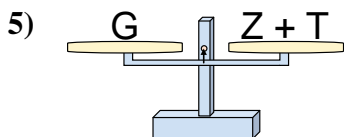
- A.  $M = R + R$
- B.  $M = K - R$
- C.  $M = R - K$
- D.  $M = K + R$



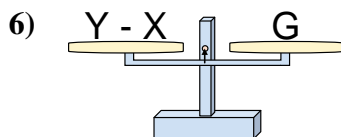
- A.  $F = Z - E$
- B.  $F = E + E$
- C.  $F = E - Z$
- D.  $F = Z + E$



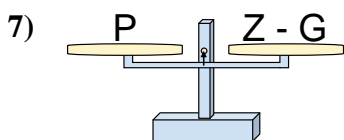
- A.  $S = G - E$
- B.  $S = G + E$
- C.  $S = E - G$
- D.  $S = E + G$



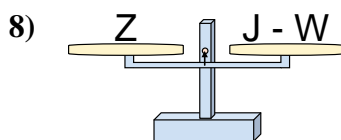
- A.  $Z = G - T$
- B.  $Z = G + T$
- C.  $Z = T + G$
- D.  $Z = T - G$



- A.  $Y = X + G$
- B.  $Y = G - X$
- C.  $Y = X - G$
- D.  $Y = G + G$



- A.  $Z = G - P$
- B.  $Z = P - G$
- C.  $Z = G + P$
- D.  $Z = P + P$



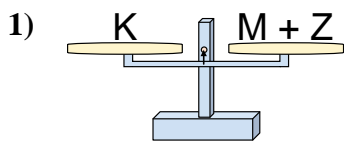
- A.  $J = Z + Z$
- B.  $J = W - Z$
- C.  $J = Z - W$
- D.  $J = W + Z$

- 1. \_\_\_\_\_
- 2. \_\_\_\_\_
- 3. \_\_\_\_\_
- 4. \_\_\_\_\_
- 5. \_\_\_\_\_
- 6. \_\_\_\_\_
- 7. \_\_\_\_\_
- 8. \_\_\_\_\_

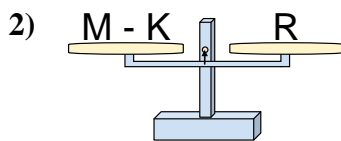


Las escalas mostradas están balanceadas. Determine que enunciado es correcto.

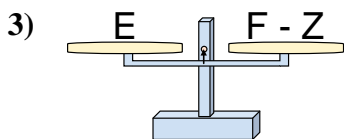
**Respuestas**



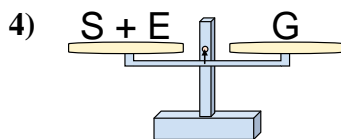
- A.  $M = Z + K$
- B.  $M = Z - K$
- C.  $M = K + Z$
- D.  $M = K - Z$



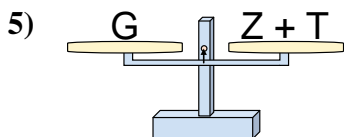
- A.  $M = R + R$
- B.  $M = K - R$
- C.  $M = R - K$
- D.  $M = K + R$



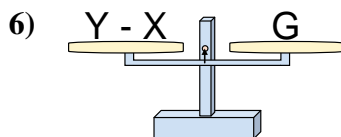
- A.  $F = Z - E$
- B.  $F = E + E$
- C.  $F = E - Z$
- D.  $F = Z + E$



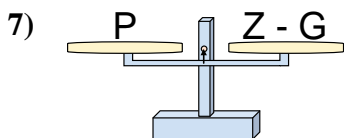
- A.  $S = G - E$
- B.  $S = G + E$
- C.  $S = E - G$
- D.  $S = E + G$



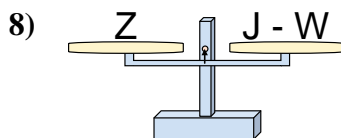
- A.  $Z = G - T$
- B.  $Z = G + T$
- C.  $Z = T + G$
- D.  $Z = T - G$



- A.  $Y = X + G$
- B.  $Y = G - X$
- C.  $Y = X - G$
- D.  $Y = G + G$



- A.  $Z = G - P$
- B.  $Z = P - G$
- C.  $Z = G + P$
- D.  $Z = P + P$



- A.  $J = Z + Z$
- B.  $J = W - Z$
- C.  $J = Z - W$
- D.  $J = W + Z$

- 1.     **D**
- 2.     **D**
- 3.     **D**
- 4.     **A**
- 5.     **A**
- 6.     **A**
- 7.     **C**
- 8.     **D**