



Determina cual gráfica pertenece a la tabla.

Respuestas

1)

Gente	
	7,000
	10,000
	9,000
	5,000
	1,000

2)

Gente	
	10,000
	7,000
	5,000
	9,000
	1,000

3)

Gente	
	9,000
	10,000
	5,000
	1,000
	7,000

4)

Gente	
	10,000
	9,000
	5,000
	1,000
	7,000

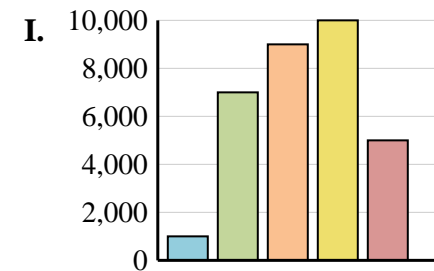
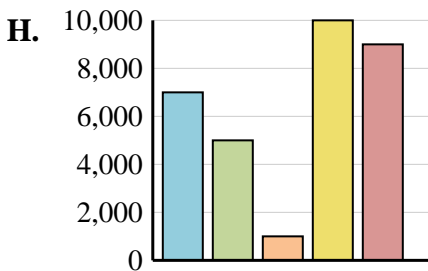
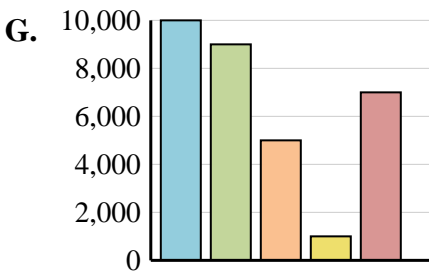
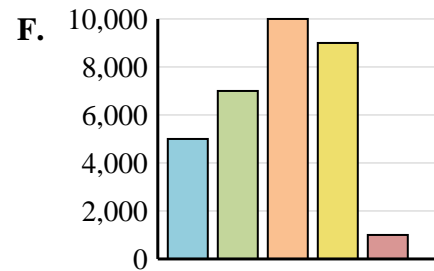
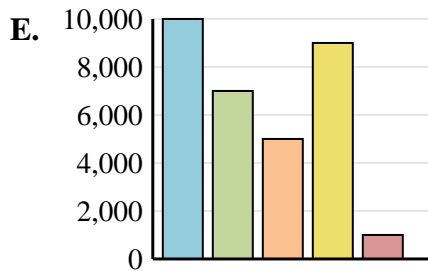
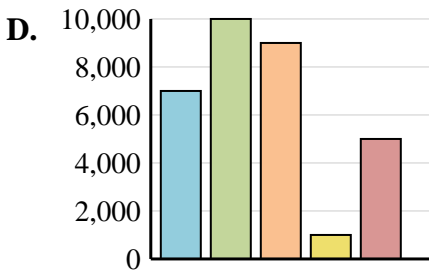
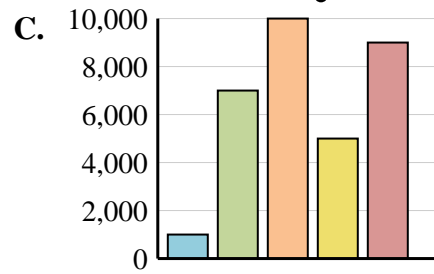
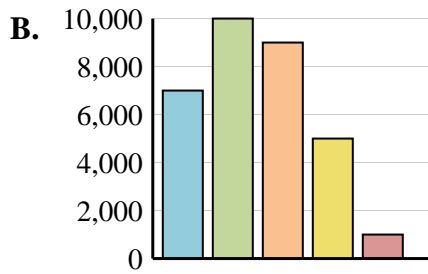
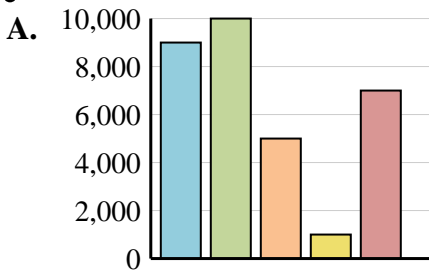
5)

Gente	
	7,000
	10,000
	9,000
	1,000
	5,000

6)

Gente	
	7,000
	5,000
	1,000
	10,000
	9,000

1. _____
2. _____
3. _____
4. _____
5. _____
6. _____





Determina cual gráfica pertenece a la tabla.

Respuestas

1)

Gente
7,000
10,000
9,000
5,000
1,000

2)

Gente
10,000
7,000
5,000
9,000
1,000

3)

Gente
9,000
10,000
5,000
1,000
7,000

4)

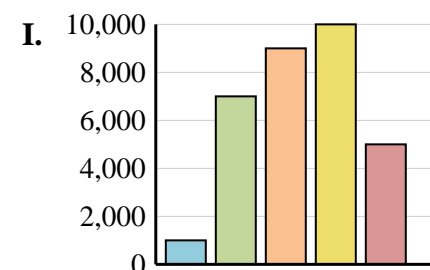
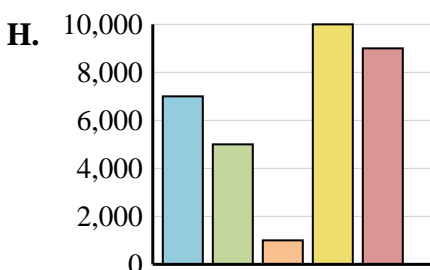
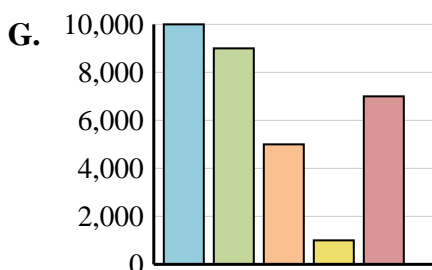
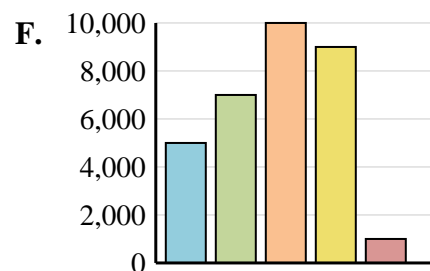
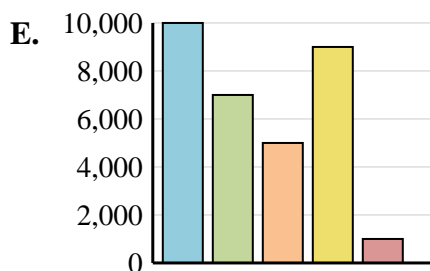
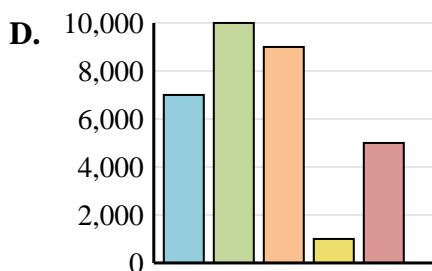
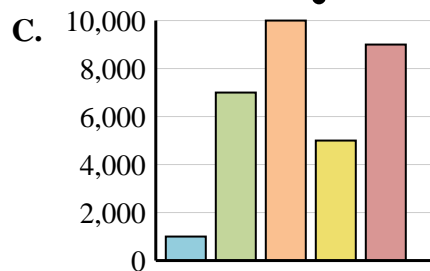
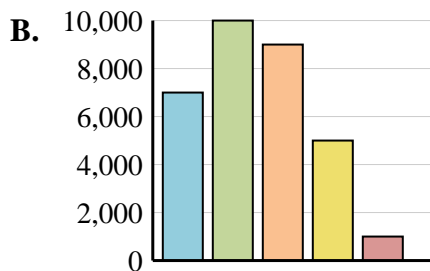
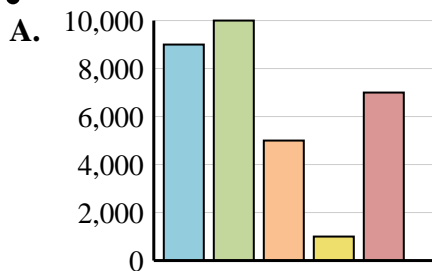
Gente
10,000
9,000
5,000
1,000
7,000

5)

Gente
7,000
10,000
9,000
1,000
5,000

6)

Gente
7,000
5,000
1,000
10,000
9,000



1. **B**
2. **E**
3. **A**
4. **G**
5. **D**
6. **H**