



Determina cual gráfica pertenece a la tabla.

Respuestas

1)

Gente	
	4,000
	3,000
	8,000
	5,000
	2,000

2)

Gente	
	3,000
	8,000
	4,000
	2,000
	5,000

3)

Gente	
	2,000
	5,000
	8,000
	4,000
	3,000

4)

Gente	
	4,000
	8,000
	2,000
	5,000
	3,000

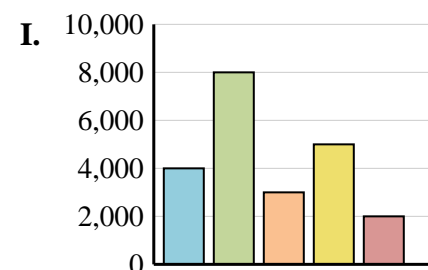
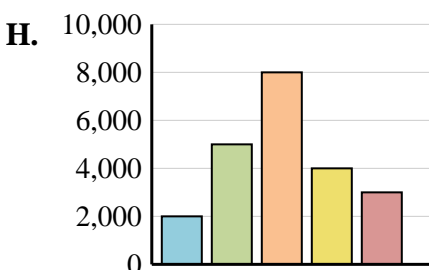
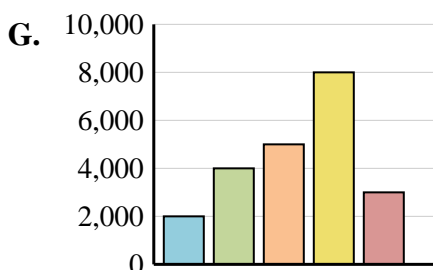
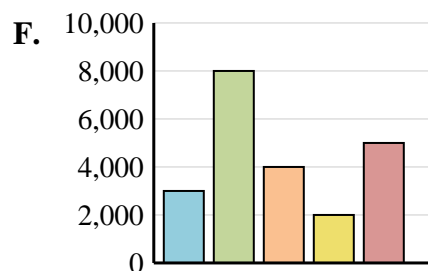
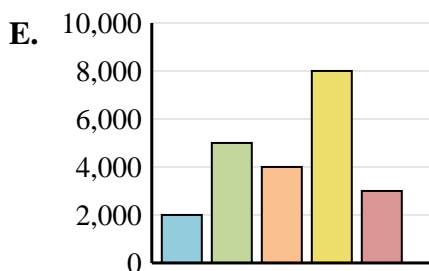
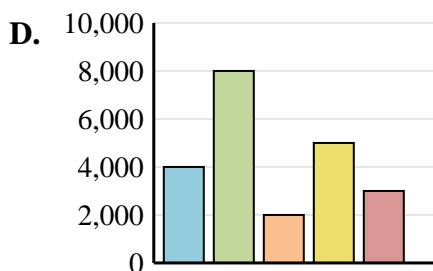
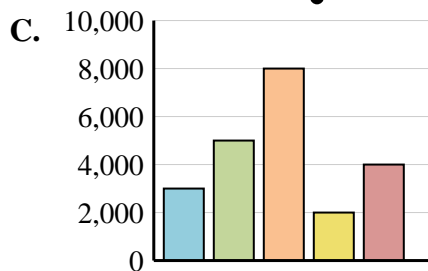
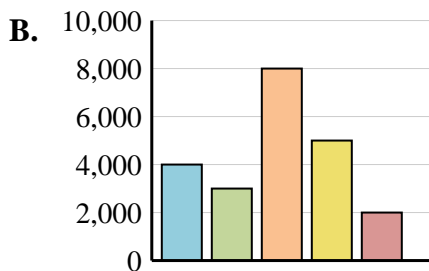
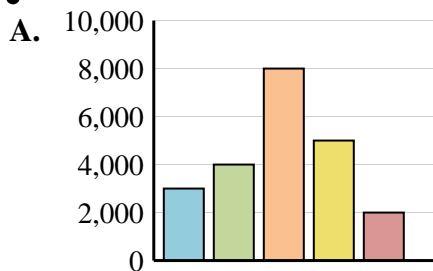
5)

Gente	
	2,000
	4,000
	5,000
	8,000
	3,000

6)

Gente	
	3,000
	5,000
	8,000
	2,000
	4,000

1. _____
2. _____
3. _____
4. _____
5. _____
6. _____





Determina cual gráfica pertenece a la tabla.

Respuestas

1)

	Gente
	4,000
	3,000
	8,000
	5,000
	2,000

2)

	Gente
	3,000
	8,000
	4,000
	2,000
	5,000

3)

	Gente
	2,000
	5,000
	8,000
	4,000
	3,000

4)

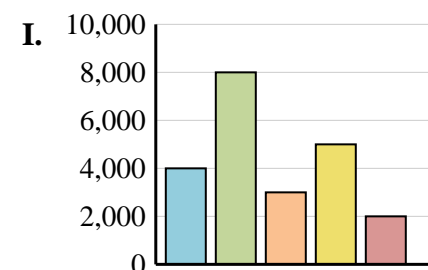
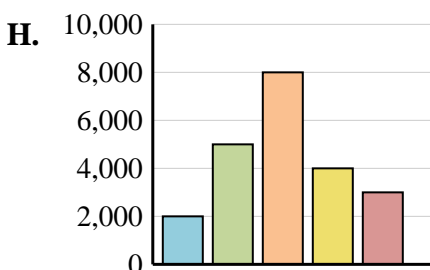
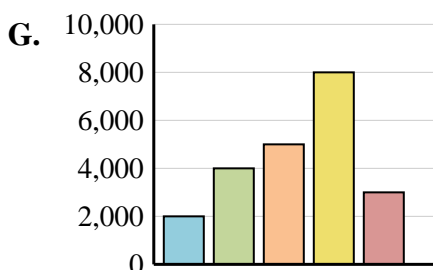
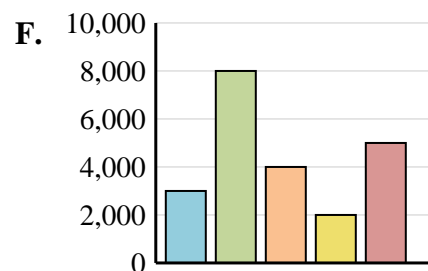
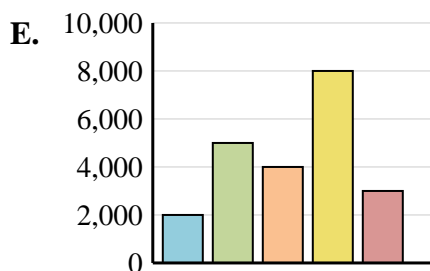
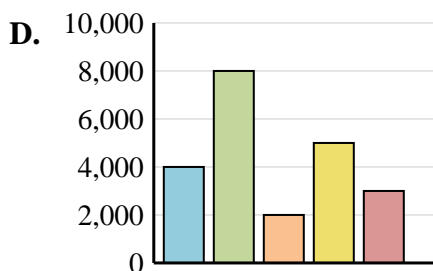
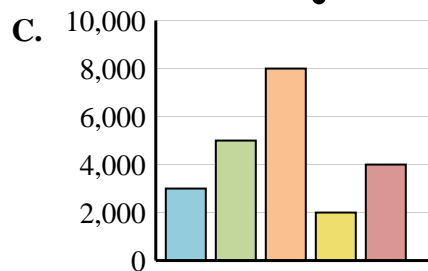
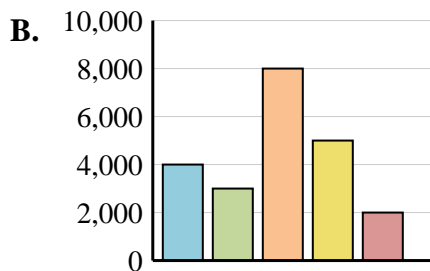
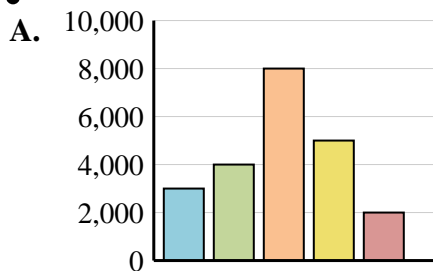
	Gente
	4,000
	8,000
	2,000
	5,000
	3,000

5)

	Gente
	2,000
	4,000
	5,000
	8,000
	3,000

6)

	Gente
	3,000
	5,000
	8,000
	2,000
	4,000

1. **B**2. **F**3. **H**4. **D**5. **G**6. **C**