



Determina cual gráfica pertenece a la tabla.

Respuestas

1)

Gente
6,000
9,000
8,000
4,000
7,000

2)

Gente
9,000
8,000
4,000
7,000
6,000

3)

Gente
4,000
9,000
8,000
6,000
7,000

4)

Gente
8,000
7,000
4,000
6,000
9,000

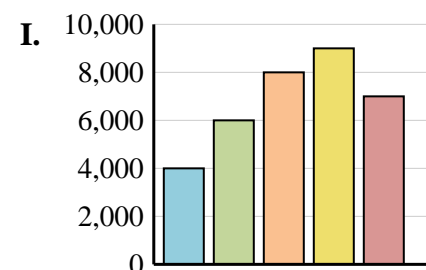
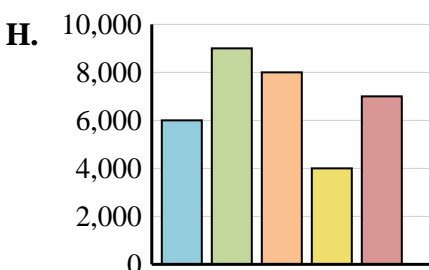
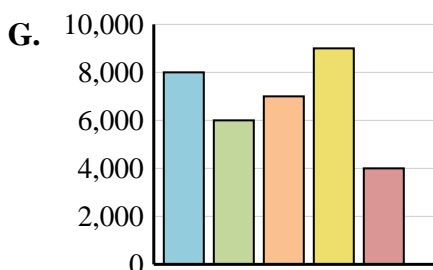
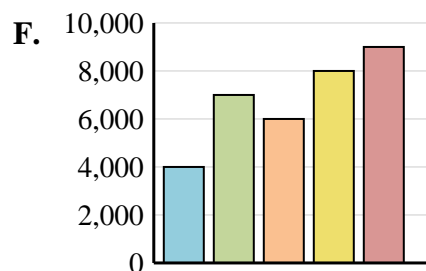
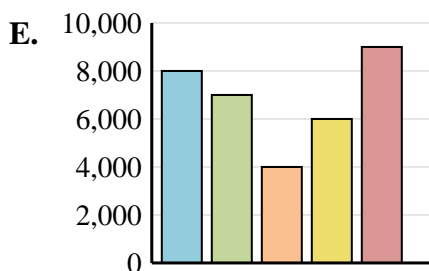
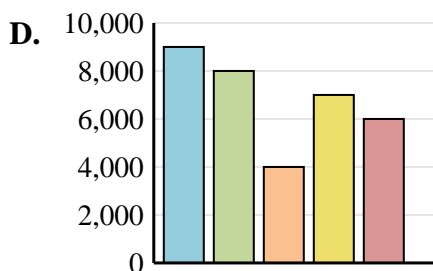
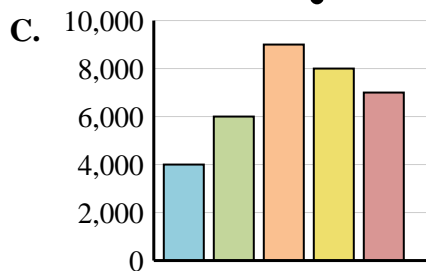
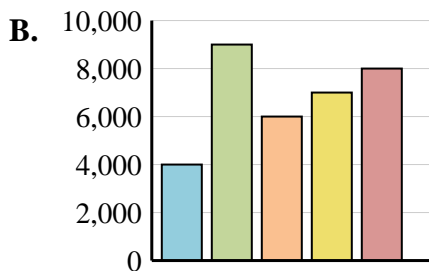
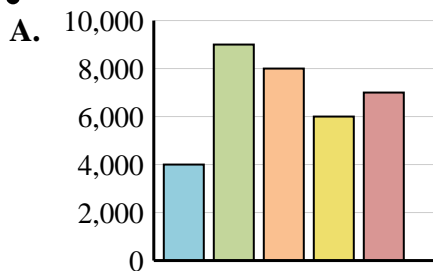
5)

Gente
8,000
6,000
7,000
9,000
4,000

6)

Gente
4,000
9,000
6,000
7,000
8,000

1. _____
2. _____
3. _____
4. _____
5. _____
6. _____





Determina cual gráfica pertenece a la tabla.

Respuestas

1)

	Gente
	6,000
	9,000
	8,000
	4,000
	7,000

2)

	Gente
	9,000
	8,000
	4,000
	7,000
	6,000

3)

	Gente
	4,000
	9,000
	8,000
	6,000
	7,000

4)

	Gente
	8,000
	7,000
	4,000
	6,000
	9,000

5)

	Gente
	8,000
	6,000
	7,000
	9,000
	4,000

6)

	Gente
	4,000
	9,000
	6,000
	7,000
	8,000

- 1. **H**
- 2. **D**
- 3. **A**
- 4. **E**
- 5. **G**
- 6. **B**

