



Determina cual gráfica pertenece a la tabla.

Respuestas

1)

Gente	
	9,000
	7,000
	5,000
	2,000
	1,000

2)

Gente	
	7,000
	1,000
	9,000
	5,000
	2,000

3)

Gente	
	9,000
	2,000
	7,000
	5,000
	1,000

4)

Gente	
	9,000
	7,000
	5,000
	1,000
	2,000

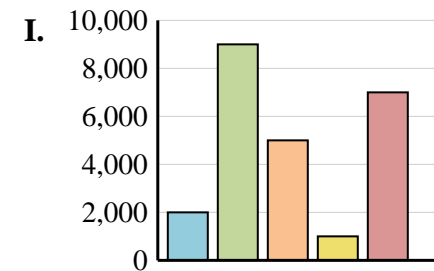
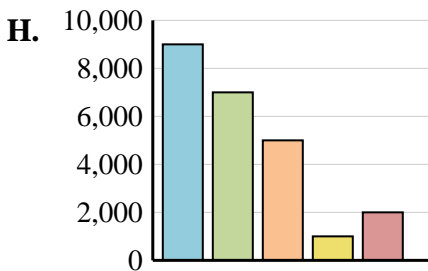
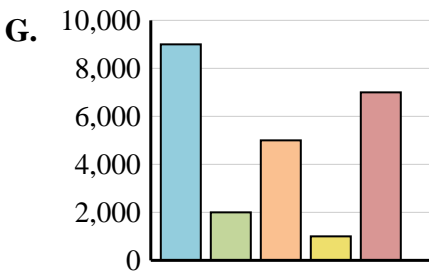
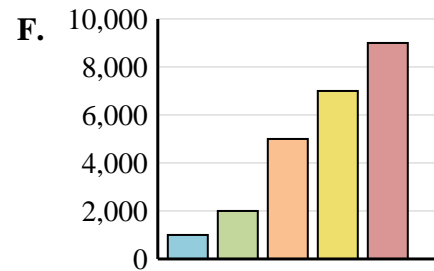
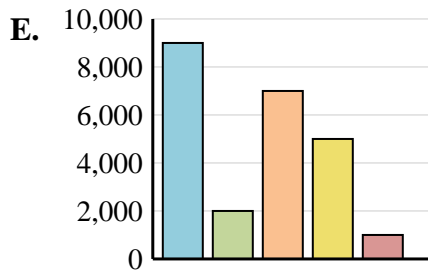
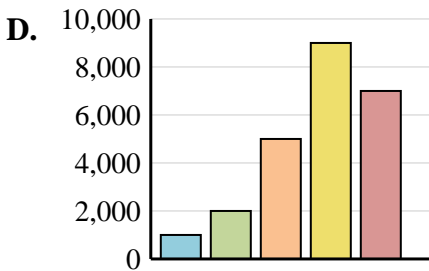
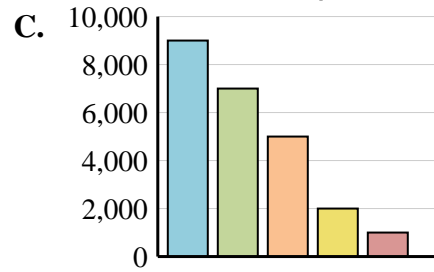
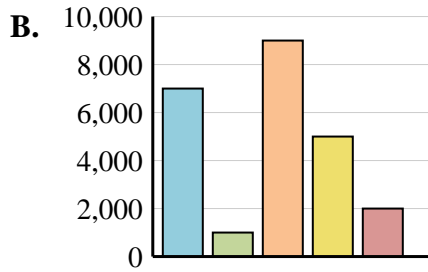
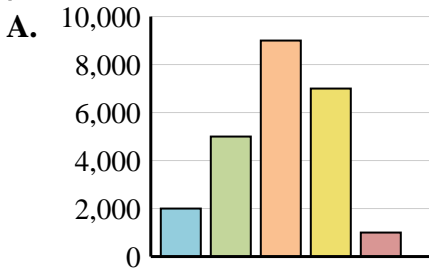
5)

Gente	
	9,000
	2,000
	5,000
	1,000
	7,000

6)

Gente	
	2,000
	9,000
	5,000
	1,000
	7,000

1. _____
2. _____
3. _____
4. _____
5. _____
6. _____





Determina cual gráfica pertenece a la tabla.

Respuestas

1)

Gente	
	9,000
	7,000
	5,000
	2,000
	1,000

2)

Gente	
	7,000
	1,000
	9,000
	5,000
	2,000

3)

Gente	
	9,000
	2,000
	7,000
	5,000
	1,000

4)

Gente	
	9,000
	7,000
	5,000
	1,000
	2,000

5)

Gente	
	9,000
	2,000
	5,000
	1,000
	7,000

6)

Gente	
	2,000
	9,000
	5,000
	1,000
	7,000

- 1. **C**
- 2. **B**
- 3. **E**
- 4. **H**
- 5. **G**
- 6. **I**

