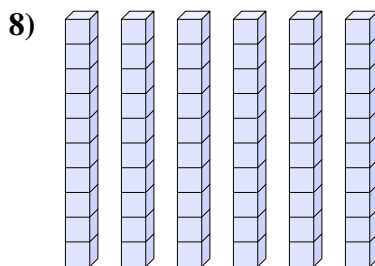
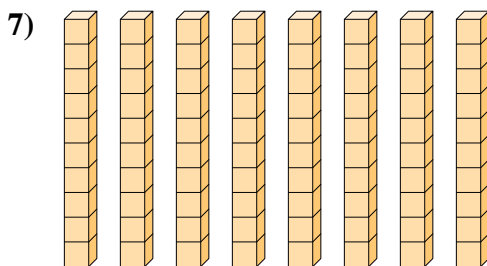
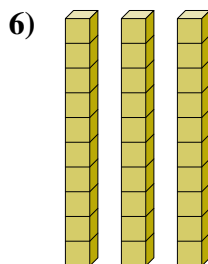
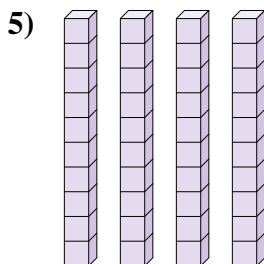
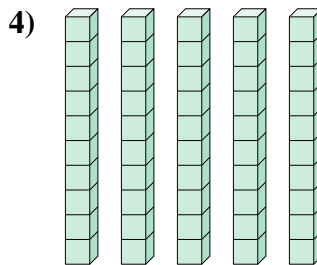
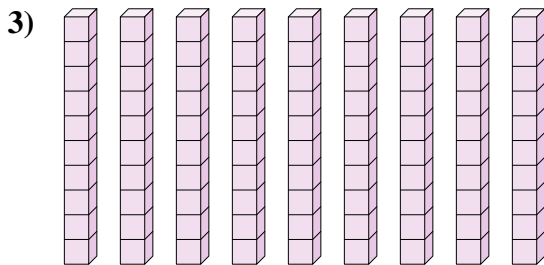

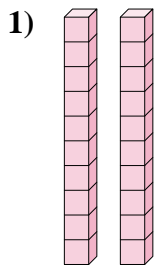




Determina la cantidad de grupos de diez. Luego encuentra el número total de bloques más pequeños.

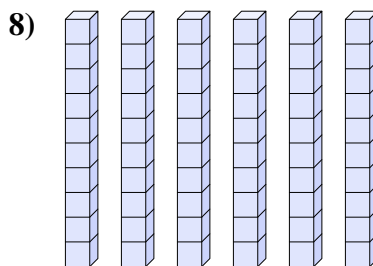
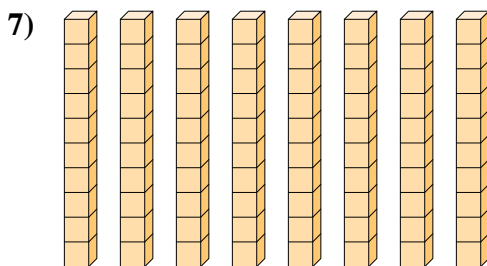
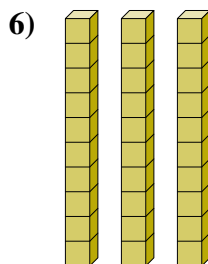
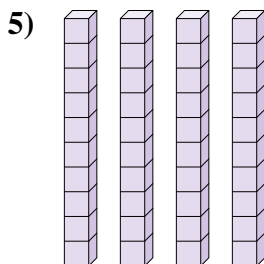
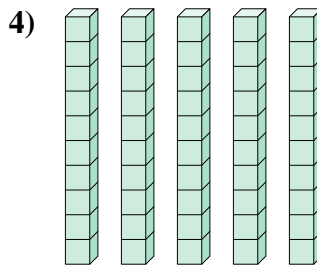
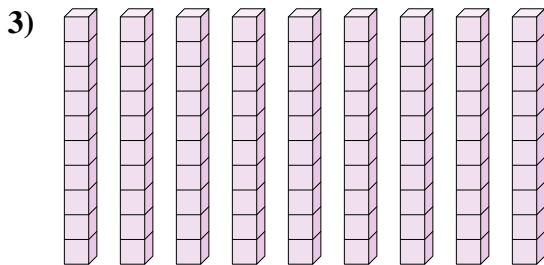

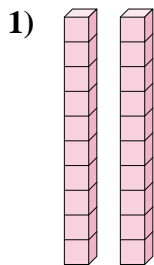
**Respuestas**



- 1. \_\_\_\_\_
- 2. \_\_\_\_\_
- 3. \_\_\_\_\_
- 4. \_\_\_\_\_
- 5. \_\_\_\_\_
- 6. \_\_\_\_\_
- 7. \_\_\_\_\_
- 8. \_\_\_\_\_



Determina la cantidad de grupos de diez. Luego encuentra el número total de bloques más pequeños.



**Respuestas**

- 1.   2       20
- 2.   7       70
- 3.   9       90
- 4.   5       50
- 5.   4       40
- 6.   3       30
- 7.   8       80
- 8.   6       60