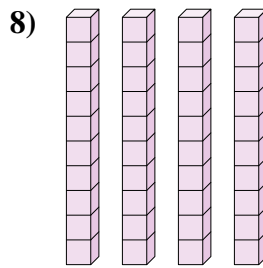
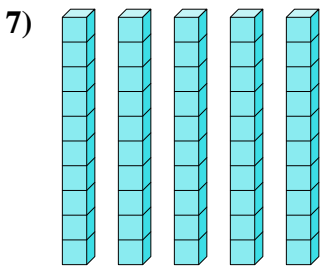
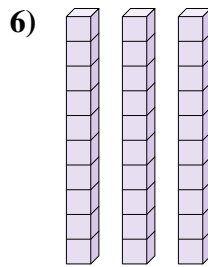
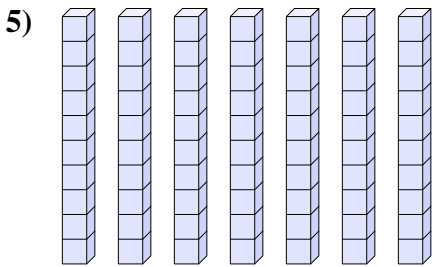
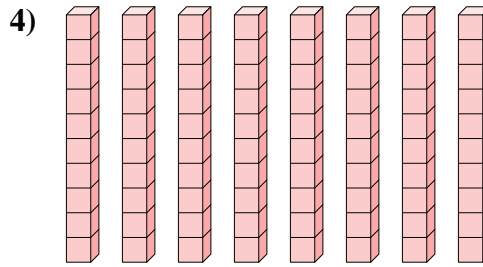
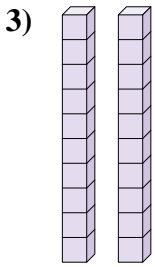
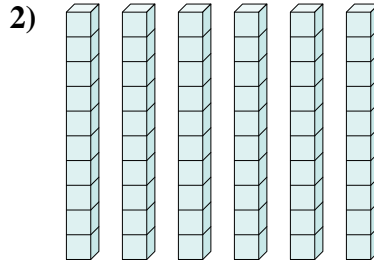
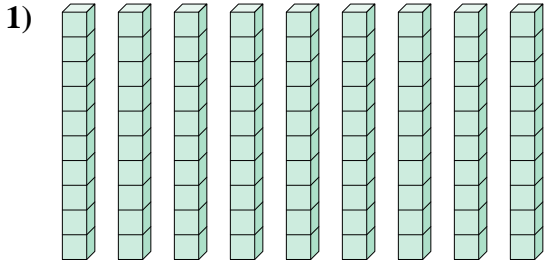




Determina la cantidad de grupos de diez. Luego encuentra el número total de bloques más pequeños.

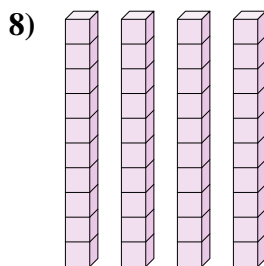
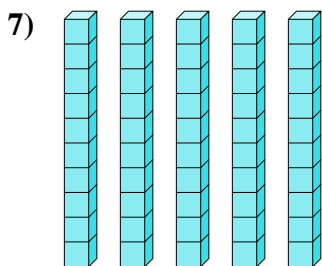
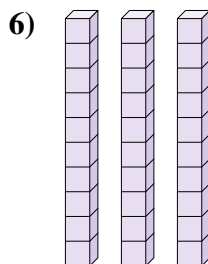
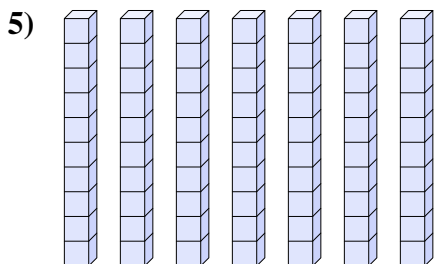
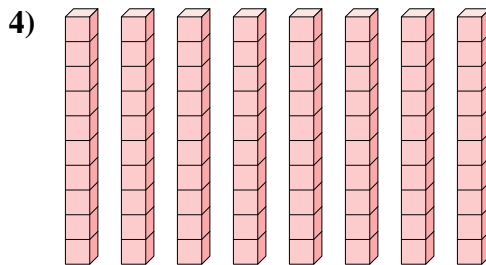
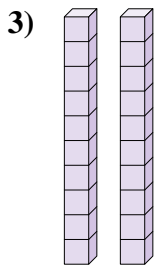
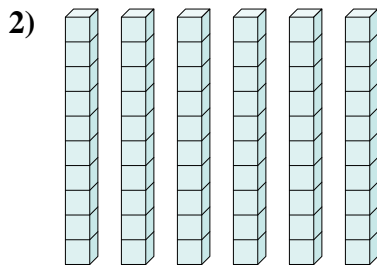
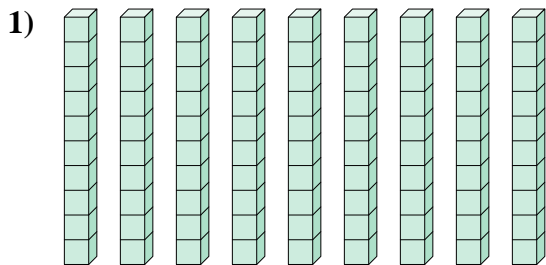
**Respuestas**



- 1. \_\_\_\_\_
- 2. \_\_\_\_\_
- 3. \_\_\_\_\_
- 4. \_\_\_\_\_
- 5. \_\_\_\_\_
- 6. \_\_\_\_\_
- 7. \_\_\_\_\_
- 8. \_\_\_\_\_



Determina la cantidad de grupos de diez. Luego encuentra el número total de bloques más pequeños.



**Respuestas**

- 1.   9     90
- 2.   6     60
- 3.   2     20
- 4.   8     80
- 5.   7     70
- 6.   3     30
- 7.   5     50
- 8.   4     40