




Use la recta numérica para resolver cada problema.

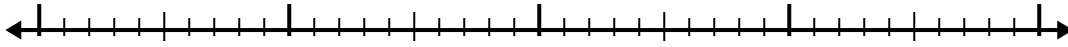
1)  $6.1 + 1.7 =$



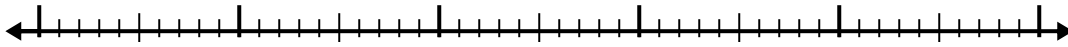
2)  $2.8 + 1.3 =$




3)  $5.6 + 1.3 =$



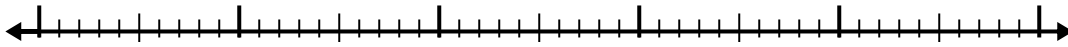
4)  $7.5 + 3.7 =$



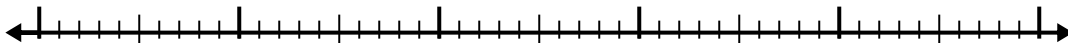
5)  $7.8 + 2.9 =$



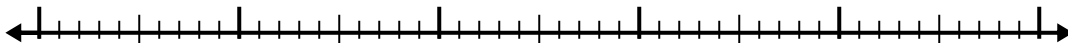
6)  $3.4 + 2.5 =$



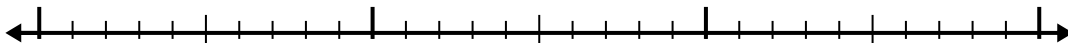
7)  $6.7 + 2.7 =$



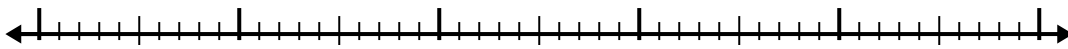
8)  $2.1 + 3.3 =$



9)  $1 + 1.7 =$



10)  $3 + 3.1 =$



**Respuestas**

1. \_\_\_\_\_

2. \_\_\_\_\_

3. \_\_\_\_\_

4. \_\_\_\_\_

5. \_\_\_\_\_

6. \_\_\_\_\_

7. \_\_\_\_\_

8. \_\_\_\_\_

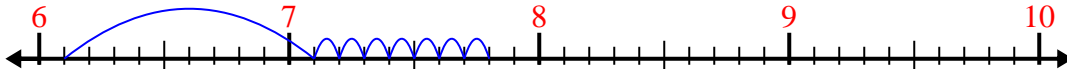
9. \_\_\_\_\_

10. \_\_\_\_\_

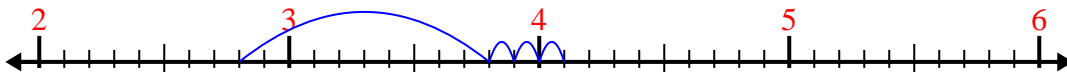


Use la recta numérica para resolver cada problema.

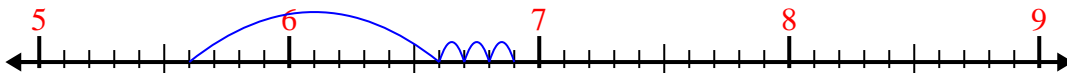
1)  $6.1 + 1.7 =$



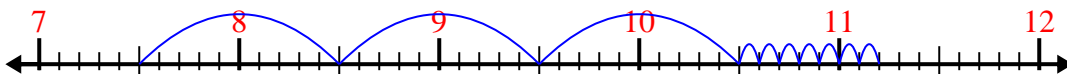
2)  $2.8 + 1.3 =$



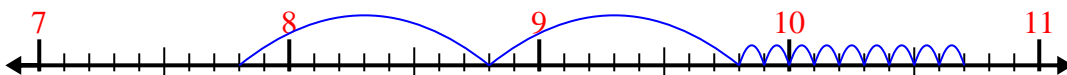
3)  $5.6 + 1.3 =$



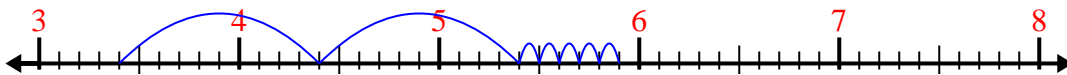
4)  $7.5 + 3.7 =$



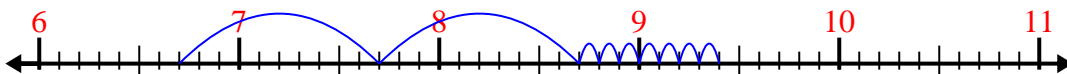
5)  $7.8 + 2.9 =$



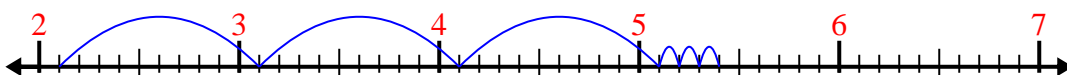
6)  $3.4 + 2.5 =$



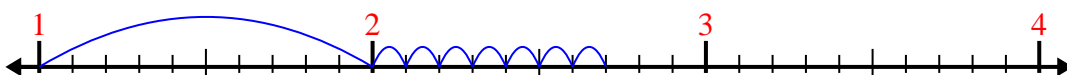
7)  $6.7 + 2.7 =$




8)  $2.1 + 3.3 =$



9)  $1 + 1.7 =$



10)  $3 + 3.1 =$



**Respuestas**

1. 7.8
2. 4.1
3. 6.9
4. 11.2
5. 10.7
6. 5.9
7. 9.4
8. 5.4
9. 2.7
10. 6.1