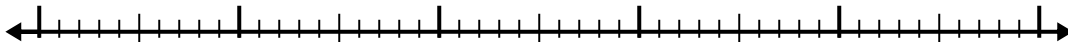


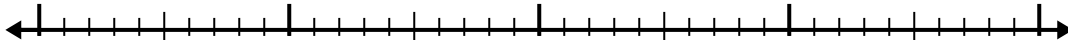


Use la recta numérica para resolver cada problema.

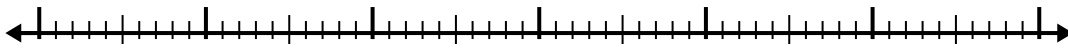
1) $3.4 + 2.9 =$



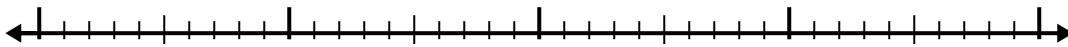
2) $2.1 + 1.7 =$



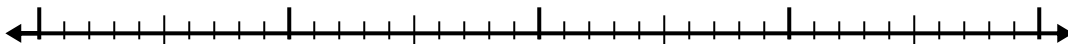
3) $8.7 + 3.3 =$



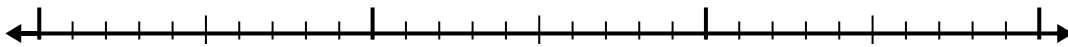
4) $1.6 + 1.8 =$



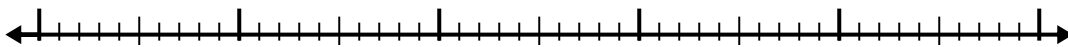
5) $5.5 + 1.3 =$




6) $5.7 + 1.5 =$



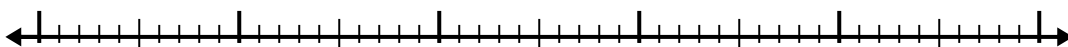
7) $7.2 + 2.6 =$



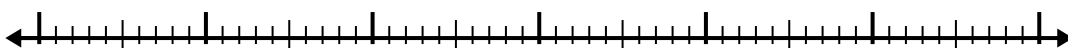
8) $2.3 + 1.1 =$



9) $4.8 + 2.1 =$



10) $2.6 + 3.4 =$



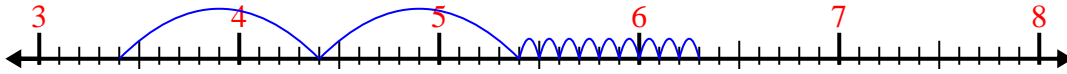
Respuestas

- 1. _____
- 2. _____
- 3. _____
- 4. _____
- 5. _____
- 6. _____
- 7. _____
- 8. _____
- 9. _____
- 10. _____



Use la recta numérica para resolver cada problema.

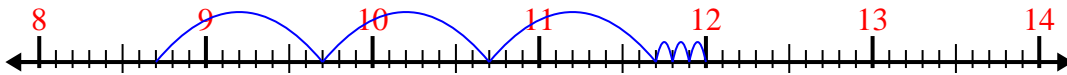
1) $3.4 + 2.9 =$



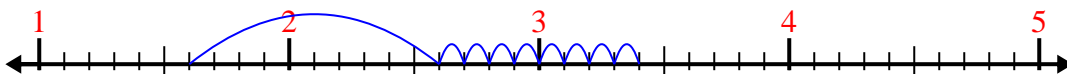
2) $2.1 + 1.7 =$



3) $8.7 + 3.3 =$




4) $1.6 + 1.8 =$



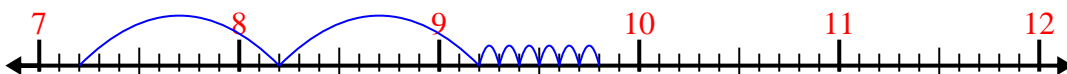
5) $5.5 + 1.3 =$




6) $5.7 + 1.5 =$



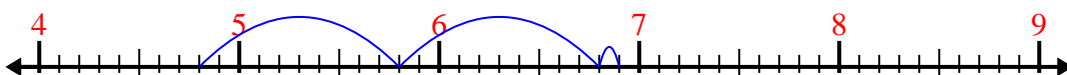
7) $7.2 + 2.6 =$



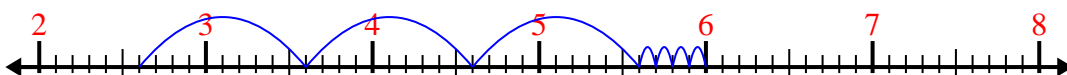
8) $2.3 + 1.1 =$



9) $4.8 + 2.1 =$



10) $2.6 + 3.4 =$



Respuestas

1. 6.3

2. 3.8

3. 12.0

4. 3.4

5. 6.8

6. 7.2

7. 9.8

8. 3.4

9. 6.9

10. 6.0