





Usa el modelo visual para resolver cada problema.


1)  $0.2 \times 0.8 =$




2)  $0.4 \times 0.3 =$




3)  $0.7 \times 0.4 =$



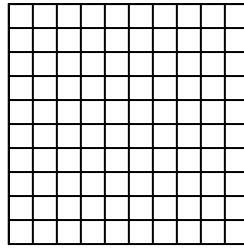
4)  $0.1 \times 0.9 =$




5)  $0.5 \times 0.4 =$




6)  $0.4 \times 0.8 =$




7)  $0.1 \times 0.7 =$




8)  $0.7 \times 0.6 =$




9)  $0.3 \times 0.1 =$




10)  $0.3 \times 0.9 =$




11)  $0.3 \times 0.2 =$



12)  $0.3 \times 0.7 =$




13)  $0.8 \times 0.9 =$



14)  $0.6 \times 0.6 =$



15)  $0.7 \times 0.3 =$



**Respuestas**

1. \_\_\_\_\_
2. \_\_\_\_\_
3. \_\_\_\_\_
4. \_\_\_\_\_
5. \_\_\_\_\_
6. \_\_\_\_\_
7. \_\_\_\_\_
8. \_\_\_\_\_
9. \_\_\_\_\_
10. \_\_\_\_\_
11. \_\_\_\_\_
12. \_\_\_\_\_
13. \_\_\_\_\_
14. \_\_\_\_\_
15. \_\_\_\_\_

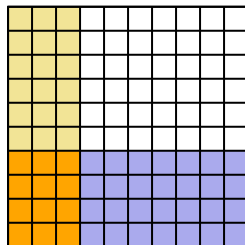


Usa el modelo visual para resolver cada problema.

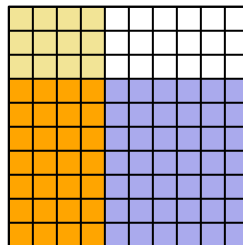
1)  $0.2 \times 0.8 =$



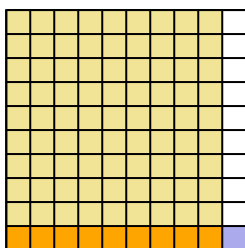
2)  $0.4 \times 0.3 =$



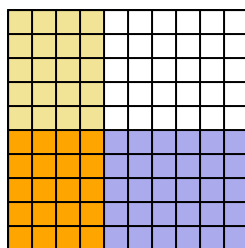
3)  $0.7 \times 0.4 =$



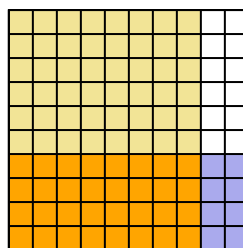
4)  $0.1 \times 0.9 =$



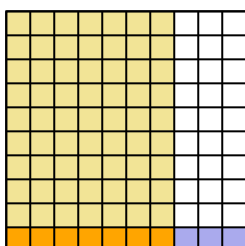
5)  $0.5 \times 0.4 =$



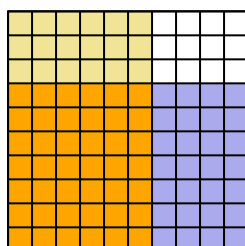
6)  $0.4 \times 0.8 =$



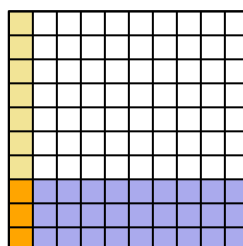
7)  $0.1 \times 0.7 =$



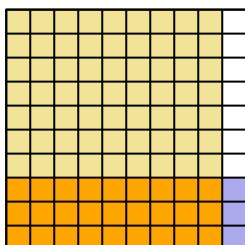
8)  $0.7 \times 0.6 =$



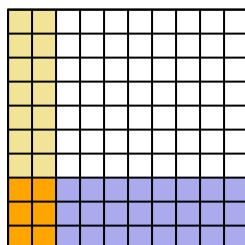
9)  $0.3 \times 0.1 =$



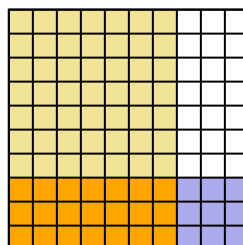
10)  $0.3 \times 0.9 =$



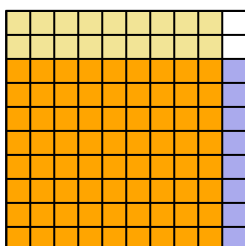
11)  $0.3 \times 0.2 =$



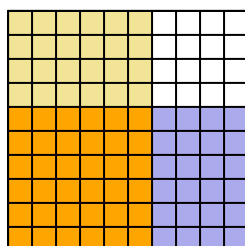
12)  $0.3 \times 0.7 =$



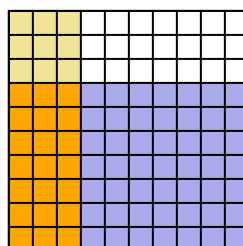
13)  $0.8 \times 0.9 =$



14)  $0.6 \times 0.6 =$



15)  $0.7 \times 0.3 =$



**Respuestas**

1.  $\frac{16}{100} = 0.16$

2.  $\frac{12}{100} = 0.12$

3.  $\frac{28}{100} = 0.28$

4.  $\frac{9}{100} = 0.09$

5.  $\frac{20}{100} = 0.2$

6.  $\frac{32}{100} = 0.32$

7.  $\frac{7}{100} = 0.07$

8.  $\frac{42}{100} = 0.42$

9.  $\frac{3}{100} = 0.03$

10.  $\frac{27}{100} = 0.27$

11.  $\frac{6}{100} = 0.06$

12.  $\frac{21}{100} = 0.21$

13.  $\frac{72}{100} = 0.72$

14.  $\frac{36}{100} = 0.36$

15.  $\frac{21}{100} = 0.21$