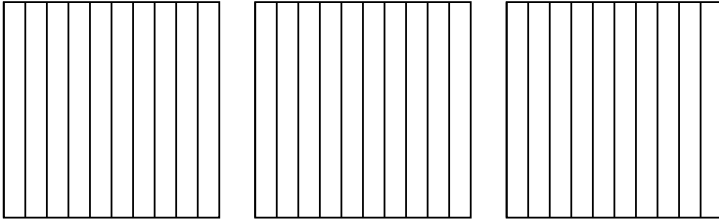


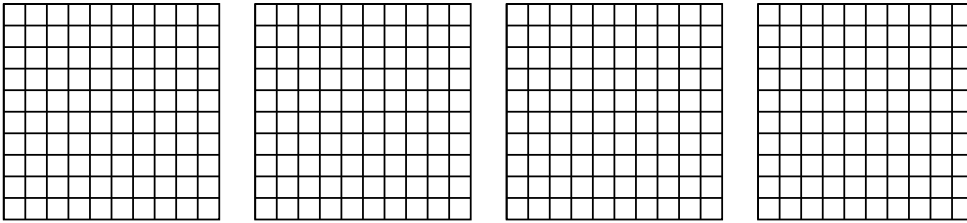


Usa el modelo visual para resolver cada problema.

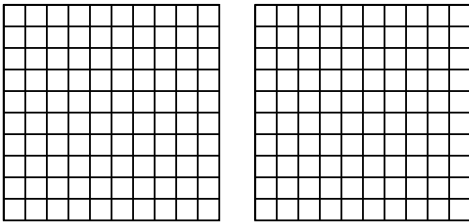
1) $3 \times 0.6 =$



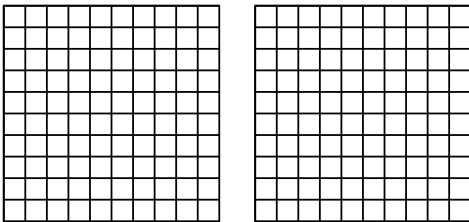
2) $4 \times 0.69 =$



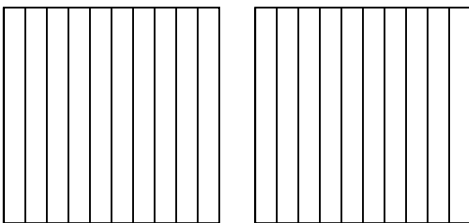
3) $2 \times 0.97 =$



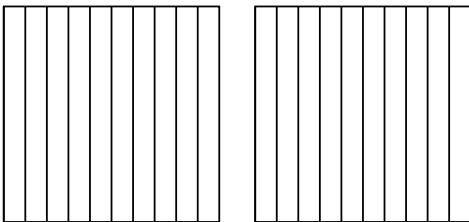
4) $2 \times 0.75 =$



5) $2 \times 0.3 =$



6) $2 \times 0.2 =$



Respuestas

1. _____

2. _____

3. _____

4. _____

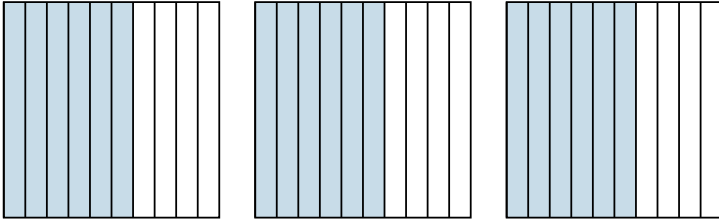
5. _____

6. _____

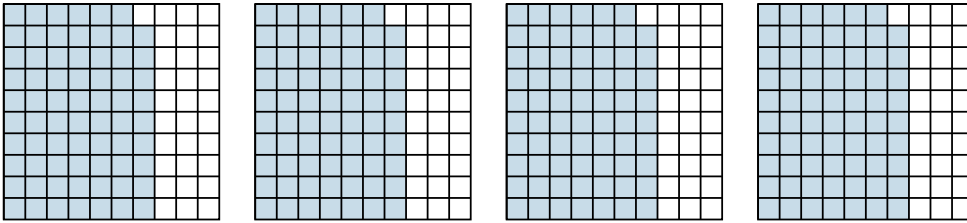


Usa el modelo visual para resolver cada problema.

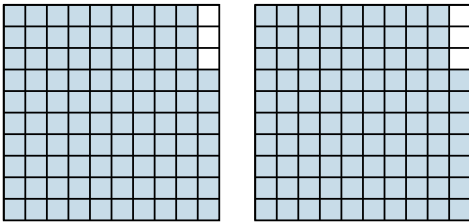
1) $3 \times 0.6 =$



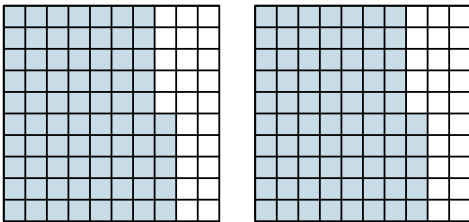
2) $4 \times 0.69 =$



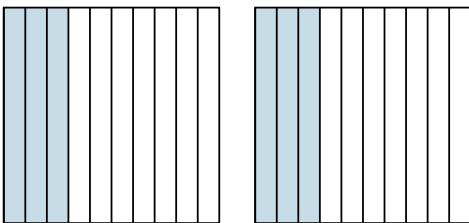
3) $2 \times 0.97 =$



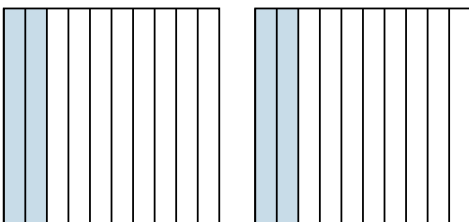
4) $2 \times 0.75 =$



5) $2 \times 0.3 =$



6) $2 \times 0.2 =$



Respuestas

1. $\frac{18}{10} = 1.8$

2. $\frac{276}{100} = 2.76$

3. $\frac{194}{100} = 1.94$

4. $\frac{150}{100} = 1.5$

5. $\frac{6}{10} = 0.6$

6. $\frac{4}{10} = 0.4$