
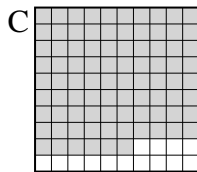

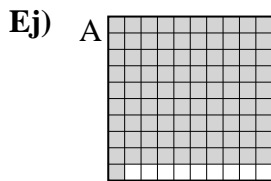




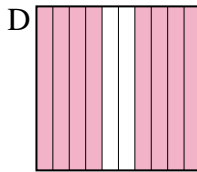
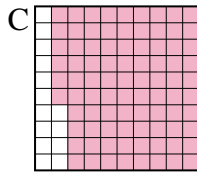
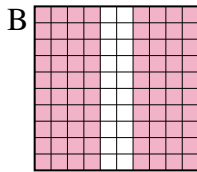
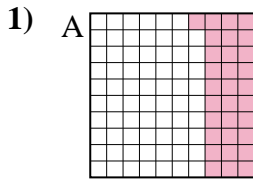
Pon las cajas en orden de la menor a la mayor basado en la cantidad sombreada.

**Respuestas**

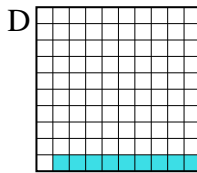
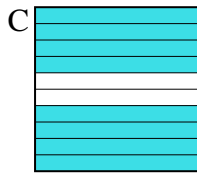
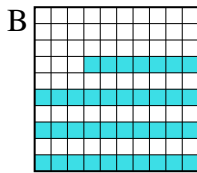
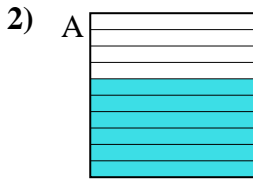


menor 0.2 - B  
0.6 - D  
0.86 - C  
 mayor 0.91 - A

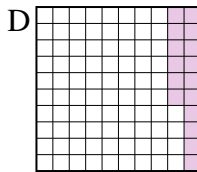
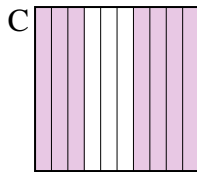
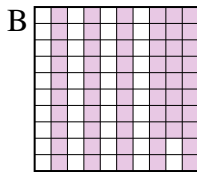
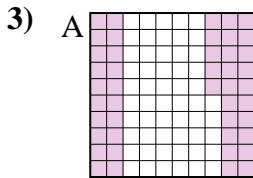
Ej. **B,D,C,A**



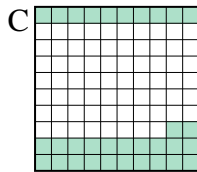
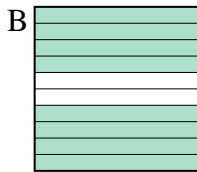
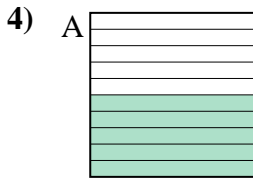
menor \_\_\_\_\_  
 \_\_\_\_\_  
 mayor \_\_\_\_\_



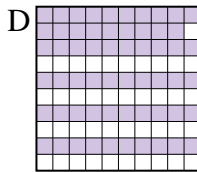
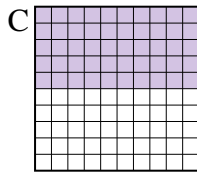
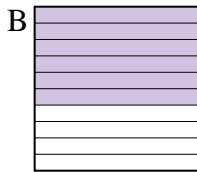
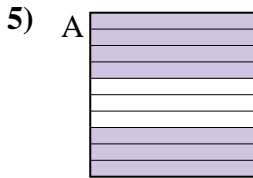
menor \_\_\_\_\_  
 \_\_\_\_\_  
 mayor \_\_\_\_\_




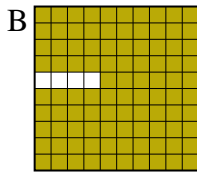
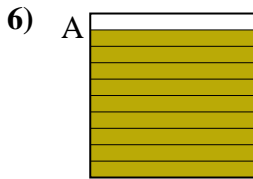
menor \_\_\_\_\_  
 \_\_\_\_\_  
 mayor \_\_\_\_\_



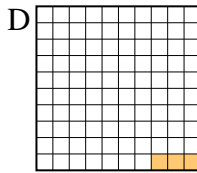
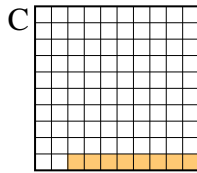
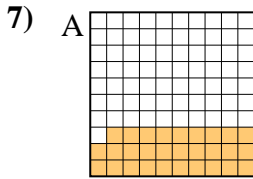
menor \_\_\_\_\_  
 \_\_\_\_\_  
 mayor \_\_\_\_\_



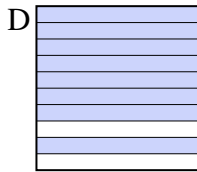
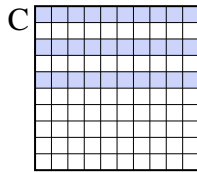
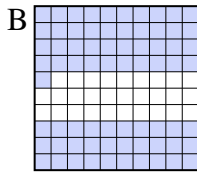
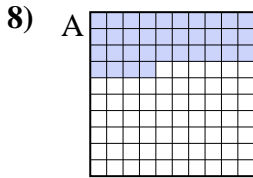
menor \_\_\_\_\_  
 \_\_\_\_\_  
 mayor \_\_\_\_\_



menor \_\_\_\_\_  
 \_\_\_\_\_  
 mayor \_\_\_\_\_



menor \_\_\_\_\_  
 \_\_\_\_\_  
 mayor \_\_\_\_\_



menor \_\_\_\_\_  
 \_\_\_\_\_  
 mayor \_\_\_\_\_

1. \_\_\_\_\_
2. \_\_\_\_\_
3. \_\_\_\_\_
4. \_\_\_\_\_
5. \_\_\_\_\_
6. \_\_\_\_\_
7. \_\_\_\_\_
8. \_\_\_\_\_



Pon las cajas en orden de la menor a la mayor basado en la cantidad sombreada.

Ej) A B C D

menor 0.2 - B  
0.6 - D  
0.86 - C  
mayor 0.91 - A

1) A B C D

menor 0.31 - A  
0.8 - B  
0.8 - B  
mayor 0.86 - C

2) A B C D

menor 0.09 - D  
0.37 - B  
0.6 - A  
mayor 0.8 - C

3) A B C D

menor 0.16 - D  
0.45 - A  
0.58 - B  
mayor 0.7 - C

4) A B C D

menor 0.2 - D  
0.32 - C  
0.5 - A  
mayor 0.8 - B

5) A B C D

menor 0.5 - C  
0.59 - D  
0.6 - B  
mayor 0.7 - A

6) A B C D

menor 0.1 - C  
0.7 - D  
0.9 - A  
mayor 0.96 - B

7) A B C D

menor 0.03 - D  
0.08 - C  
0.1 - B  
mayor 0.29 - A

8) A B C D

menor 0.3 - C  
0.34 - A  
0.71 - B  
mayor 0.8 - D

**Respuestas**

Ej. B,D,C,A

1. A,B,B,C

2. D,B,A,C

3. D,A,B,C

4. D,C,A,B

5. C,D,B,A

6. C,D,A,B

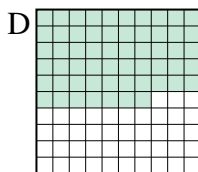
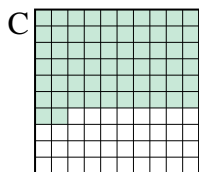
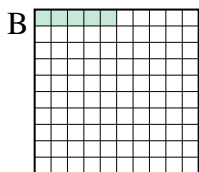
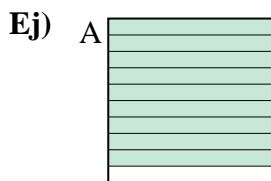
7. D,C,B,A

8. C,A,B,D



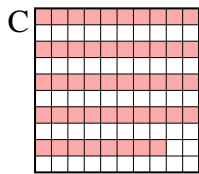
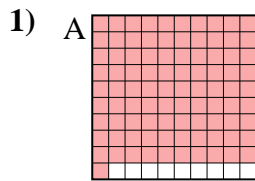
Pon las cajas en orden de la menor a la mayor basado en la cantidad sombreada.

**Respuestas**

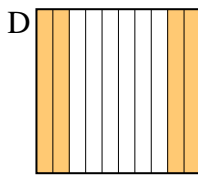
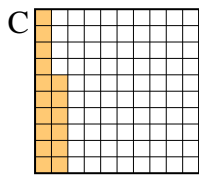
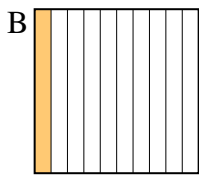
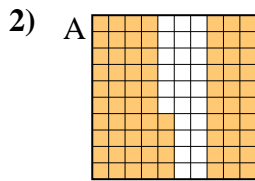


menor 0.05 - B  
0.57 - D  
0.62 - C  
 mayor 0.9 - A

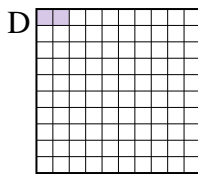
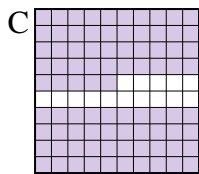

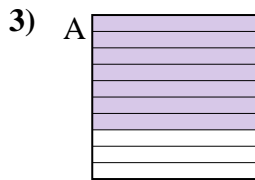
Ej. **B,D,C,A**



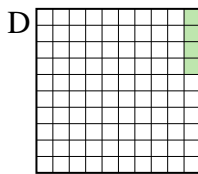
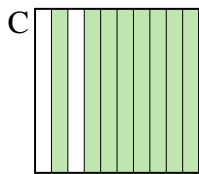
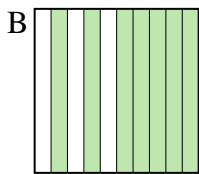
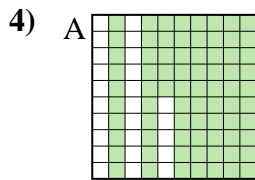
menor \_\_\_\_\_  
 mayor \_\_\_\_\_



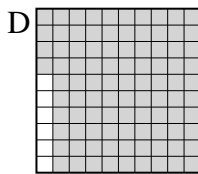
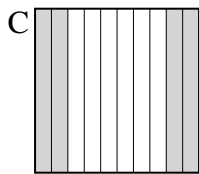
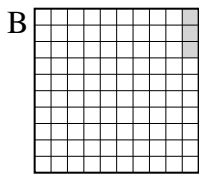
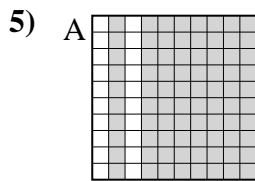
menor \_\_\_\_\_  
 mayor \_\_\_\_\_



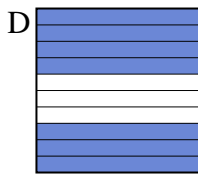

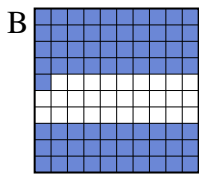
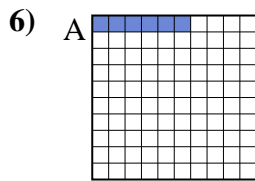
menor \_\_\_\_\_  
 mayor \_\_\_\_\_



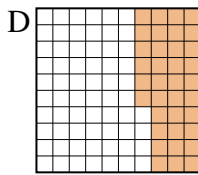
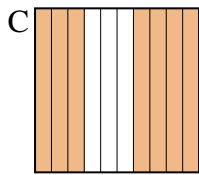
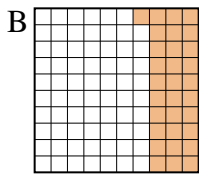
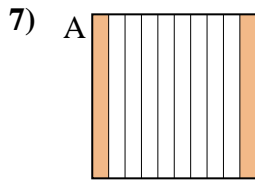
menor \_\_\_\_\_  
 mayor \_\_\_\_\_



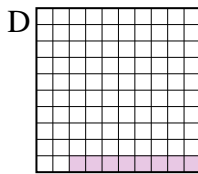
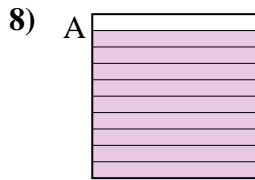
menor \_\_\_\_\_  
 mayor \_\_\_\_\_



menor \_\_\_\_\_  
 mayor \_\_\_\_\_



menor \_\_\_\_\_  
 mayor \_\_\_\_\_



menor \_\_\_\_\_  
 mayor \_\_\_\_\_

1. \_\_\_\_\_
2. \_\_\_\_\_
3. \_\_\_\_\_
4. \_\_\_\_\_
5. \_\_\_\_\_
6. \_\_\_\_\_
7. \_\_\_\_\_
8. \_\_\_\_\_



Pon las cajas en orden de la menor a la mayor basado en la cantidad sombreada.

Ej)	A	B	C	D	menor <u>0.05 - B</u> <u>0.57 - D</u> <u>0.62 - C</u> mayor <u>0.9 - A</u>
1)	A	B	C	D	menor <u>0.48 - C</u> <u>0.5 - B</u> <u>0.6 - D</u> mayor <u>0.91 - A</u>
2)	A	B	C	D	menor <u>0.1 - B</u> <u>0.16 - C</u> <u>0.4 - D</u> mayor <u>0.74 - A</u>
3)	A	B	C	D	menor <u>0.02 - D</u> <u>0.1 - B</u> <u>0.7 - A</u> mayor <u>0.85 - C</u>
4)	A	B	C	D	menor <u>0.04 - D</u> <u>0.7 - B</u> <u>0.75 - A</u> mayor <u>0.8 - C</u>
5)	A	B	C	D	menor <u>0.03 - B</u> <u>0.4 - C</u> <u>0.8 - A</u> mayor <u>0.94 - D</u>
6)	A	B	C	D	menor <u>0.06 - A</u> <u>0.6 - C</u> <u>0.7 - D</u> mayor <u>0.71 - B</u>
7)	A	B	C	D	menor <u>0.2 - A</u> <u>0.31 - B</u> <u>0.36 - D</u> mayor <u>0.7 - C</u>
8)	A	B	C	D	menor <u>0.08 - D</u> <u>0.3 - C</u> <u>0.4 - B</u> mayor <u>0.9 - A</u>





**Respuestas**

- Ej. B,D,C,A
1. C,B,D,A
2. B,C,D,A
3. D,B,A,C
4. D,B,A,C
5. B,C,A,D
6. A,C,D,B
7. A,B,D,C
8. D,C,B,A



Pon las cajas en orden de la menor a la mayor basado en la cantidad sombreada.


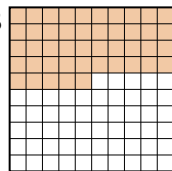

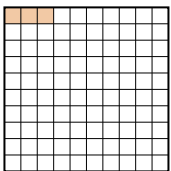
**Respuestas**

Ej) A  B  C  D 

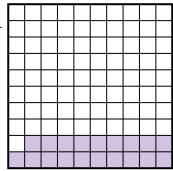


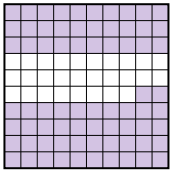
menor 0.05 - B  
0.09 - C  
0.5 - A  
mayor 0.6 - D

Ej. **B,C,A,D**

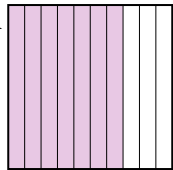
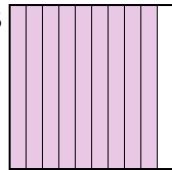
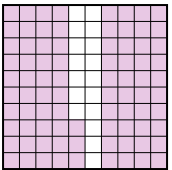
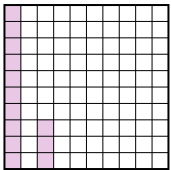
1. \_\_\_\_\_
2. \_\_\_\_\_
3. \_\_\_\_\_
4. \_\_\_\_\_
5. \_\_\_\_\_
6. \_\_\_\_\_
7. \_\_\_\_\_
8. \_\_\_\_\_

1) A  B  C  D 

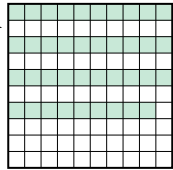

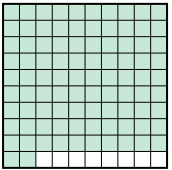
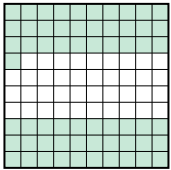
menor \_\_\_\_\_  
\_\_\_\_\_  
\_\_\_\_\_  
mayor \_\_\_\_\_

2) A  B  C  D 

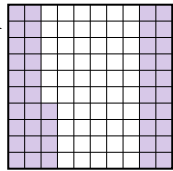
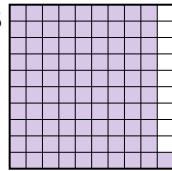
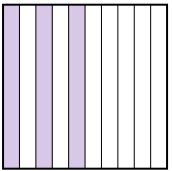
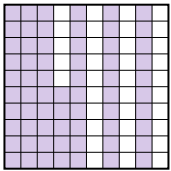
menor \_\_\_\_\_  
\_\_\_\_\_  
\_\_\_\_\_  
mayor \_\_\_\_\_

3) A  B  C  D 

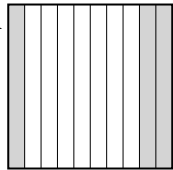
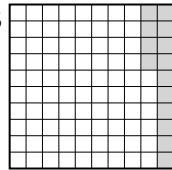
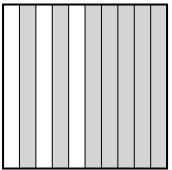

menor \_\_\_\_\_  
\_\_\_\_\_  
\_\_\_\_\_  
mayor \_\_\_\_\_

4) A  B  C  D 

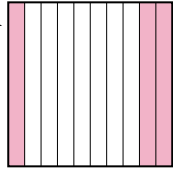
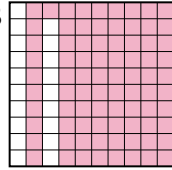
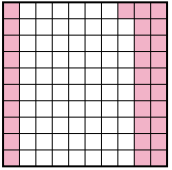
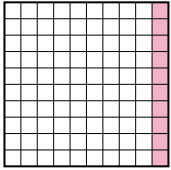
menor \_\_\_\_\_  
\_\_\_\_\_  
\_\_\_\_\_  
mayor \_\_\_\_\_

5) A  B  C  D 


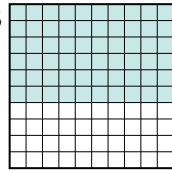


menor \_\_\_\_\_  
\_\_\_\_\_  
\_\_\_\_\_  
mayor \_\_\_\_\_

6) A  B  C  D 

menor \_\_\_\_\_  
\_\_\_\_\_  
\_\_\_\_\_  
mayor \_\_\_\_\_

7) A  B  C  D 

menor \_\_\_\_\_  
\_\_\_\_\_  
\_\_\_\_\_  
mayor \_\_\_\_\_

8) A  B  C  D 

menor \_\_\_\_\_  
\_\_\_\_\_  
\_\_\_\_\_  
mayor \_\_\_\_\_



Pon las cajas en orden de la menor a la mayor basado en la cantidad sombreada.

Ej)	A	B	C	D	menor <u>0.05 - B</u> <u>0.09 - C</u> <u>0.5 - A</u> mayor <u>0.6 - D</u>
1)	A	B	C	D	menor <u>0.03 - D</u> <u>0.1 - C</u> <u>0.4 - A</u> mayor <u>0.45 - B</u>
2)	A	B	C	D	menor <u>0.01 - C</u> <u>0.19 - A</u> <u>0.72 - D</u> mayor <u>0.8 - B</u>
3)	A	B	C	D	menor <u>0.13 - D</u> <u>0.7 - A</u> <u>0.83 - C</u> mayor <u>0.9 - B</u>
4)	A	B	C	D	menor <u>0.39 - A</u> <u>0.61 - D</u> <u>0.8 - B</u> mayor <u>0.92 - C</u>
5)	A	B	C	D	menor <u>0.3 - C</u> <u>0.44 - A</u> <u>0.65 - D</u> mayor <u>0.91 - B</u>
6)	A	B	C	D	menor <u>0.03 - D</u> <u>0.14 - B</u> <u>0.3 - A</u> mayor <u>0.7 - C</u>
7)	A	B	C	D	menor <u>0.1 - D</u> <u>0.3 - A</u> <u>0.31 - C</u> mayor <u>0.81 - B</u>
8)	A	B	C	D	menor <u>0.1 - D</u> <u>0.6 - B</u> <u>0.7 - A</u> mayor <u>0.9 - C</u>

**Respuestas**

- Ej. B,C,A,D
1. D,C,A,B
2. C,A,D,B
3. D,A,C,B
4. A,D,B,C
5. C,A,D,B
6. D,B,A,C
7. D,A,C,B
8. D,B,A,C



Pon las cajas en orden de la menor a la mayor basado en la cantidad sombreada.

**Respuestas**

Ej) A B C D menor 0.2 - A  
0.56 - B  
0.93 - D  
mayor 0.99 - C

Ej. **A,B,D,C**

1. \_\_\_\_\_

2. \_\_\_\_\_

3. \_\_\_\_\_

4. \_\_\_\_\_

5. \_\_\_\_\_

6. \_\_\_\_\_

7. \_\_\_\_\_

8. \_\_\_\_\_

1) A B C D menor \_\_\_\_\_  
\_\_\_\_\_   
mayor \_\_\_\_\_

2) A B C D menor \_\_\_\_\_  
\_\_\_\_\_   
mayor \_\_\_\_\_

3) A B C D menor \_\_\_\_\_  
\_\_\_\_\_   
mayor \_\_\_\_\_

4) A B C D menor \_\_\_\_\_  
\_\_\_\_\_   
mayor \_\_\_\_\_

5) A B C D menor \_\_\_\_\_  
\_\_\_\_\_   
mayor \_\_\_\_\_

6) A B C D menor \_\_\_\_\_  
\_\_\_\_\_   
mayor \_\_\_\_\_

7) A B C D menor \_\_\_\_\_  
\_\_\_\_\_   
mayor \_\_\_\_\_

8) A B C D menor \_\_\_\_\_  
\_\_\_\_\_   
mayor \_\_\_\_\_



Pon las cajas en orden de la menor a la mayor basado en la cantidad sombreada.

Ej)	A	B	C	D	menor <u>0.2 - A</u> <u>0.56 - B</u> <u>0.93 - D</u> mayor <u>0.99 - C</u>
1)	A	B	C	D	menor <u>0.13 - B</u> <u>0.3 - A</u> <u>0.4 - C</u> mayor <u>0.68 - D</u>
2)	A	B	C	D	menor <u>0.27 - A</u> <u>0.3 - B</u> <u>0.32 - D</u> mayor <u>0.9 - C</u>
3)	A	B	C	D	menor <u>0.1 - A</u> <u>0.13 - C</u> <u>0.5 - D</u> mayor <u>0.97 - B</u>
4)	A	B	C	D	menor <u>0.19 - B</u> <u>0.77 - D</u> <u>0.8 - A</u> mayor <u>0.96 - C</u>
5)	A	B	C	D	menor <u>0.07 - D</u> <u>0.5 - B</u> <u>0.65 - C</u> mayor <u>0.93 - A</u>
6)	A	B	C	D	menor <u>0.26 - D</u> <u>0.4 - C</u> <u>0.5 - A</u> mayor <u>0.5 - A</u>
7)	A	B	C	D	menor <u>0.15 - B</u> <u>0.2 - C</u> <u>0.62 - D</u> mayor <u>0.8 - A</u>
8)	A	B	C	D	menor <u>0.38 - A</u> <u>0.4 - C</u> <u>0.69 - D</u> mayor <u>0.9 - B</u>

**Respuestas**

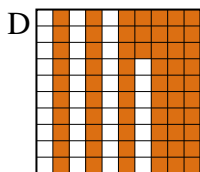
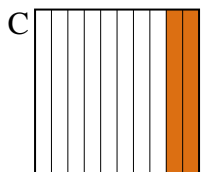
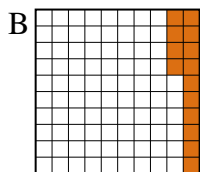
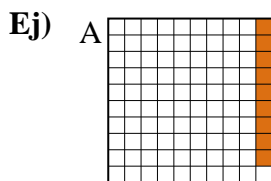
- Ej. A,B,D,C
1. B,A,C,D
2. A,B,D,C
3. A,C,D,B
4. B,D,A,C
5. D,B,C,A
6. D,C,A,A
7. B,C,D,A
8. A,C,D,B





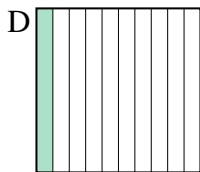
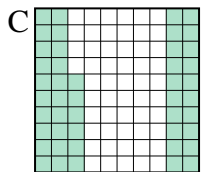
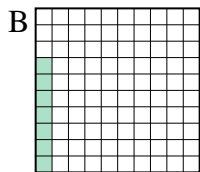
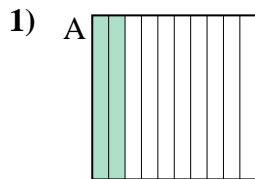
Pon las cajas en orden de la menor a la mayor basado en la cantidad sombreada.

**Respuestas**

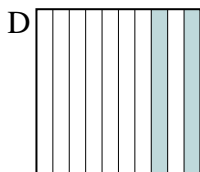
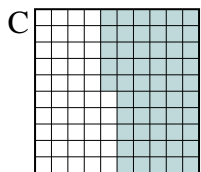
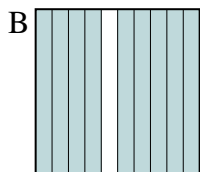
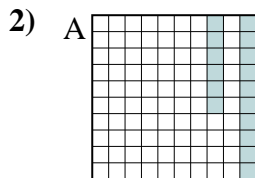


menor 0.09 - A  
0.14 - B  
0.2 - C  
 mayor 0.63 - D

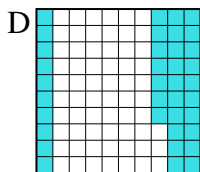
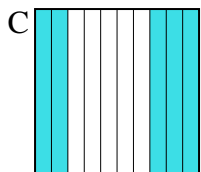
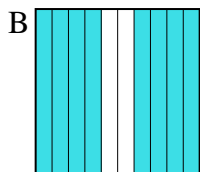
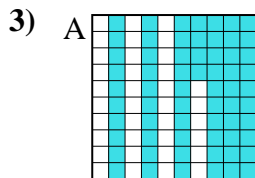
Ej. **A,B,C,D**



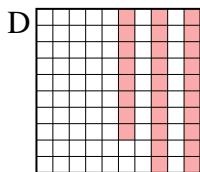
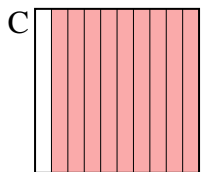
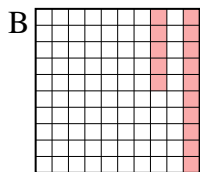
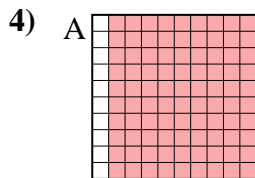
menor \_\_\_\_\_  
 mayor \_\_\_\_\_



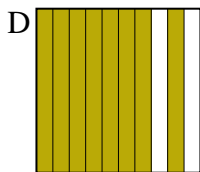
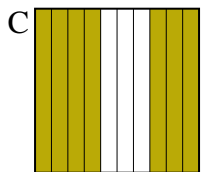
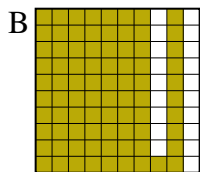
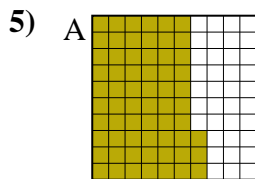
menor \_\_\_\_\_  
 mayor \_\_\_\_\_




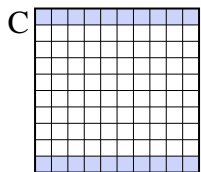

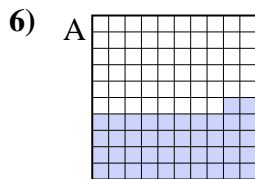
menor \_\_\_\_\_  
 mayor \_\_\_\_\_




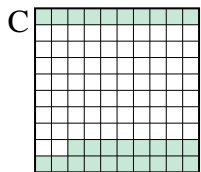

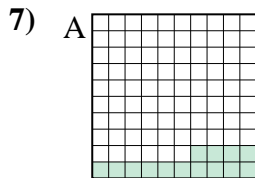
menor \_\_\_\_\_  
 mayor \_\_\_\_\_



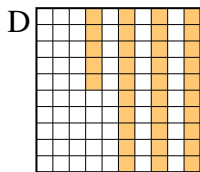
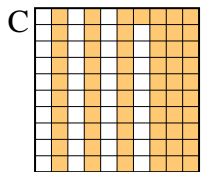
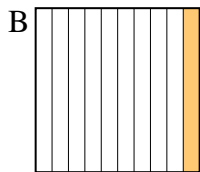
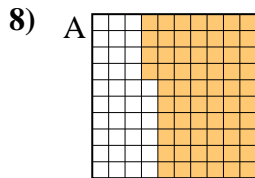
menor \_\_\_\_\_  
 mayor \_\_\_\_\_



menor \_\_\_\_\_  
 mayor \_\_\_\_\_



menor \_\_\_\_\_  
 mayor \_\_\_\_\_



menor \_\_\_\_\_  
 mayor \_\_\_\_\_

1. \_\_\_\_\_
2. \_\_\_\_\_
3. \_\_\_\_\_
4. \_\_\_\_\_
5. \_\_\_\_\_
6. \_\_\_\_\_
7. \_\_\_\_\_
8. \_\_\_\_\_



Pon las cajas en orden de la menor a la mayor basado en la cantidad sombreada.

Ej)	A	B	C	D	menor <u>0.09 - A</u> <u>0.14 - B</u> <u>0.2 - C</u> mayor <u>0.63 - D</u>
1)	A	B	C	D	menor <u>0.07 - B</u> <u>0.1 - D</u> <u>0.2 - A</u> mayor <u>0.46 - C</u>
2)	A	B	C	D	menor <u>0.16 - A</u> <u>0.2 - D</u> <u>0.55 - C</u> mayor <u>0.9 - B</u>
3)	A	B	C	D	menor <u>0.37 - D</u> <u>0.5 - C</u> <u>0.64 - A</u> mayor <u>0.8 - B</u>
4)	A	B	C	D	menor <u>0.15 - B</u> <u>0.28 - D</u> <u>0.9 - A</u> mayor <u>0.9 - A</u>
5)	A	B	C	D	menor <u>0.63 - A</u> <u>0.7 - C</u> <u>0.8 - D</u> mayor <u>0.81 - B</u>
6)	A	B	C	D	menor <u>0.1 - B</u> <u>0.2 - C</u> <u>0.42 - A</u> mayor <u>0.9 - D</u>
7)	A	B	C	D	menor <u>0.14 - A</u> <u>0.2 - B</u> <u>0.28 - C</u> mayor <u>0.8 - D</u>
8)	A	B	C	D	menor <u>0.1 - B</u> <u>0.35 - D</u> <u>0.61 - C</u> mayor <u>0.64 - A</u>

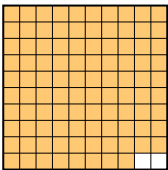
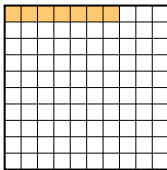

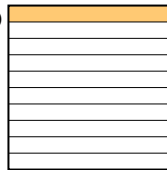
**Respuestas**

- Ej. A,B,C,D
1. B,D,A,C
2. A,D,C,B
3. D,C,A,B
4. B,D,A,A
5. A,C,D,B
6. B,C,A,D
7. A,B,C,D
8. B,D,C,A





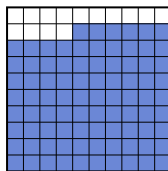
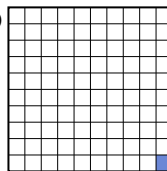
Pon las cajas en orden de la menor a la mayor basado en la cantidad sombreada.

**Respuestas**

Ej) A  B  C  D 

menor 0.07 - B  
0.1 - D  
0.4 - C  
mayor 0.98 - A


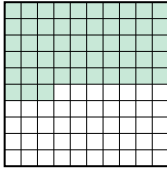

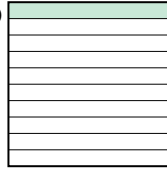
Ej. **B,D,C,A**

1) A  B  C  D 

menor \_\_\_\_\_  
\_\_\_\_\_

mayor \_\_\_\_\_  
\_\_\_\_\_


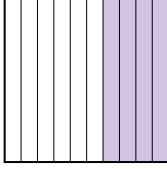
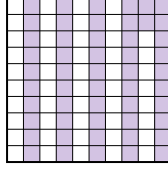
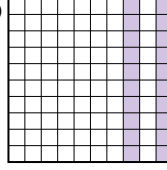
1. \_\_\_\_\_  
2. \_\_\_\_\_

2) A  B  C  D 

menor \_\_\_\_\_  
\_\_\_\_\_

mayor \_\_\_\_\_  
\_\_\_\_\_

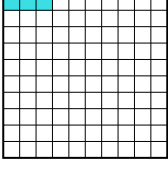
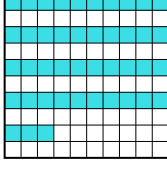


3. \_\_\_\_\_  
4. \_\_\_\_\_

3) A  B  C  D 

menor \_\_\_\_\_  
\_\_\_\_\_

mayor \_\_\_\_\_  
\_\_\_\_\_


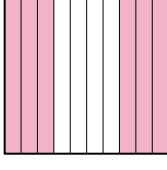

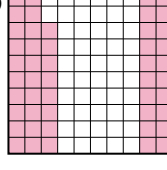
5. \_\_\_\_\_  
6. \_\_\_\_\_

4) A  B  C  D 

menor \_\_\_\_\_  
\_\_\_\_\_


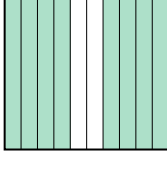
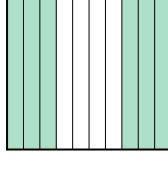

mayor \_\_\_\_\_  
\_\_\_\_\_

7. \_\_\_\_\_  
8. \_\_\_\_\_

5) A  B  C  D 

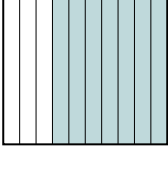
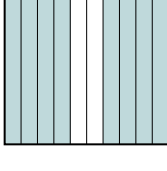

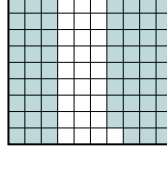
menor \_\_\_\_\_  
\_\_\_\_\_

mayor \_\_\_\_\_  
\_\_\_\_\_

6) A  B  C  D 


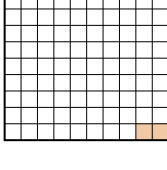
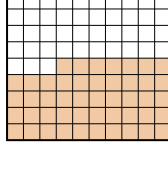
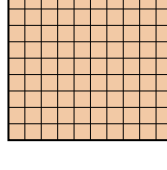
menor \_\_\_\_\_  
\_\_\_\_\_

mayor \_\_\_\_\_  
\_\_\_\_\_

7) A  B  C  D 

menor \_\_\_\_\_  
\_\_\_\_\_

mayor \_\_\_\_\_  
\_\_\_\_\_

8) A  B  C  D 

menor \_\_\_\_\_  
\_\_\_\_\_

mayor \_\_\_\_\_  
\_\_\_\_\_



Pon las cajas en orden de la menor a la mayor basado en la cantidad sombreada.

Ej)	A	B	C	D	menor <u>0.07 - B</u> <u>0.1 - D</u> <u>0.4 - C</u> mayor <u>0.98 - A</u>
1)	A	B	C	D	menor <u>0.01 - D</u> <u>0.3 - A</u> <u>0.86 - C</u> mayor <u>0.9 - B</u>
2)	A	B	C	D	menor <u>0.1 - D</u> <u>0.5 - A</u> <u>0.53 - B</u> mayor <u>0.8 - C</u>
3)	A	B	C	D	menor <u>0.2 - D</u> <u>0.4 - B</u> <u>0.5 - A</u> mayor <u>0.52 - C</u>
4)	A	B	C	D	menor <u>0.03 - A</u> <u>0.2 - C</u> <u>0.43 - B</u> mayor <u>0.9 - D</u>
5)	A	B	C	D	menor <u>0.1 - A</u> <u>0.48 - D</u> <u>0.6 - B</u> mayor <u>0.71 - C</u>
6)	A	B	C	D	menor <u>0.5 - D</u> <u>0.6 - C</u> <u>0.8 - B</u> mayor <u>0.83 - A</u>
7)	A	B	C	D	menor <u>0.69 - D</u> <u>0.7 - A</u> <u>0.8 - B</u> mayor <u>0.9 - C</u>
8)	A	B	C	D	menor <u>0.02 - B</u> <u>0.47 - C</u> <u>0.7 - A</u> mayor <u>0.95 - D</u>

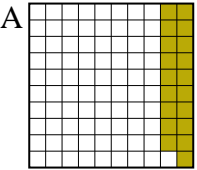
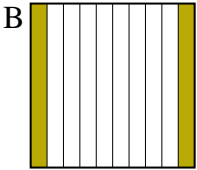
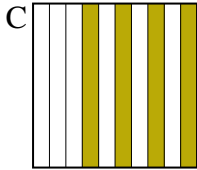
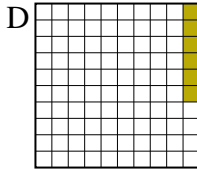
**Respuestas**

- Ej. B,D,C,A
1. D,A,C,B
2. D,A,B,C
3. D,B,A,C
4. A,C,B,D
5. A,D,B,C
6. D,C,B,A
7. D,A,B,C
8. B,C,A,D



Pon las cajas en orden de la menor a la mayor basado en la cantidad sombreada.

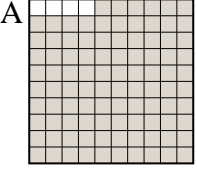

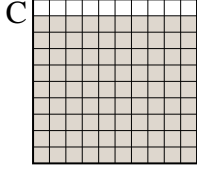

**Respuestas**

Ej) A  B  C  D 

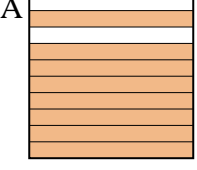
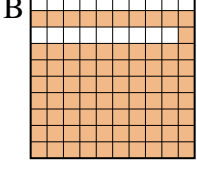

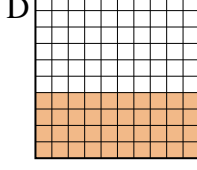
menor 0.06 - D  
0.19 - A  
0.2 - B  
mayor 0.4 - C

Ej. **D,A,B,C**

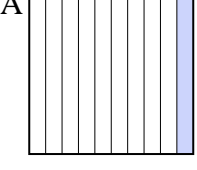
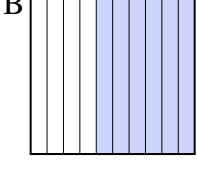
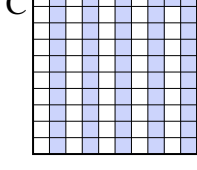
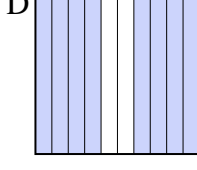
1. \_\_\_\_\_
2. \_\_\_\_\_
3. \_\_\_\_\_
4. \_\_\_\_\_
5. \_\_\_\_\_
6. \_\_\_\_\_
7. \_\_\_\_\_
8. \_\_\_\_\_

1) A  B  C  D 

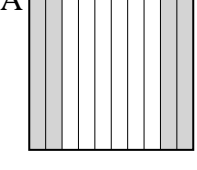
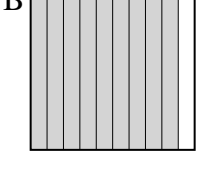

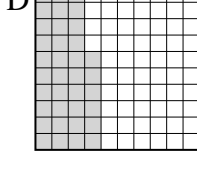
menor \_\_\_\_\_  
\_\_\_\_\_  
\_\_\_\_\_  
mayor \_\_\_\_\_

2) A  B  C  D 

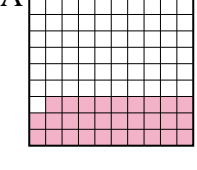


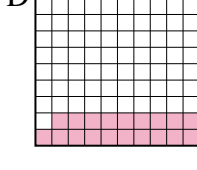
menor \_\_\_\_\_  
\_\_\_\_\_  
\_\_\_\_\_  
mayor \_\_\_\_\_

3) A  B  C  D 

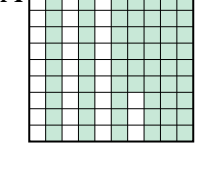
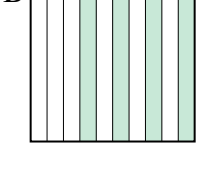
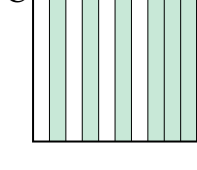
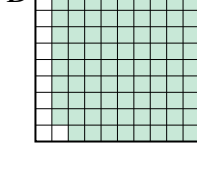
menor \_\_\_\_\_  
\_\_\_\_\_  
\_\_\_\_\_  
mayor \_\_\_\_\_

4) A  B  C  D 


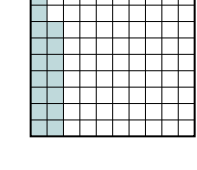

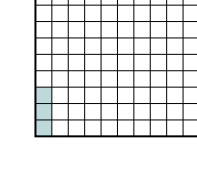
menor \_\_\_\_\_  
\_\_\_\_\_  
\_\_\_\_\_  
mayor \_\_\_\_\_

5) A  B  C  D 



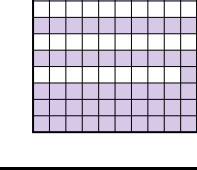

menor \_\_\_\_\_  
\_\_\_\_\_  
\_\_\_\_\_  
mayor \_\_\_\_\_

6) A  B  C  D 

menor \_\_\_\_\_  
\_\_\_\_\_  
\_\_\_\_\_  
mayor \_\_\_\_\_

7) A  B  C  D 

menor \_\_\_\_\_  
\_\_\_\_\_  
\_\_\_\_\_  
mayor \_\_\_\_\_

8) A  B  C  D 

menor \_\_\_\_\_  
\_\_\_\_\_  
\_\_\_\_\_  
mayor \_\_\_\_\_



Pon las cajas en orden de la menor a la mayor basado en la cantidad sombreada.

**Ej)**

A		B		C		D		menor	<u>0.06 - D</u>
								<u>0.19 - A</u>	
								<u>0.2 - B</u>	
							mayor	<u>0.4 - C</u>	

1)	A		B		C		D		menor	<u>0.2 - D</u>
								<u>0.5 - B</u>		
								<u>0.9 - C</u>		
							mayor	<u>0.96 - A</u>		

2)	A		B		C		D		menor	<u>0.1 - C</u>
								<u>0.4 - D</u>		
								<u>0.8 - A</u>		
							mayor	<u>0.81 - B</u>		

3)	A		B		C		D		menor	<u>0.1 - A</u>
								<u>0.51 - C</u>		
								<u>0.6 - B</u>		
							mayor	<u>0.8 - D</u>		

4)	A		B		C		D		menor	<u>0.36 - D</u>
								<u>0.4 - A</u>		
								<u>0.9 - B</u>		
							mayor	<u>0.93 - C</u>		

5)	A		B		C		D		menor	<u>0.19 - D</u>
								<u>0.29 - A</u>		
								<u>0.6 - B</u>		
							mayor	<u>0.8 - C</u>		

6)	A		B		C		D		menor	<u>0.4 - B</u>
								<u>0.6 - C</u>		
								<u>0.67 - A</u>		
							mayor	<u>0.89 - D</u>		

7)	A		B		C		D		menor	<u>0.03 - D</u>
								<u>0.17 - B</u>		
								<u>0.36 - C</u>		
							mayor	<u>0.6 - A</u>		

8)	A		B		C		D		menor	<u>0.2 - A</u>
								<u>0.5 - D</u>		
								<u>0.61 - C</u>		
							mayor	<u>0.92 - B</u>		

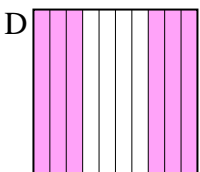
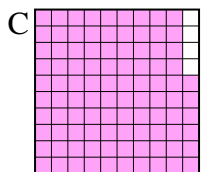
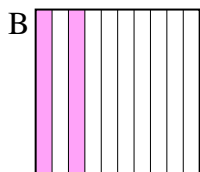
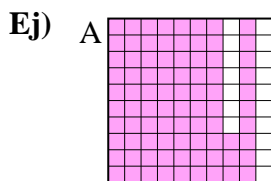
**Respuestas**

- Ej. D,A,B,C
1. D,B,C,A
2. C,D,A,B
3. A,C,B,D
4. D,A,B,C
5. D,A,B,C
6. B,C,A,D
7. D,B,C,A
8. A,D,C,B



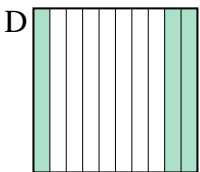
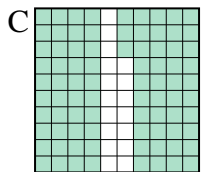
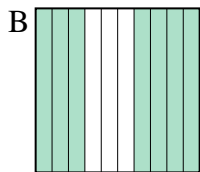
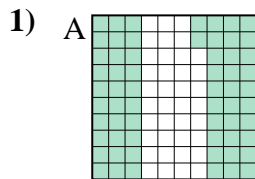
Pon las cajas en orden de la menor a la mayor basado en la cantidad sombreada.

**Respuestas**

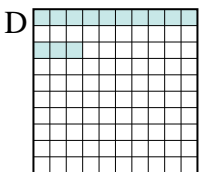


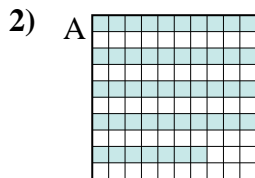


menor 0.2 - B  
0.6 - D  
0.83 - A  
 mayor 0.96 - C

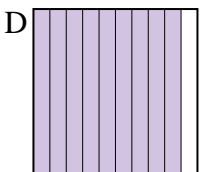
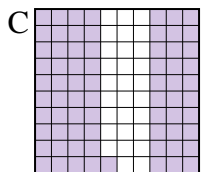
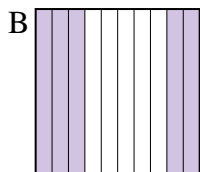
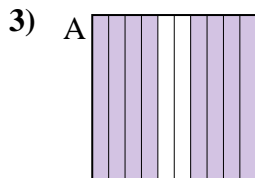
Ej. **B,D,A,C**






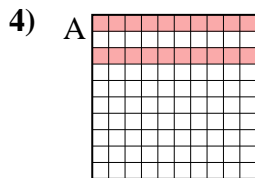
menor \_\_\_\_\_  
 mayor \_\_\_\_\_



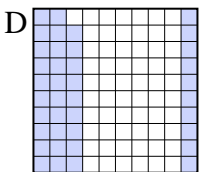
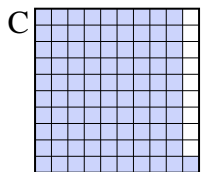
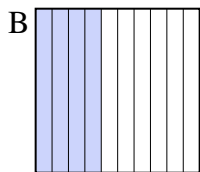
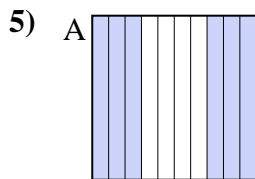
menor \_\_\_\_\_  
 mayor \_\_\_\_\_



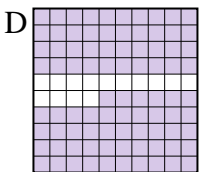
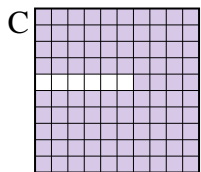

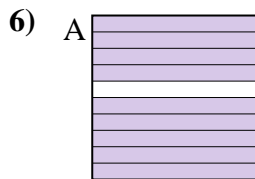
menor \_\_\_\_\_  
 mayor \_\_\_\_\_



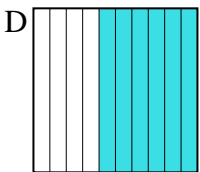
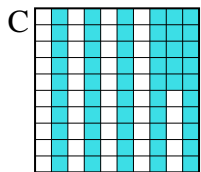
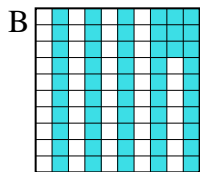
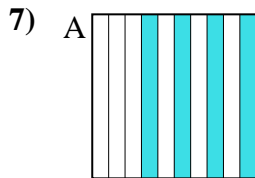
menor \_\_\_\_\_  
 mayor \_\_\_\_\_



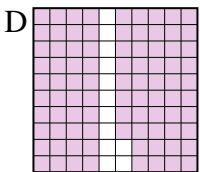
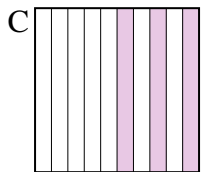
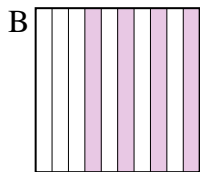
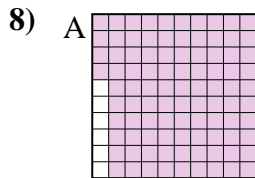
menor \_\_\_\_\_  
 mayor \_\_\_\_\_



menor \_\_\_\_\_  
 mayor \_\_\_\_\_



menor \_\_\_\_\_  
 mayor \_\_\_\_\_



menor \_\_\_\_\_  
 mayor \_\_\_\_\_

1. \_\_\_\_\_
2. \_\_\_\_\_
3. \_\_\_\_\_
4. \_\_\_\_\_
5. \_\_\_\_\_
6. \_\_\_\_\_
7. \_\_\_\_\_
8. \_\_\_\_\_



Pon las cajas en orden de la menor a la mayor basado en la cantidad sombreada.

Ej)	A	B	C	D	menor <u>0.2 - B</u> <u>0.6 - D</u> <u>0.83 - A</u> mayor <u>0.96 - C</u>
1)	A	B	C	D	menor <u>0.3 - D</u> <u>0.62 - A</u> <u>0.7 - B</u> mayor <u>0.83 - C</u>
2)	A	B	C	D	menor <u>0.13 - D</u> <u>0.4 - B</u> <u>0.47 - A</u> mayor <u>0.7 - C</u>
3)	A	B	C	D	menor <u>0.5 - B</u> <u>0.71 - C</u> <u>0.8 - A</u> mayor <u>0.9 - D</u>
4)	A	B	C	D	menor <u>0.1 - C</u> <u>0.2 - A</u> <u>0.6 - B</u> mayor <u>0.9 - D</u>
5)	A	B	C	D	menor <u>0.39 - D</u> <u>0.4 - B</u> <u>0.6 - A</u> mayor <u>0.91 - C</u>
6)	A	B	C	D	menor <u>0.4 - B</u> <u>0.86 - D</u> <u>0.9 - A</u> mayor <u>0.94 - C</u>
7)	A	B	C	D	menor <u>0.4 - A</u> <u>0.53 - B</u> <u>0.55 - C</u> mayor <u>0.6 - D</u>
8)	A	B	C	D	menor <u>0.3 - C</u> <u>0.4 - B</u> <u>0.88 - D</u> mayor <u>0.94 - A</u>

**Respuestas**

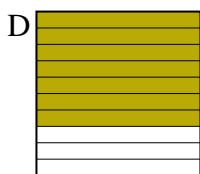
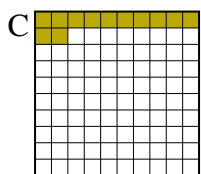
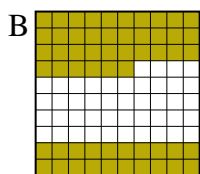
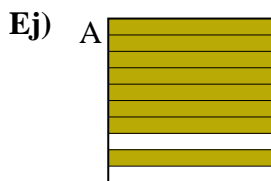
- Ej. B,D,A,C
1. D,A,B,C
2. D,B,A,C
3. B,C,A,D
4. C,A,B,D
5. D,B,A,C
6. B,D,A,C
7. A,B,C,D
8. C,B,D,A





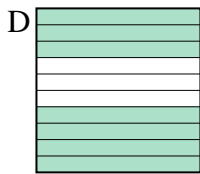
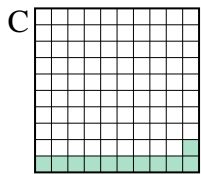
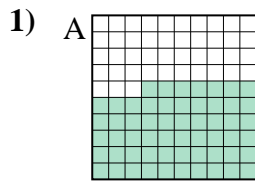
Pon las cajas en orden de la menor a la mayor basado en la cantidad sombreada.

**Respuestas**

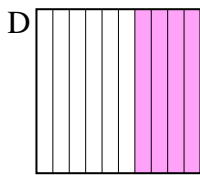
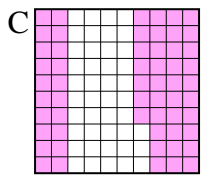
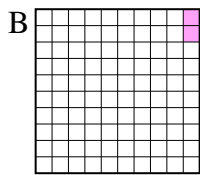
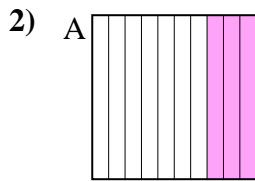


menor 0.12 - C  
0.56 - B  
0.7 - D  
 mayor 0.8 - A

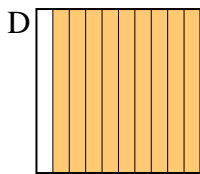
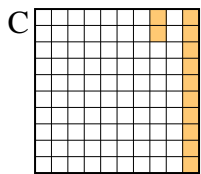
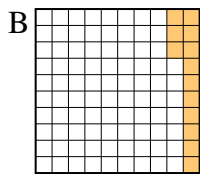
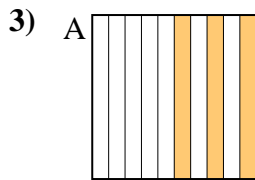
Ej. **C,B,D,A**



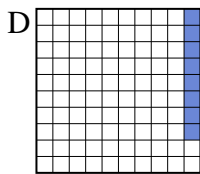
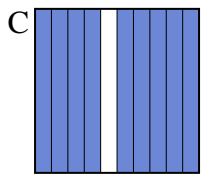
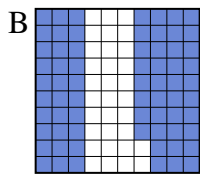
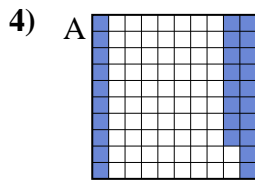
menor \_\_\_\_\_  
 mayor \_\_\_\_\_



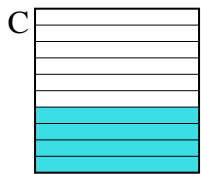
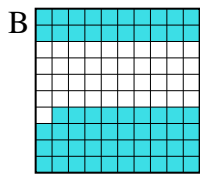
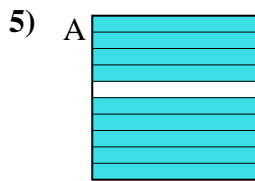
menor \_\_\_\_\_  
 mayor \_\_\_\_\_



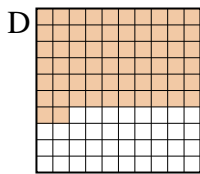

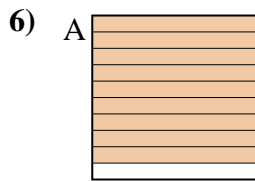
menor \_\_\_\_\_  
 mayor \_\_\_\_\_



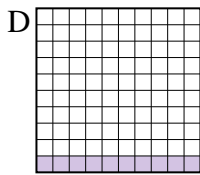
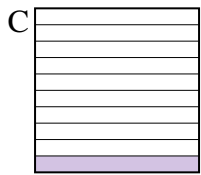
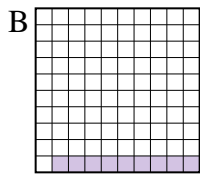
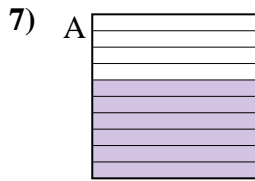
menor \_\_\_\_\_  
 mayor \_\_\_\_\_



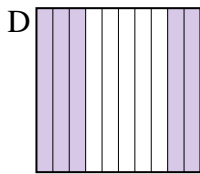
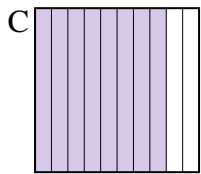
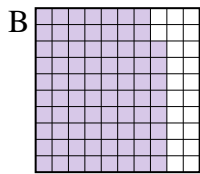
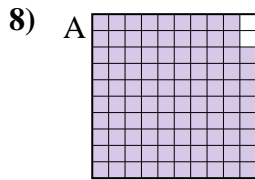
menor \_\_\_\_\_  
 mayor \_\_\_\_\_



menor \_\_\_\_\_  
 mayor \_\_\_\_\_



menor \_\_\_\_\_  
 mayor \_\_\_\_\_



menor \_\_\_\_\_  
 mayor \_\_\_\_\_

1. \_\_\_\_\_
2. \_\_\_\_\_
3. \_\_\_\_\_
4. \_\_\_\_\_
5. \_\_\_\_\_
6. \_\_\_\_\_
7. \_\_\_\_\_
8. \_\_\_\_\_



Pon las cajas en orden de la menor a la mayor basado en la cantidad sombreada.

Ej)	A	B	C	D	menor <u>0.12 - C</u> <u>0.56 - B</u> <u>0.7 - D</u> mayor <u>0.8 - A</u>
1)	A	B	C	D	menor <u>0.11 - C</u> <u>0.57 - A</u> <u>0.7 - D</u> mayor <u>0.9 - B</u>
2)	A	B	C	D	menor <u>0.02 - B</u> <u>0.3 - A</u> <u>0.4 - D</u> mayor <u>0.57 - C</u>
3)	A	B	C	D	menor <u>0.12 - C</u> <u>0.13 - B</u> <u>0.3 - A</u> mayor <u>0.9 - D</u>
4)	A	B	C	D	menor <u>0.08 - D</u> <u>0.28 - A</u> <u>0.68 - B</u> mayor <u>0.9 - C</u>
5)	A	B	C	D	menor <u>0.3 - D</u> <u>0.4 - C</u> <u>0.59 - B</u> mayor <u>0.9 - A</u>
6)	A	B	C	D	menor <u>0.2 - C</u> <u>0.6 - B</u> <u>0.62 - D</u> mayor <u>0.9 - A</u>
7)	A	B	C	D	menor <u>0.09 - B</u> <u>0.1 - C</u> <u>0.1 - C</u> mayor <u>0.6 - A</u>
8)	A	B	C	D	menor <u>0.5 - D</u> <u>0.78 - B</u> <u>0.8 - C</u> mayor <u>0.98 - A</u>


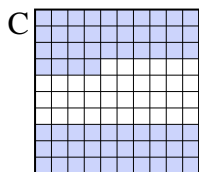

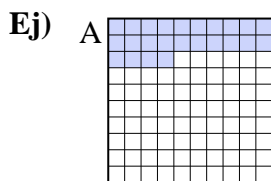
**Respuestas**

- Ej. C,B,D,A
1. C,A,D,B
2. B,A,D,C
3. C,B,A,D
4. D,A,B,C
5. D,C,B,A
6. C,B,D,A
7. B,C,C,A
8. D,B,C,A



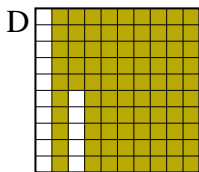
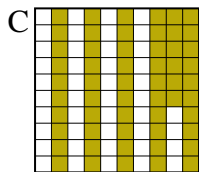
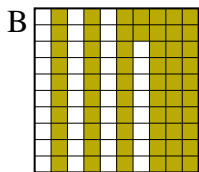
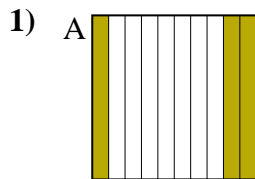
Pon las cajas en orden de la menor a la mayor basado en la cantidad sombreada.

**Respuestas**

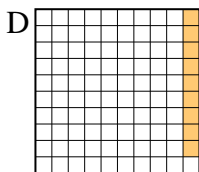
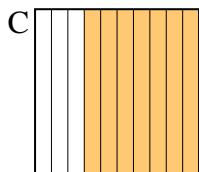
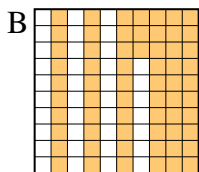
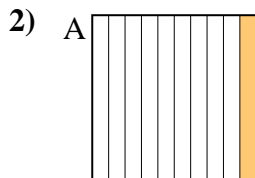


menor 0.2 - D  
0.24 - A  
0.4 - B  
 mayor 0.64 - C

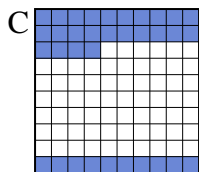

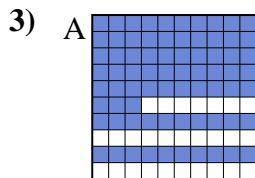
Ej. **D,A,B,C**






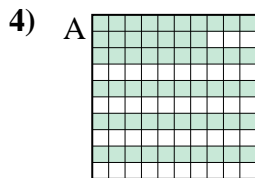
menor \_\_\_\_\_  
 mayor \_\_\_\_\_



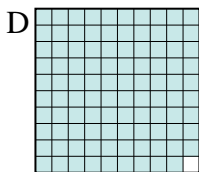
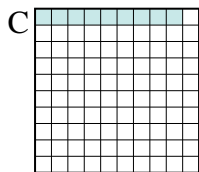
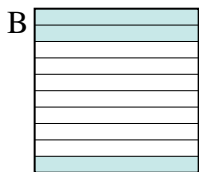
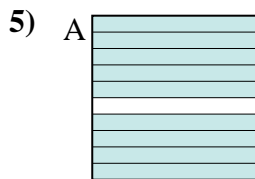
menor \_\_\_\_\_  
 mayor \_\_\_\_\_



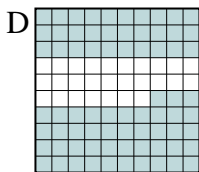
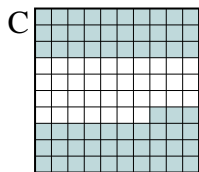

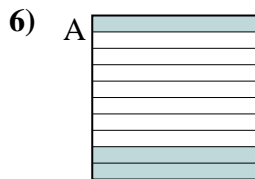
menor \_\_\_\_\_  
 mayor \_\_\_\_\_



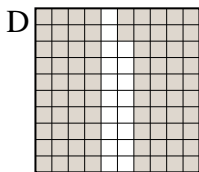
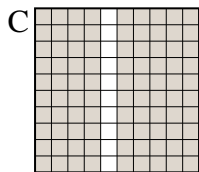
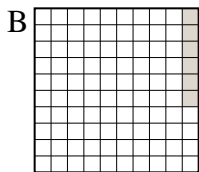
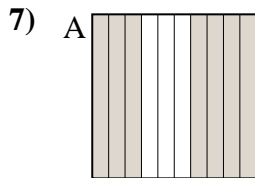
menor \_\_\_\_\_  
 mayor \_\_\_\_\_



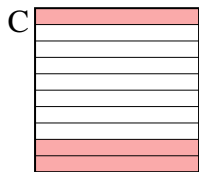
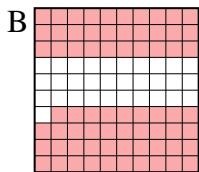
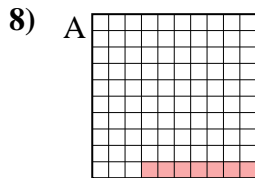
menor \_\_\_\_\_  
 mayor \_\_\_\_\_



menor \_\_\_\_\_  
 mayor \_\_\_\_\_



menor \_\_\_\_\_  
 mayor \_\_\_\_\_



menor \_\_\_\_\_  
 mayor \_\_\_\_\_

1. \_\_\_\_\_
2. \_\_\_\_\_
3. \_\_\_\_\_
4. \_\_\_\_\_
5. \_\_\_\_\_
6. \_\_\_\_\_
7. \_\_\_\_\_
8. \_\_\_\_\_



Pon las cajas en orden de la menor a la mayor basado en la cantidad sombreada.

Ej)	A	B	C	D	menor <u>0.2 - D</u> <u>0.24 - A</u> <u>0.4 - B</u> mayor <u>0.64 - C</u>
1)	A	B	C	D	menor <u>0.3 - A</u> <u>0.56 - C</u> <u>0.62 - B</u> mayor <u>0.85 - D</u>
2)	A	B	C	D	menor <u>0.09 - D</u> <u>0.1 - A</u> <u>0.63 - B</u> mayor <u>0.7 - C</u>
3)	A	B	C	D	menor <u>0.3 - B</u> <u>0.34 - C</u> <u>0.7 - D</u> mayor <u>0.73 - A</u>
4)	A	B	C	D	menor <u>0.16 - D</u> <u>0.4 - B</u> <u>0.57 - A</u> mayor <u>0.9 - C</u>
5)	A	B	C	D	menor <u>0.09 - C</u> <u>0.3 - B</u> <u>0.9 - A</u> mayor <u>0.99 - D</u>
6)	A	B	C	D	menor <u>0.3 - A</u> <u>0.4 - B</u> <u>0.63 - C</u> mayor <u>0.73 - D</u>
7)	A	B	C	D	menor <u>0.06 - B</u> <u>0.7 - A</u> <u>0.82 - D</u> mayor <u>0.9 - C</u>
8)	A	B	C	D	menor <u>0.07 - A</u> <u>0.2 - D</u> <u>0.3 - C</u> mayor <u>0.69 - B</u>

**Respuestas**

- Ej. D,A,B,C
1. A,C,B,D
2. D,A,B,C
3. B,C,D,A
4. D,B,A,C
5. C,B,A,D
6. A,B,C,D
7. B,A,D,C
8. A,D,C,B