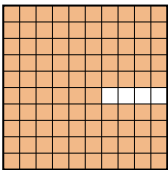

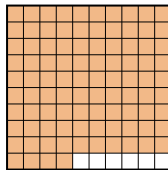





Pon las cajas en orden de la menor a la mayor basado en la cantidad sombreada.

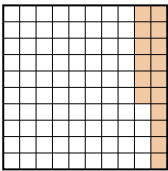
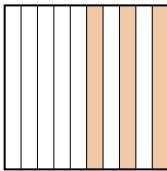
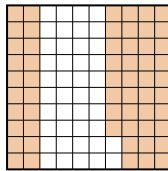
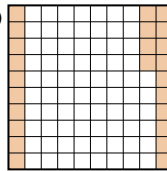
Respuestas

Ej) A  B  C  D 

menor 0.5 - B
0.7 - D
0.94 - C
mayor 0.96 - A

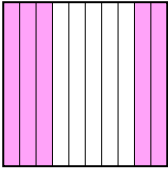
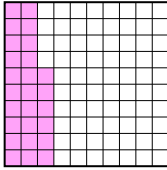
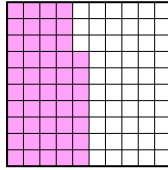
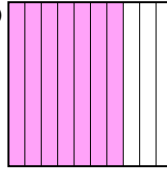
Ej. **B,D,C,A**

1. _____
2. _____
3. _____
4. _____
5. _____
6. _____
7. _____
8. _____

1) A  B  C  D 

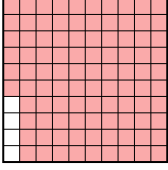
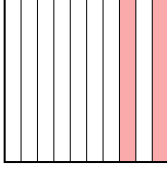
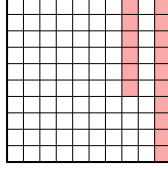
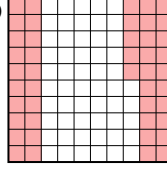
menor _____

mayor _____

2) A  B  C  D 

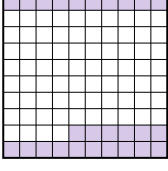


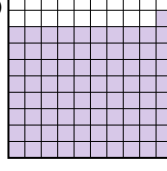
menor _____

mayor _____

3) A  B  C  D 

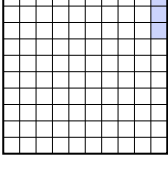
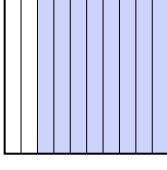

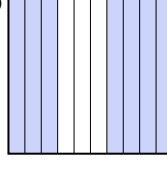
menor _____

mayor _____

4) A  B  C  D 


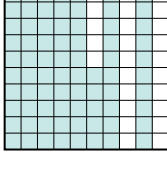
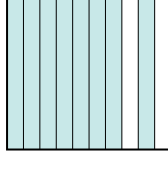

menor _____

mayor _____

5) A  B  C  D 





menor _____

mayor _____

6) A  B  C  D 



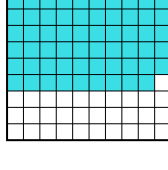
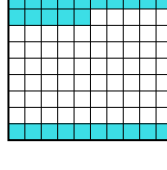
menor _____

mayor _____

7) A  B  C  D 

menor _____

mayor _____

8) A  B  C  D 

menor _____

mayor _____



Pon las cajas en orden de la menor a la mayor basado en la cantidad sombreada.

Ej)	A	B	C	D	menor <u>0.5 - B</u> <u>0.7 - D</u> <u>0.94 - C</u> mayor <u>0.96 - A</u>
1)	A	B	C	D	menor <u>0.16 - A</u> <u>0.24 - D</u> <u>0.3 - B</u> mayor <u>0.58 - C</u>
2)	A	B	C	D	menor <u>0.26 - B</u> <u>0.47 - C</u> <u>0.5 - A</u> mayor <u>0.7 - D</u>
3)	A	B	C	D	menor <u>0.16 - C</u> <u>0.2 - B</u> <u>0.45 - D</u> mayor <u>0.96 - A</u>
4)	A	B	C	D	menor <u>0.2 - C</u> <u>0.26 - A</u> <u>0.5 - B</u> mayor <u>0.81 - D</u>
5)	A	B	C	D	menor <u>0.03 - A</u> <u>0.19 - C</u> <u>0.7 - D</u> mayor <u>0.8 - B</u>
6)	A	B	C	D	menor <u>0.75 - B</u> <u>0.8 - C</u> <u>0.9 - A</u> mayor <u>0.91 - D</u>
7)	A	B	C	D	menor <u>0.4 - A</u> <u>0.64 - B</u> <u>0.7 - D</u> mayor <u>0.71 - C</u>
8)	A	B	C	D	menor <u>0.3 - A</u> <u>0.35 - D</u> <u>0.69 - C</u> mayor <u>0.8 - B</u>

Respuestas

- Ej. B,D,C,A
1. A,D,B,C
2. B,C,A,D
3. C,B,D,A
4. C,A,B,D
5. A,C,D,B
6. B,C,A,D
7. A,B,D,C
8. A,D,C,B