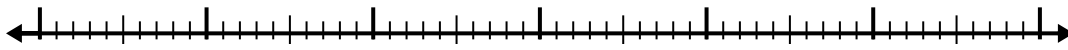


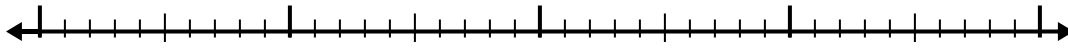


Usa la recta numérica para resolver cada problema.

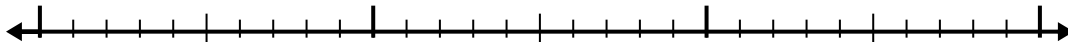
1) $5.5 - 3.4 =$



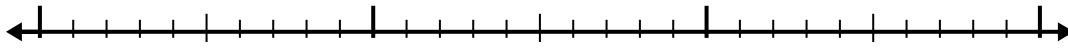
2) $4.6 - 2.1 =$



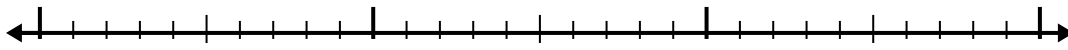
3) $8.1 - 1.2 =$



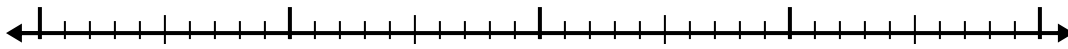
4) $8.1 - 1.3 =$



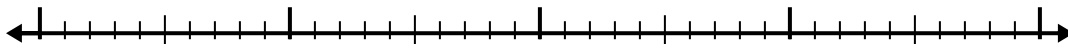
5) $8.9 - 1.8 =$



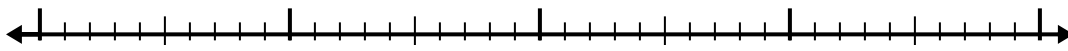
6) $5.9 - 2.1 =$



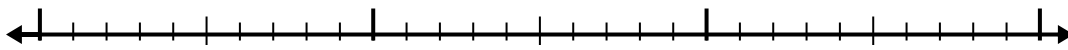
7) $9.3 - 2.1 =$



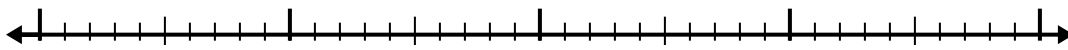
8) $7.8 - 1.8 =$



9) $5.6 - 1.1 =$



10) $6 - 2.7 =$



Respuestas

1. _____

2. _____

3. _____

4. _____

5. _____

6. _____

7. _____

8. _____

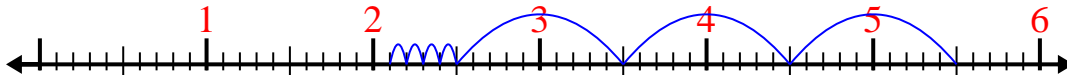
9. _____

10. _____

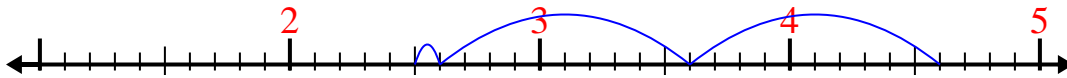


Usa la recta numérica para resolver cada problema.


1) $5.5 - 3.4 =$



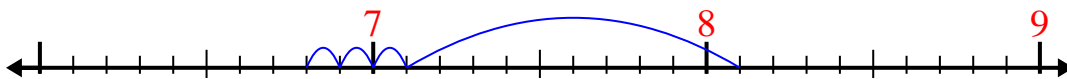
2) $4.6 - 2.1 =$



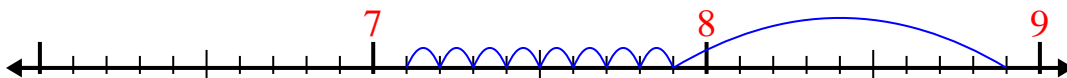
3) $8.1 - 1.2 =$



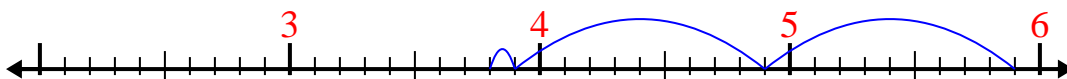
4) $8.1 - 1.3 =$



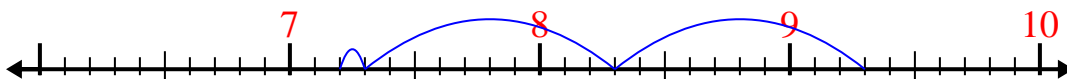
5) $8.9 - 1.8 =$



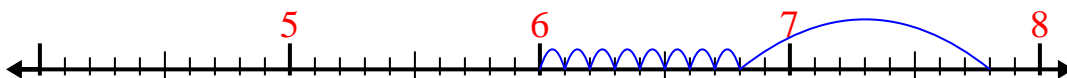
6) $5.9 - 2.1 =$



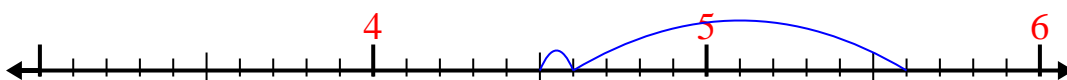
7) $9.3 - 2.1 =$



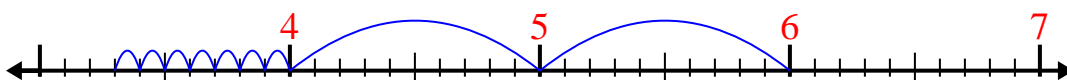
8) $7.8 - 1.8 =$



9) $5.6 - 1.1 =$



10) $6 - 2.7 =$



Respuestas

1. 2.1

2. 2.5

3. 6.9

4. 6.8

5. 7.1

6. 3.8

7. 7.2

8. 6

9. 4.5

10. 3.3