


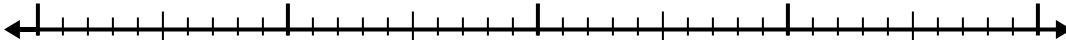


Usa la recta numérica para resolver cada problema.


1) $5.8 - 3.1 =$



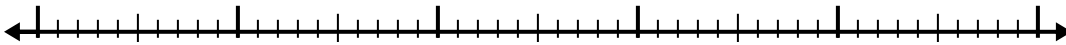
2) $7.4 - 2.3 =$




3) $10.3 - 3.1 =$



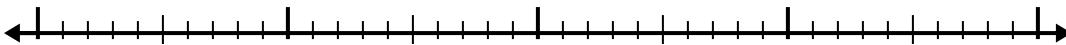
4) $6.9 - 3.7 =$



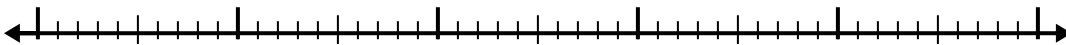
5) $11.2 - 3.6 =$




6) $4.5 - 2.7 =$



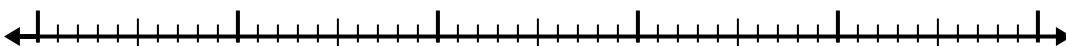
7) $4.1 - 2.4 =$



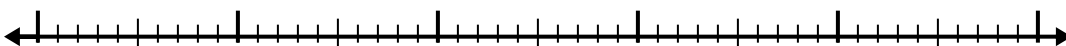
8) $12.4 - 3.6 =$



9) $11.5 - 2.6 =$



10) $9.2 - 3.9 =$

**Respuestas**

1. _____

2. _____

3. _____

4. _____

5. _____

6. _____

7. _____

8. _____

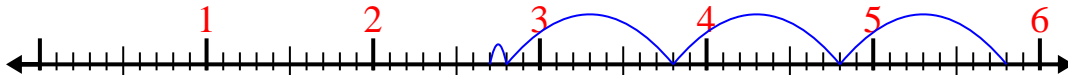
9. _____

10. _____

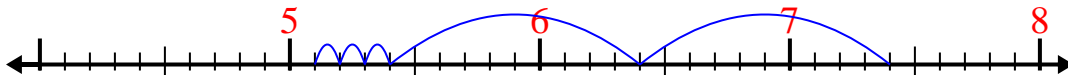


Usa la recta numérica para resolver cada problema.

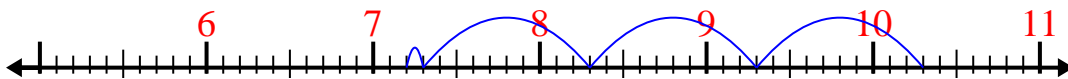
1) $5.8 - 3.1 =$



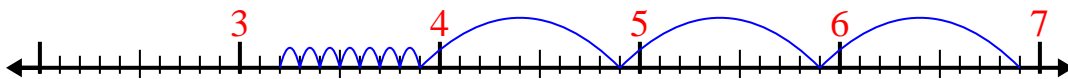
2) $7.4 - 2.3 =$



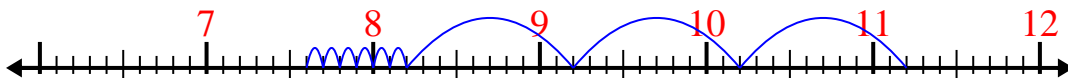
3) $10.3 - 3.1 =$



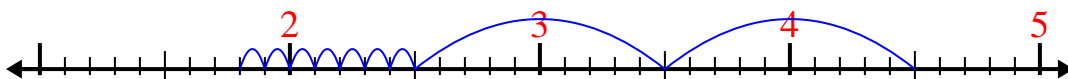
4) $6.9 - 3.7 =$



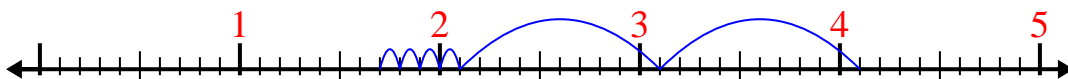
5) $11.2 - 3.6 =$



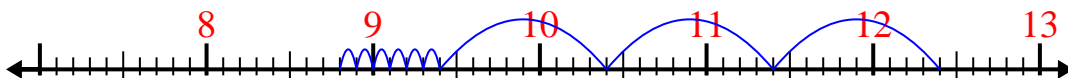
6) $4.5 - 2.7 =$



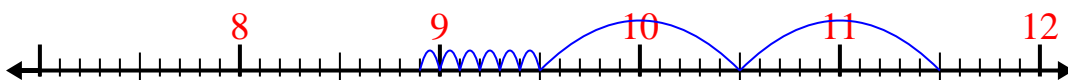
7) $4.1 - 2.4 =$



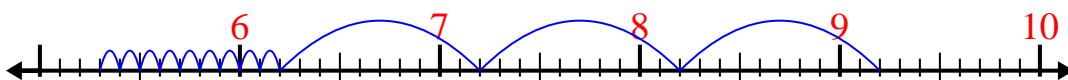
8) $12.4 - 3.6 =$



9) $11.5 - 2.6 =$



10) $9.2 - 3.9 =$



Respuestas

1. 2.7

2. 5.1

3. 7.2

4. 3.2

5. 7.6

6. 1.8

7. 1.7

8. 8.8

9. 8.9

10. 5.3