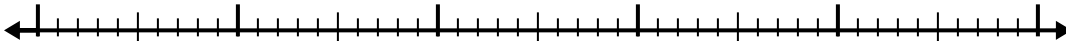





Usa la recta numérica para resolver cada problema.

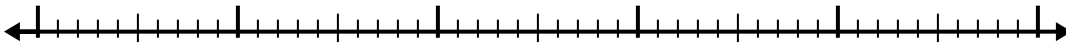
1) $5 - 3.7 =$




2) $9.4 - 3.4 =$




3) $7.6 - 2.3 =$



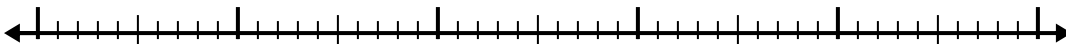
4) $9.7 - 3.6 =$



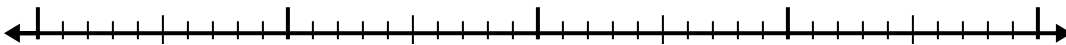
5) $11.2 - 3.6 =$




6) $10.3 - 3.9 =$



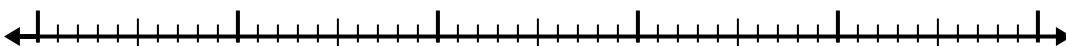
7) $7.1 - 2.7 =$



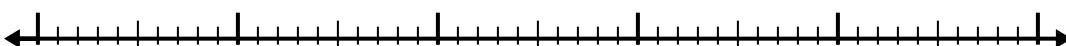
8) $10.9 - 3.9 =$



9) $9.3 - 2.9 =$



10) $6.7 - 3.3 =$

**Respuestas**

1. _____

2. _____

3. _____

4. _____

5. _____

6. _____

7. _____

8. _____

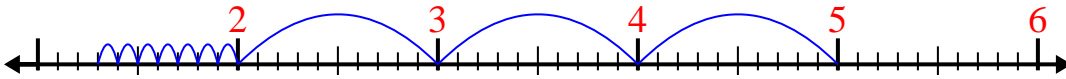
9. _____

10. _____

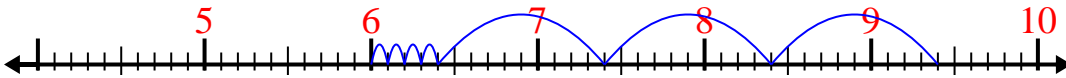


Usa la recta numérica para resolver cada problema.

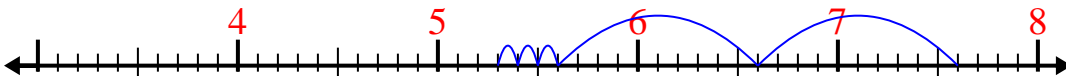
1) $5 - 3.7 =$



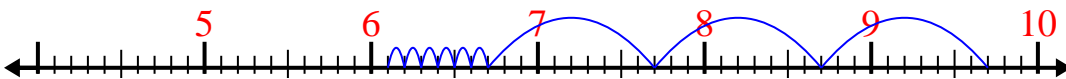
2) $9.4 - 3.4 =$



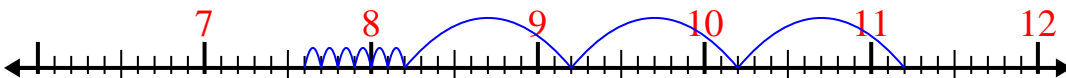
3) $7.6 - 2.3 =$



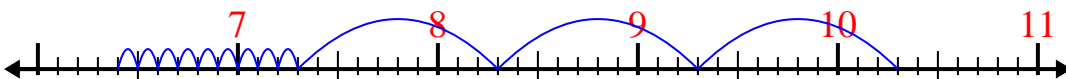
4) $9.7 - 3.6 =$



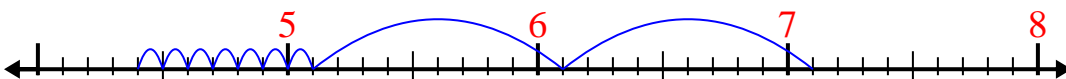
5) $11.2 - 3.6 =$



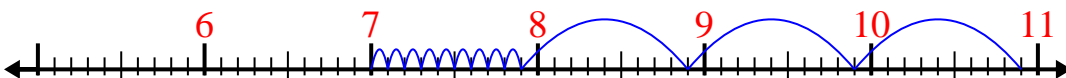
6) $10.3 - 3.9 =$



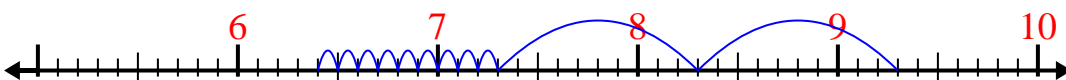
7) $7.1 - 2.7 =$



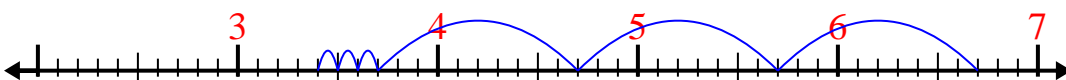
8) $10.9 - 3.9 =$



9) $9.3 - 2.9 =$



10) $6.7 - 3.3 =$

**Respuestas**1. 1.32. 63. 5.34. 6.15. 7.66. 6.47. 4.48. 79. 6.410. 3.4