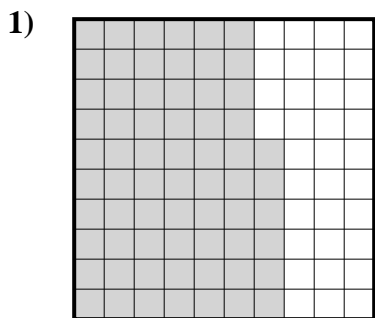




Determina cuál letra mejor representa la cantidad sombreada del total.

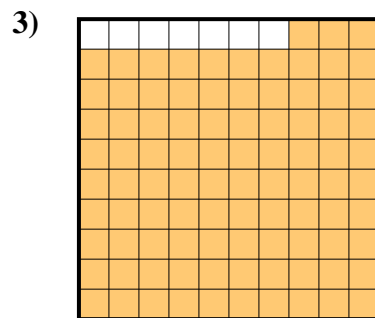
Respuestas




- A. 660.00
- B. 0.066
- C. 0.66
- D. 660.0



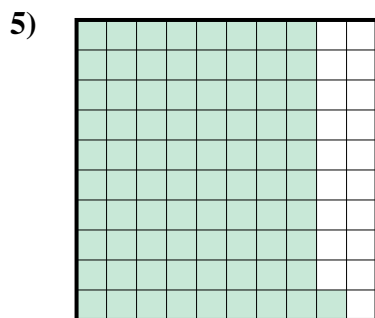
- A. 500.0
- B. 0.5
- C. 50
- D. 5



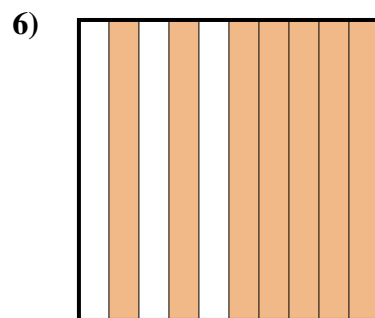
- A. 930.00
- B. 0.93
- C. 93
- D. 930.0



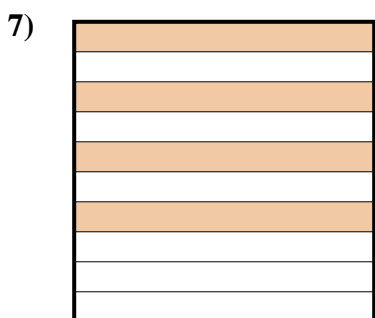
- A. 2
- B. 0.2
- C. 0.02
- D. 200.00



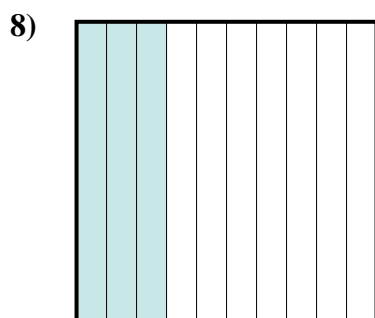
- A. 0.81
- B. 810.0
- C. 81
- D. 810.00



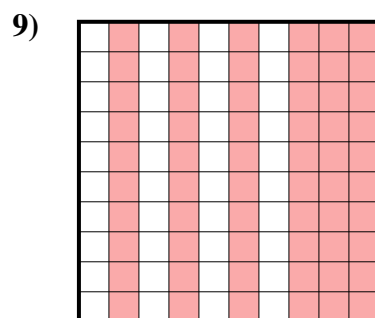
- A. 70
- B. 700.00
- C. 0.07
- D. 0.7



- A. 4
- B. 40
- C. 400.0
- D. 0.4



- A. 300.00
- B. 300.0
- C. 3
- D. 0.3



- A. 60
- B. 0.6
- C. 6
- D. 0.06

1. _____

2. _____

3. _____

4. _____

5. _____

6. _____

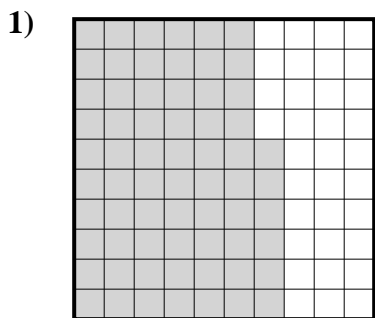
7. _____

8. _____

9. _____



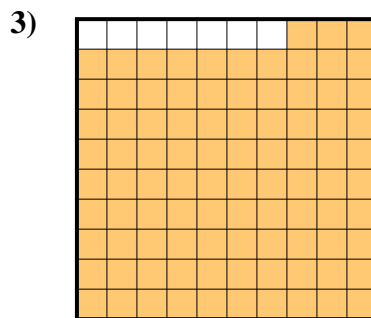
Determina cuál letra mejor representa la cantidad sombreada del total.




- A. 660.00
- B. 0.066
- C. 0.66
- D. 660.0



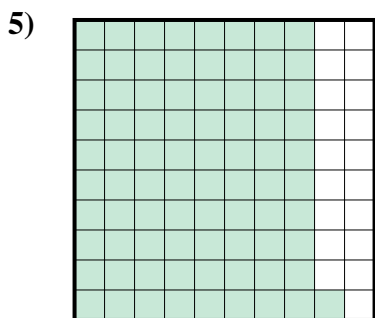
- A. 500.0
- B. 0.5
- C. 50
- D. 5



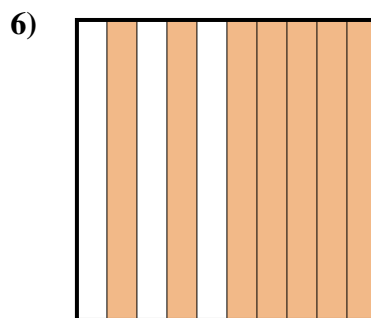
- A. 930.00
- B. 0.93
- C. 93
- D. 930.0



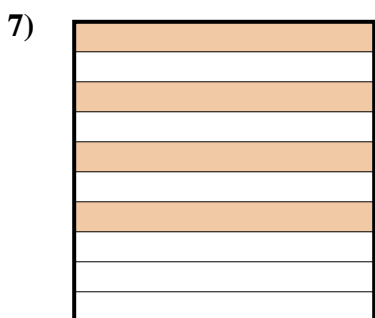
- A. 2
- B. 0.2
- C. 0.02
- D. 200.00



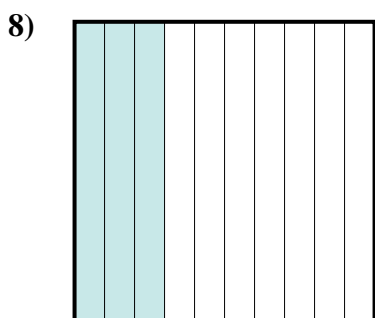
- A. 0.81
- B. 810.0
- C. 81
- D. 810.00



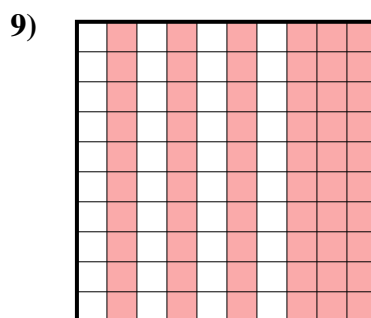
- A. 70
- B. 700.00
- C. 0.07
- D. 0.7



- A. 4
- B. 40
- C. 400.0
- D. 0.4



- A. 300.00
- B. 300.0
- C. 3
- D. 0.3



- A. 60
- B. 0.6
- C. 6
- D. 0.06

Respuestas

- 1. **C**
- 2. **B**
- 3. **B**
- 4. **B**
- 5. **A**
- 6. **D**
- 7. **D**
- 8. **D**
- 9. **B**