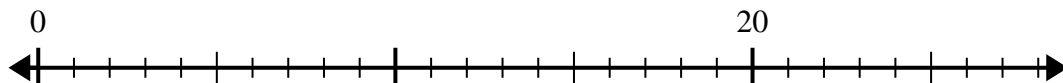


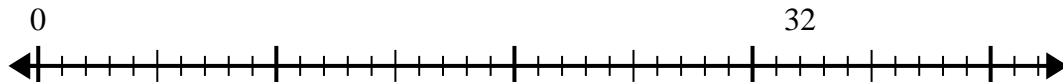


Usa la recta numérica para resolver el problema de división.

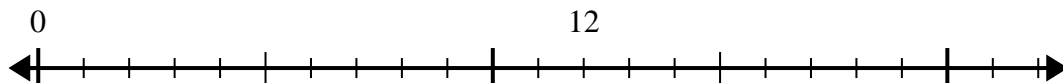
1) $20 \div 4 =$



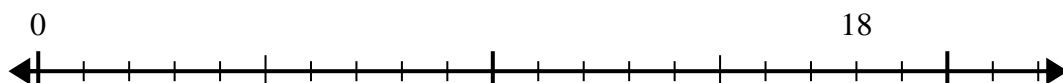
2) $32 \div 8 =$



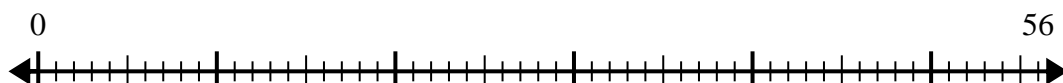
3) $12 \div 4 =$



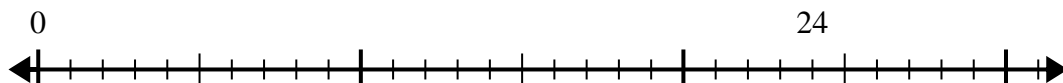
4) $18 \div 6 =$



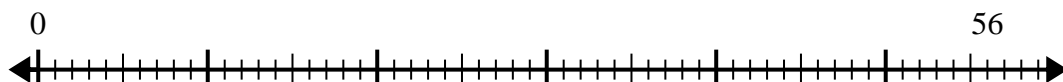
5) $56 \div 8 =$



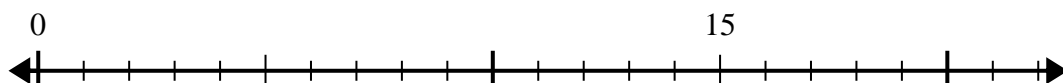
6) $24 \div 8 =$



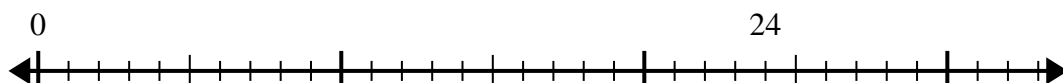
7) $56 \div 7 =$



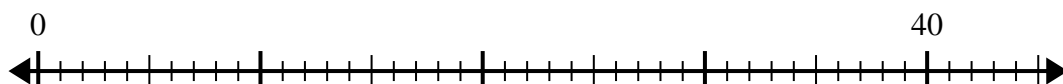
8) $15 \div 5 =$



9) $24 \div 4 =$



10) $40 \div 5 =$

**Respuestas**

1. _____

2. _____

3. _____

4. _____

5. _____

6. _____

7. _____

8. _____

9. _____

10. _____

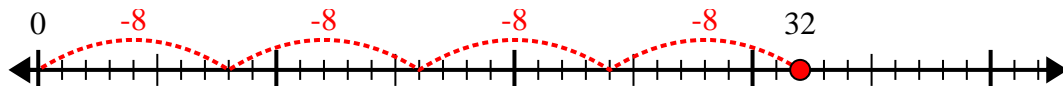


Usa la recta numérica para resolver el problema de división.

1) $20 \div 4 =$



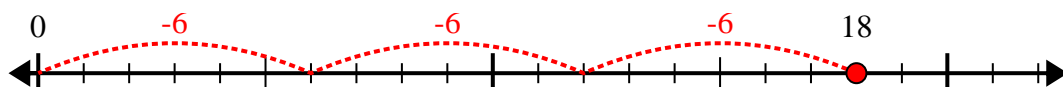
2) $32 \div 8 =$



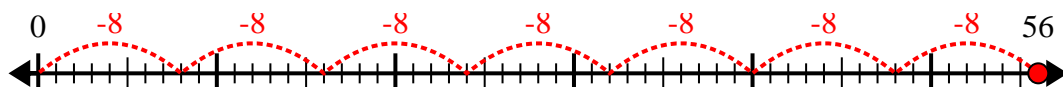
3) $12 \div 4 =$



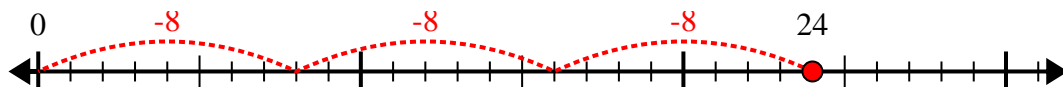
4) $18 \div 6 =$



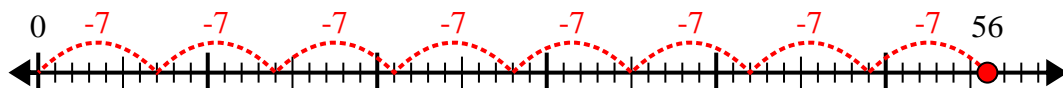
5) $56 \div 8 =$



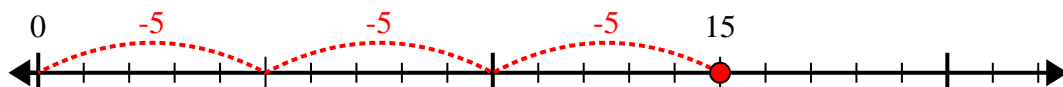
6) $24 \div 8 =$



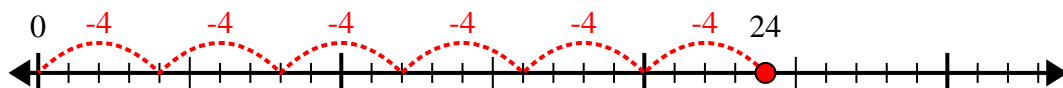
7) $56 \div 7 =$



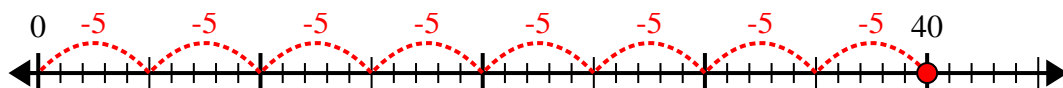
8) $15 \div 5 =$



9) $24 \div 4 =$



10) $40 \div 5 =$



Respuestas

1. 5
2. 4
3. 3
4. 3
5. 7
6. 3
7. 8
8. 3
9. 6
10. 8