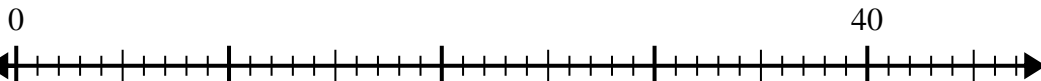


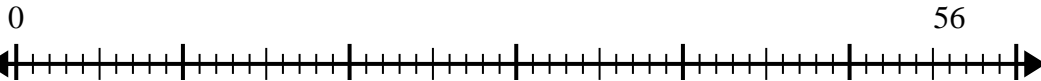


Usa la recta numérica para resolver el problema de división.

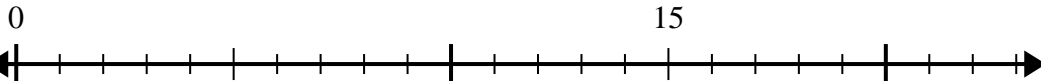
1)  $40 \div 5 =$



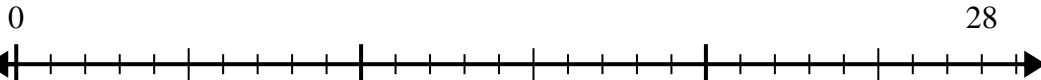
2)  $56 \div 7 =$



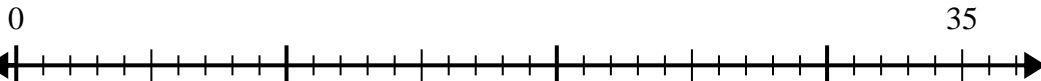
3)  $15 \div 5 =$



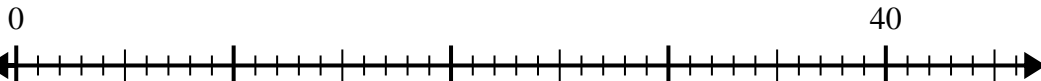
4)  $28 \div 4 =$



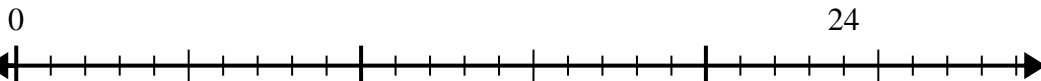
5)  $35 \div 7 =$



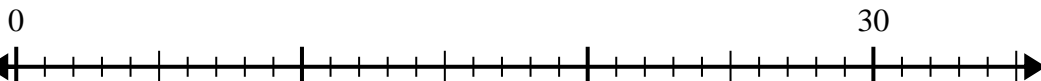
6)  $40 \div 8 =$



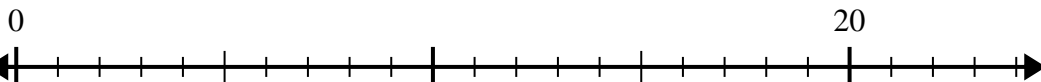
7)  $24 \div 4 =$



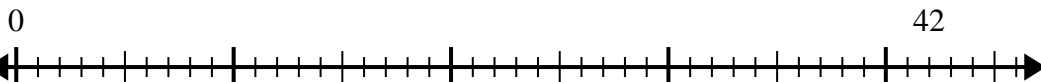
8)  $30 \div 5 =$



9)  $20 \div 4 =$



10)  $42 \div 6 =$



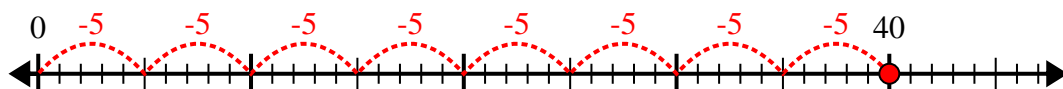
**Respuestas**

1. \_\_\_\_\_
2. \_\_\_\_\_
3. \_\_\_\_\_
4. \_\_\_\_\_
5. \_\_\_\_\_
6. \_\_\_\_\_
7. \_\_\_\_\_
8. \_\_\_\_\_
9. \_\_\_\_\_
10. \_\_\_\_\_

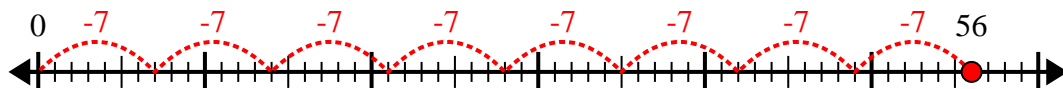


Usa la recta numérica para resolver el problema de división.

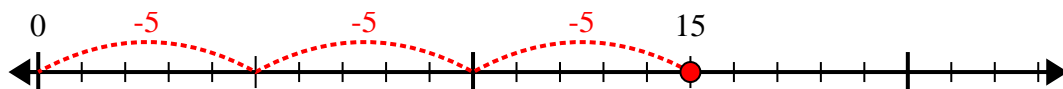
1)  $40 \div 5 =$



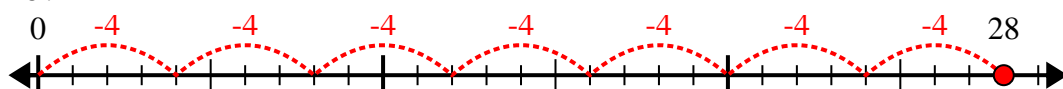
2)  $56 \div 7 =$



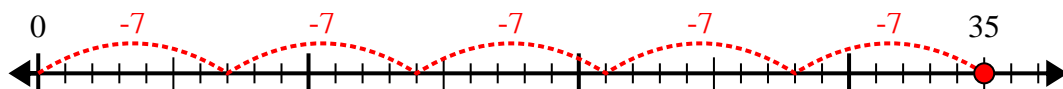
3)  $15 \div 5 =$



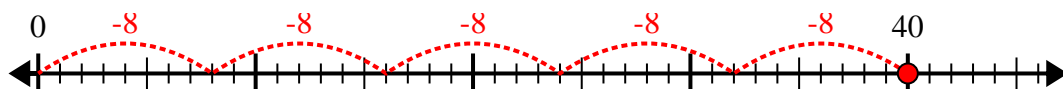
4)  $28 \div 4 =$



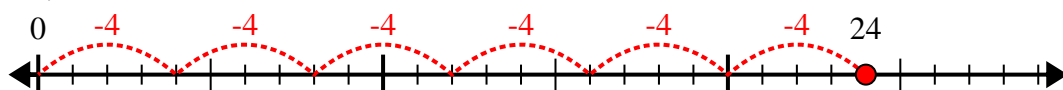
5)  $35 \div 7 =$



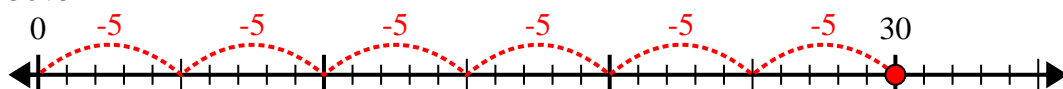
6)  $40 \div 8 =$



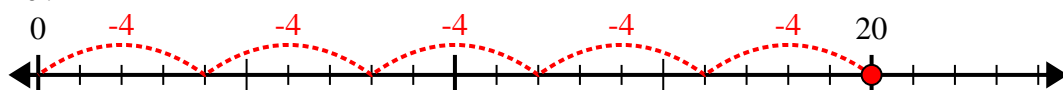
7)  $24 \div 4 =$



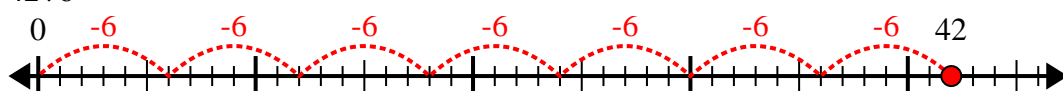
8)  $30 \div 5 =$



9)  $20 \div 4 =$



10)  $42 \div 6 =$



**Respuestas**

1. 8

2. 8

3. 3

4. 7

5. 5

6. 5

7. 6

8. 6

9. 5

10. 7