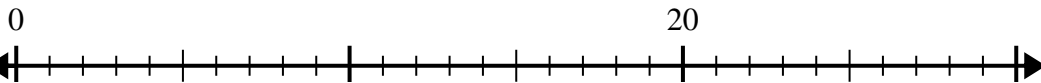


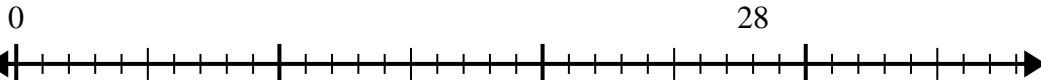


Usa la recta numérica para resolver el problema de división.

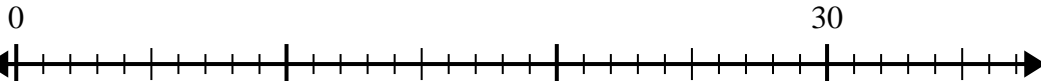
1)  $20 \div 5 =$



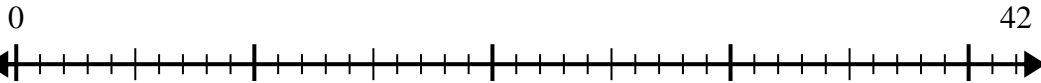
2)  $28 \div 4 =$



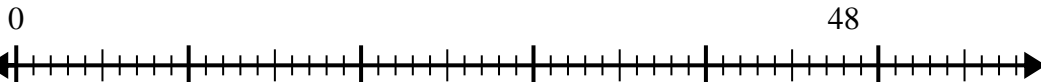
3)  $30 \div 6 =$



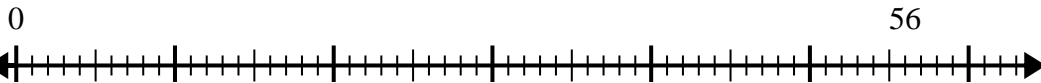
4)  $42 \div 6 =$



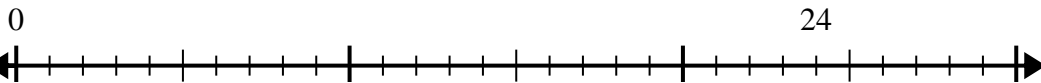
5)  $48 \div 6 =$



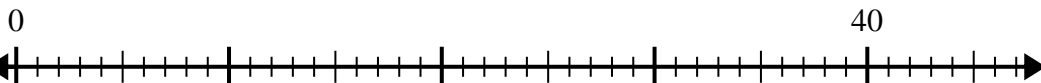
6)  $56 \div 8 =$



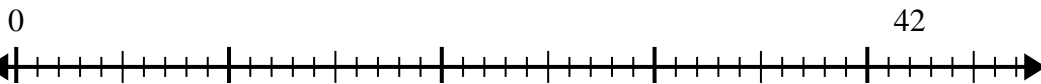
7)  $24 \div 6 =$



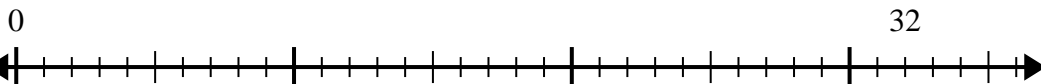
8)  $40 \div 8 =$



9)  $42 \div 7 =$



10)  $32 \div 4 =$



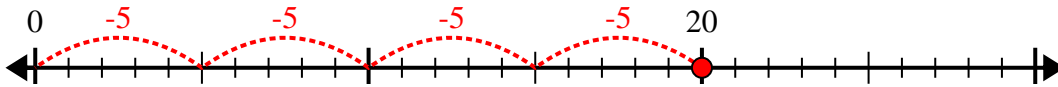
**Respuestas**

1. \_\_\_\_\_
2. \_\_\_\_\_
3. \_\_\_\_\_
4. \_\_\_\_\_
5. \_\_\_\_\_
6. \_\_\_\_\_
7. \_\_\_\_\_
8. \_\_\_\_\_
9. \_\_\_\_\_
10. \_\_\_\_\_

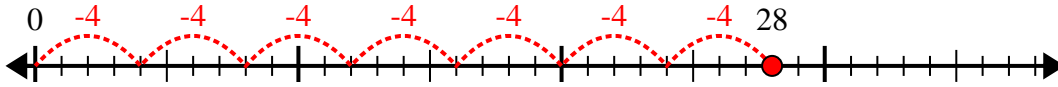


Usa la recta numérica para resolver el problema de división.

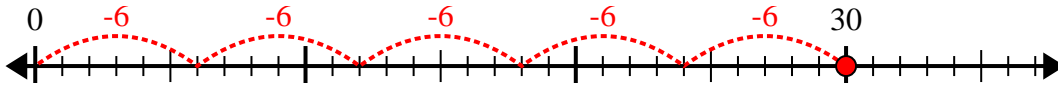
1)  $20 \div 5 =$



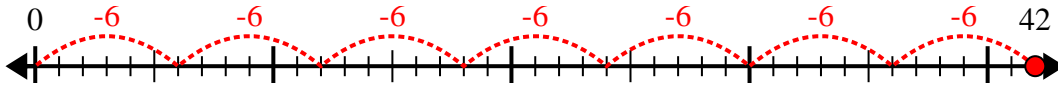
2)  $28 \div 4 =$



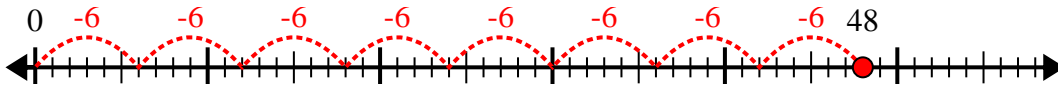
3)  $30 \div 6 =$



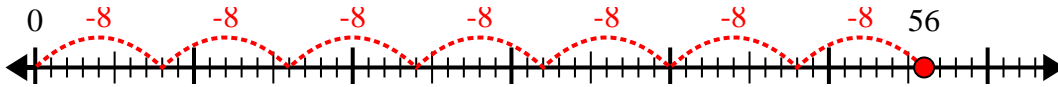
4)  $42 \div 6 =$



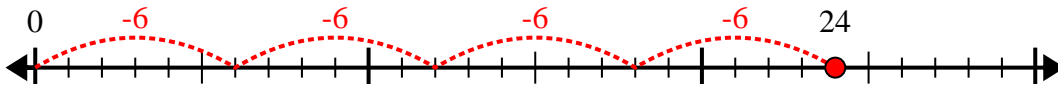
5)  $48 \div 6 =$



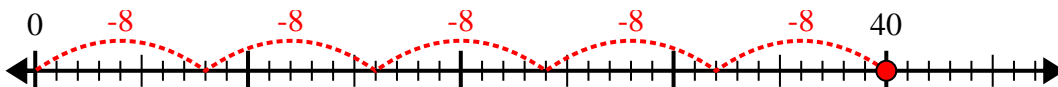
6)  $56 \div 8 =$



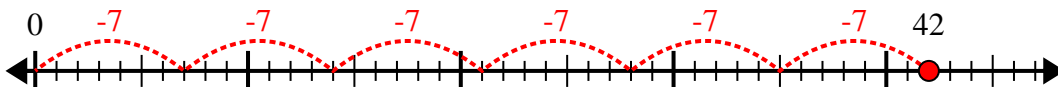
7)  $24 \div 6 =$



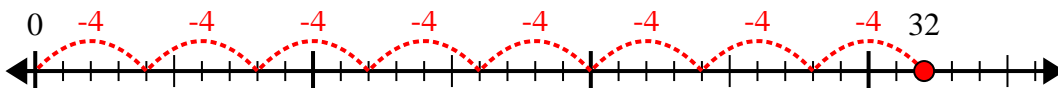
8)  $40 \div 8 =$



9)  $42 \div 7 =$



10)  $32 \div 4 =$



**Respuestas**

1. 4

2. 7

3. 5

4. 7

5. 8

6. 7

7. 4

8. 5

9. 6

10. 8