

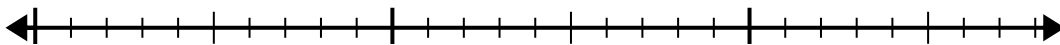


Usa la recta numérica para resolver el problema de división.

1)  $24 \div 6 =$

0

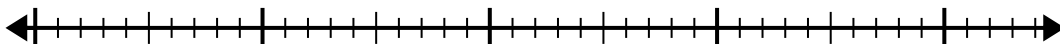
24



2)  $35 \div 7 =$

0

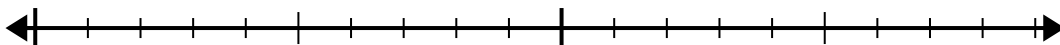
35



3)  $18 \div 6 =$

0

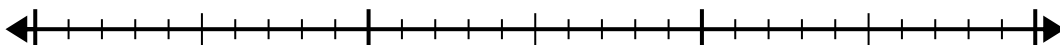
18



4)  $30 \div 6 =$

0

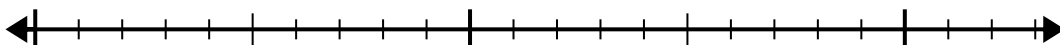
30



5)  $15 \div 5 =$

0

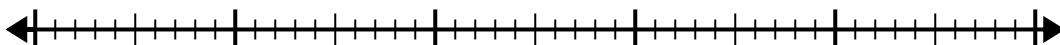
15



6)  $42 \div 6 =$

0

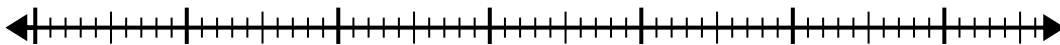
42



7)  $56 \div 8 =$

0

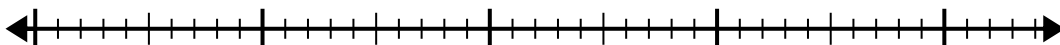
56



8)  $42 \div 7 =$

0

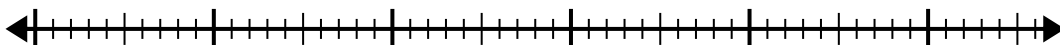
42



9)  $48 \div 8 =$

0

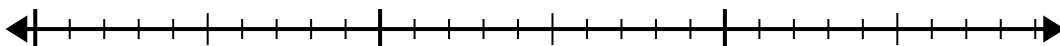
48



10)  $28 \div 4 =$

0

28

**Respuestas**

1. \_\_\_\_\_

2. \_\_\_\_\_

3. \_\_\_\_\_

4. \_\_\_\_\_

5. \_\_\_\_\_

6. \_\_\_\_\_

7. \_\_\_\_\_

8. \_\_\_\_\_

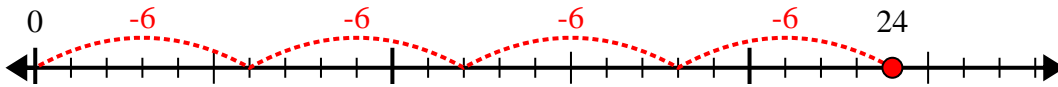
9. \_\_\_\_\_

10. \_\_\_\_\_

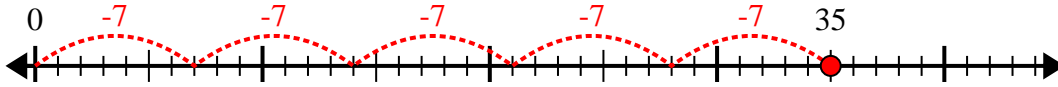


Usa la recta numérica para resolver el problema de división.

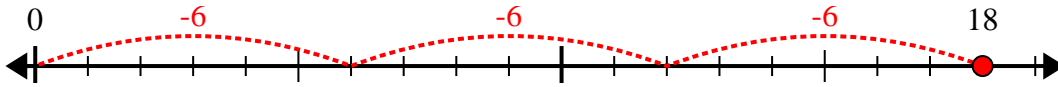
1)  $24 \div 6 =$



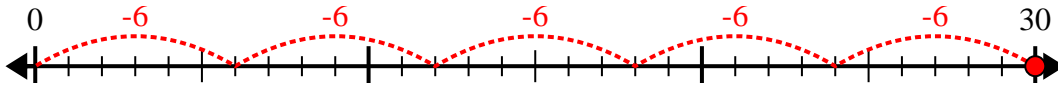
2)  $35 \div 7 =$



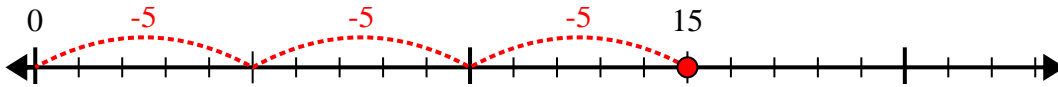
3)  $18 \div 6 =$



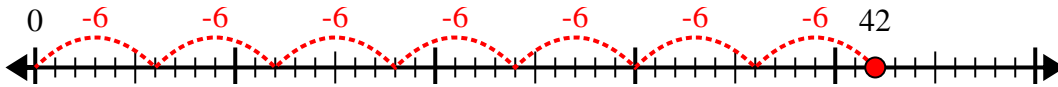
4)  $30 \div 6 =$



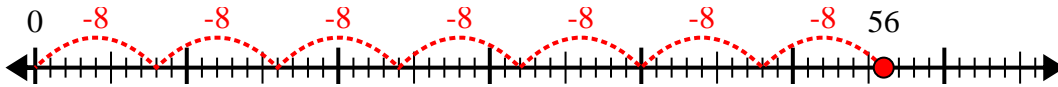
5)  $15 \div 5 =$



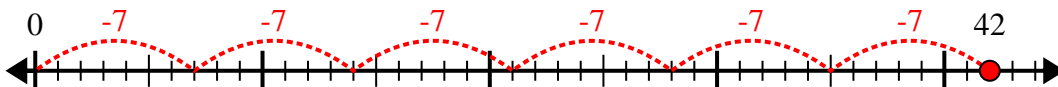
6)  $42 \div 6 =$



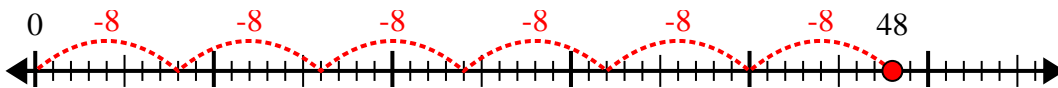
7)  $56 \div 8 =$



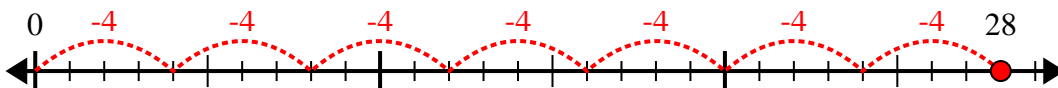
8)  $42 \div 7 =$



9)  $48 \div 8 =$



10)  $28 \div 4 =$



**Respuestas**

1. 4

2. 5

3. 3

4. 5

5. 3

6. 7

7. 7

8. 6

9. 6

10. 7