



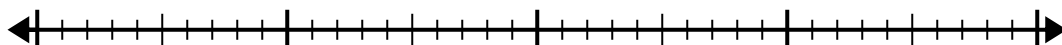
Usa la recta numérica para resolver el problema de división.

Respuestas

1) $30 \div 6 =$

0

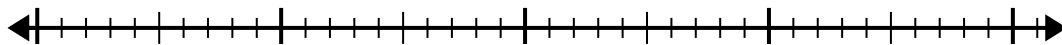
30



2) $32 \div 4 =$

0

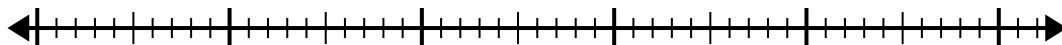
32



3) $42 \div 7 =$

0

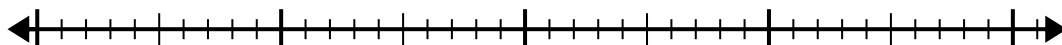
42



4) $40 \div 5 =$

0

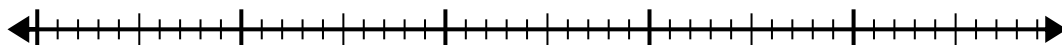
40



5) $40 \div 8 =$

0

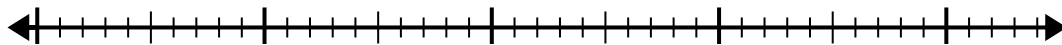
40



6) $42 \div 6 =$

0

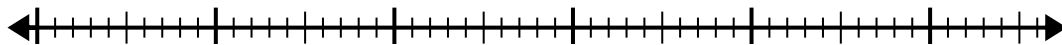
42



7) $48 \div 6 =$

0

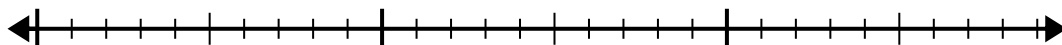
48



8) $20 \div 4 =$

0

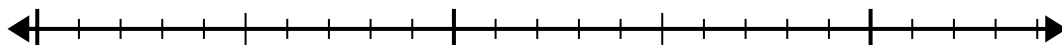
20



9) $20 \div 5 =$

0

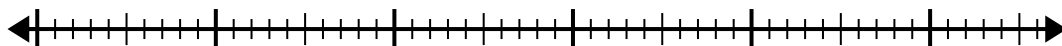
20



10) $56 \div 8 =$

0

56



1. _____

2. _____

3. _____

4. _____

5. _____

6. _____

7. _____

8. _____

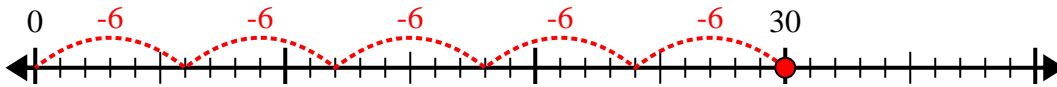
9. _____

10. _____

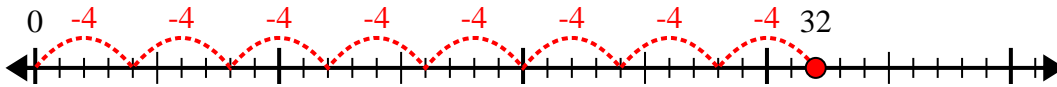


Usa la recta numérica para resolver el problema de división.

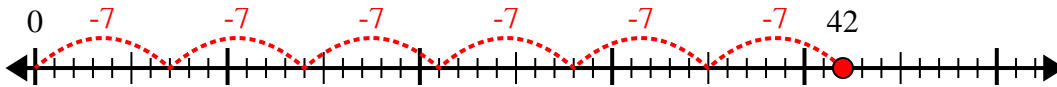
1) $30 \div 6 =$



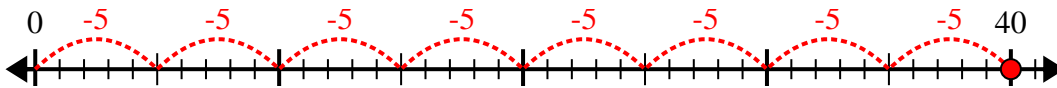
2) $32 \div 4 =$



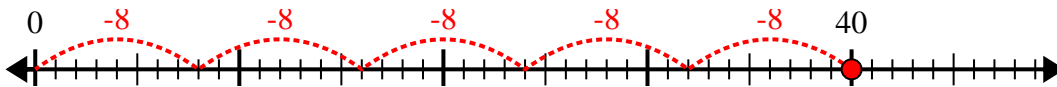
3) $42 \div 7 =$



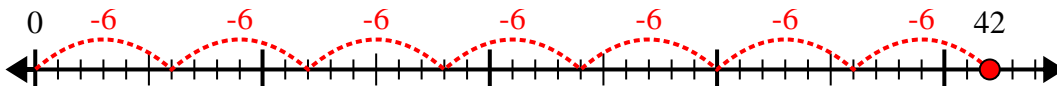
4) $40 \div 5 =$



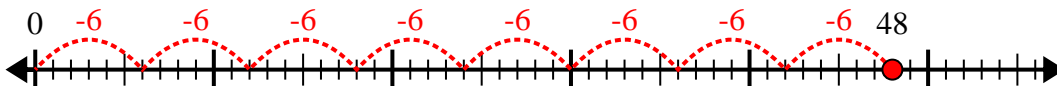
5) $40 \div 8 =$



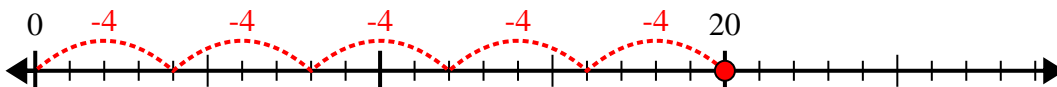
6) $42 \div 6 =$



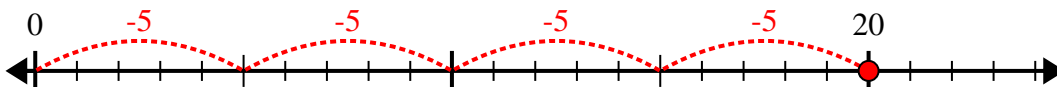
7) $48 \div 6 =$



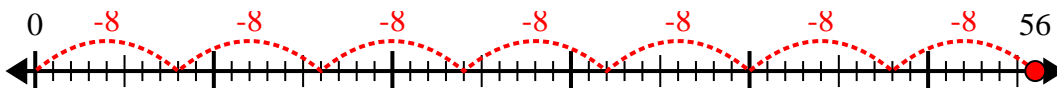
8) $20 \div 4 =$



9) $20 \div 5 =$



10) $56 \div 8 =$



Respuestas

1. 5

2. 8

3. 6

4. 8

5. 5

6. 7

7. 8

8. 5

9. 4

10. 7