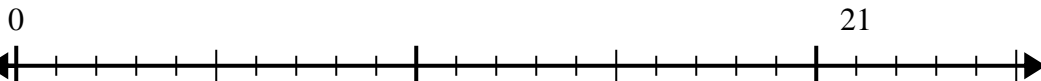


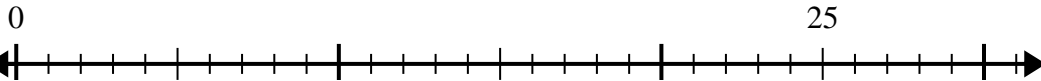


Usa la recta numérica para resolver el problema de división.

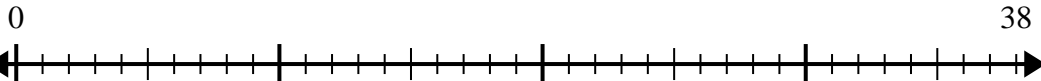
1)  $21 \div 5 =$



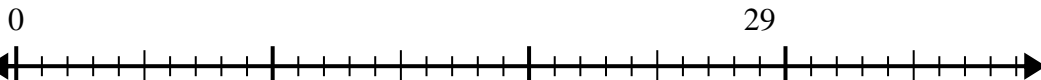
2)  $25 \div 6 =$



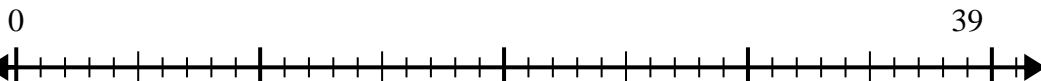
3)  $38 \div 8 =$



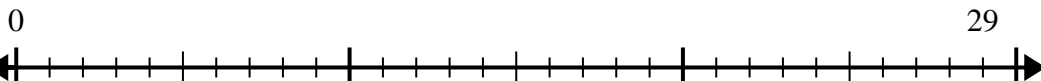
4)  $29 \div 7 =$



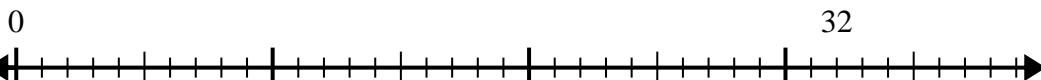
5)  $39 \div 5 =$



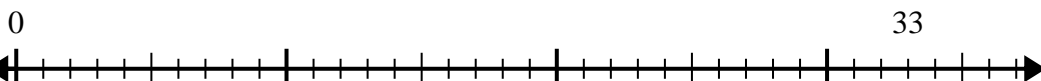
6)  $29 \div 4 =$



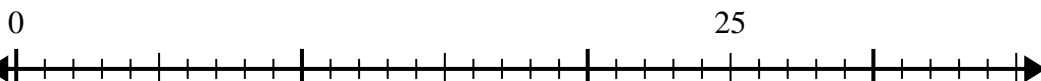
7)  $32 \div 6 =$



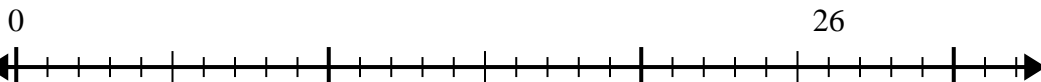
8)  $33 \div 4 =$



9)  $25 \div 4 =$



10)  $26 \div 7 =$



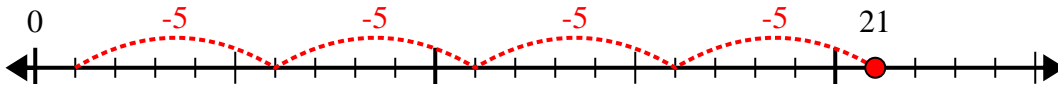
**Respuestas**

1. \_\_\_\_\_
2. \_\_\_\_\_
3. \_\_\_\_\_
4. \_\_\_\_\_
5. \_\_\_\_\_
6. \_\_\_\_\_
7. \_\_\_\_\_
8. \_\_\_\_\_
9. \_\_\_\_\_
10. \_\_\_\_\_

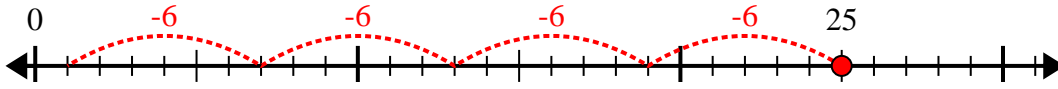


Usa la recta numérica para resolver el problema de división.

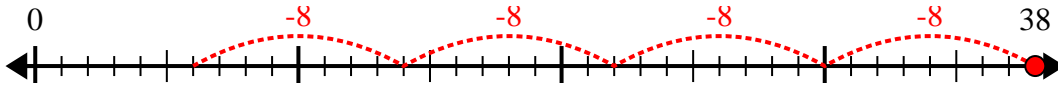
1)  $21 \div 5 =$



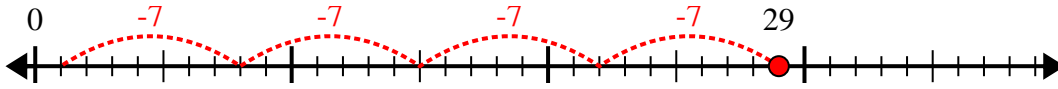
2)  $25 \div 6 =$



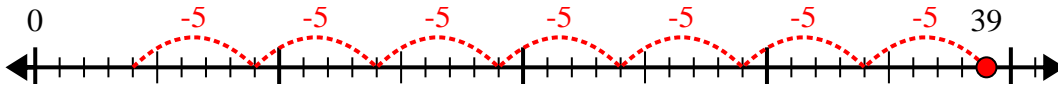
3)  $38 \div 8 =$



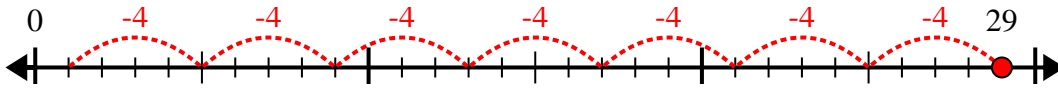
4)  $29 \div 7 =$



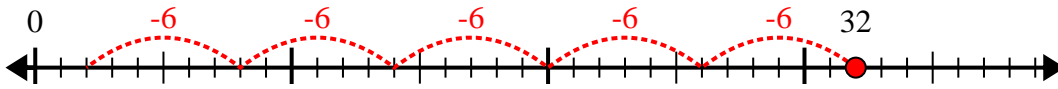
5)  $39 \div 5 =$



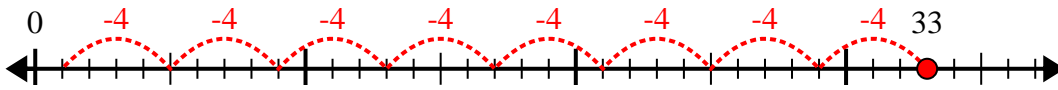
6)  $29 \div 4 =$



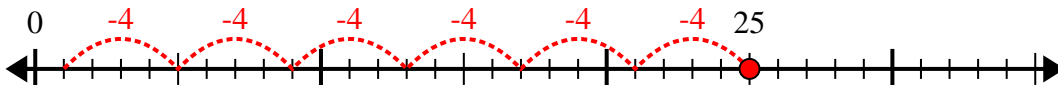
7)  $32 \div 6 =$



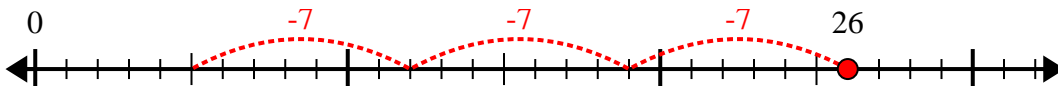
8)  $33 \div 4 =$



9)  $25 \div 4 =$



10)  $26 \div 7 =$



**Respuestas**

1. **4r1**

2. **4r1**

3. **4r6**

4. **4r1**

5. **7r4**

6. **7r1**

7. **5r2**

8. **8r1**

9. **6r1**

10. **3r5**